

بِسْمِ اللَّهِ الرَّحْمَنِ الرَّحِيمِ  
(وَأَنْزَلْنَا الْحَدِيدَ فِيهِ بَأْسٌ شَدِيدٌ وَمَنْفَعٌ لِلنَّاسِ)

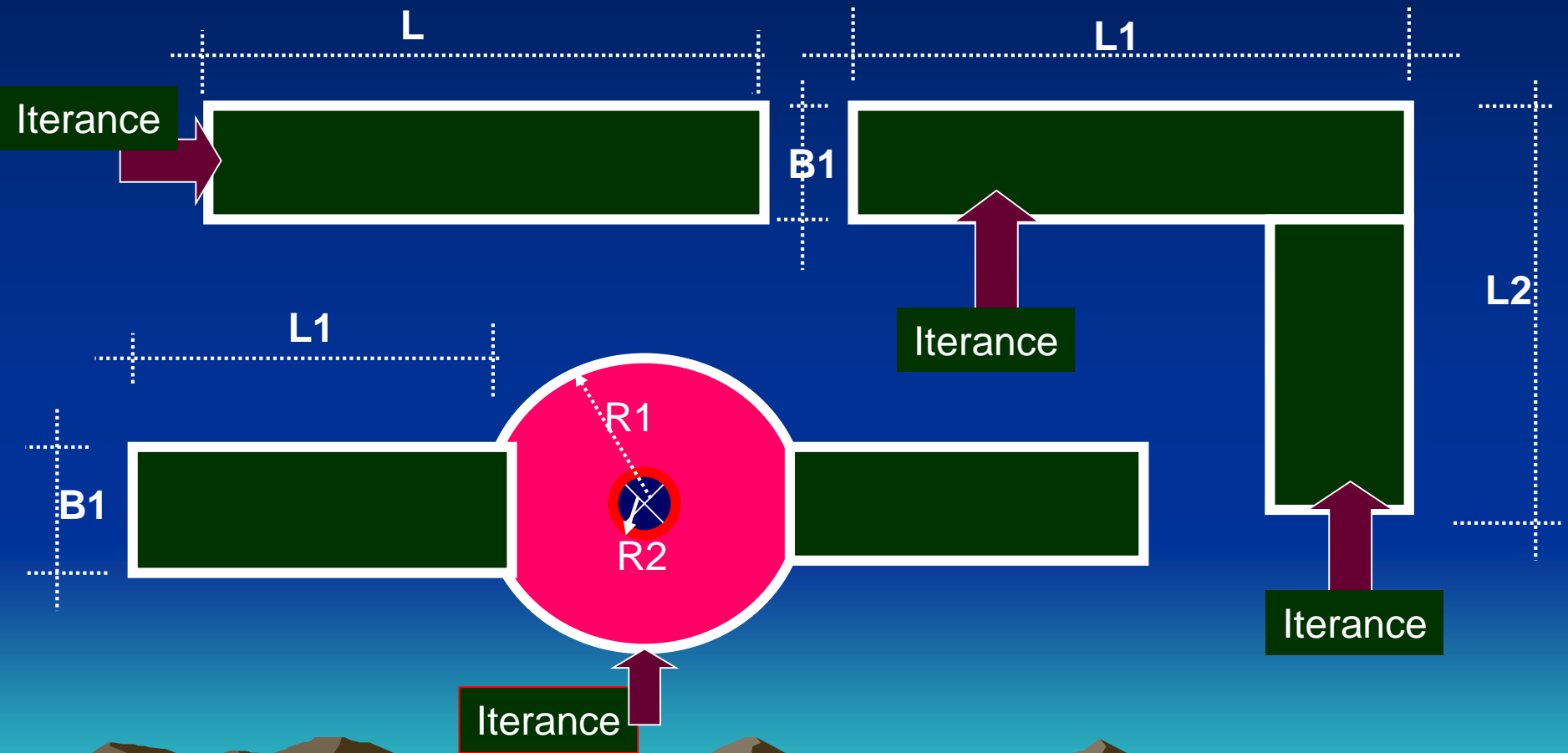
سورة (الحديد- ٢٥)

صدق الله العظيم

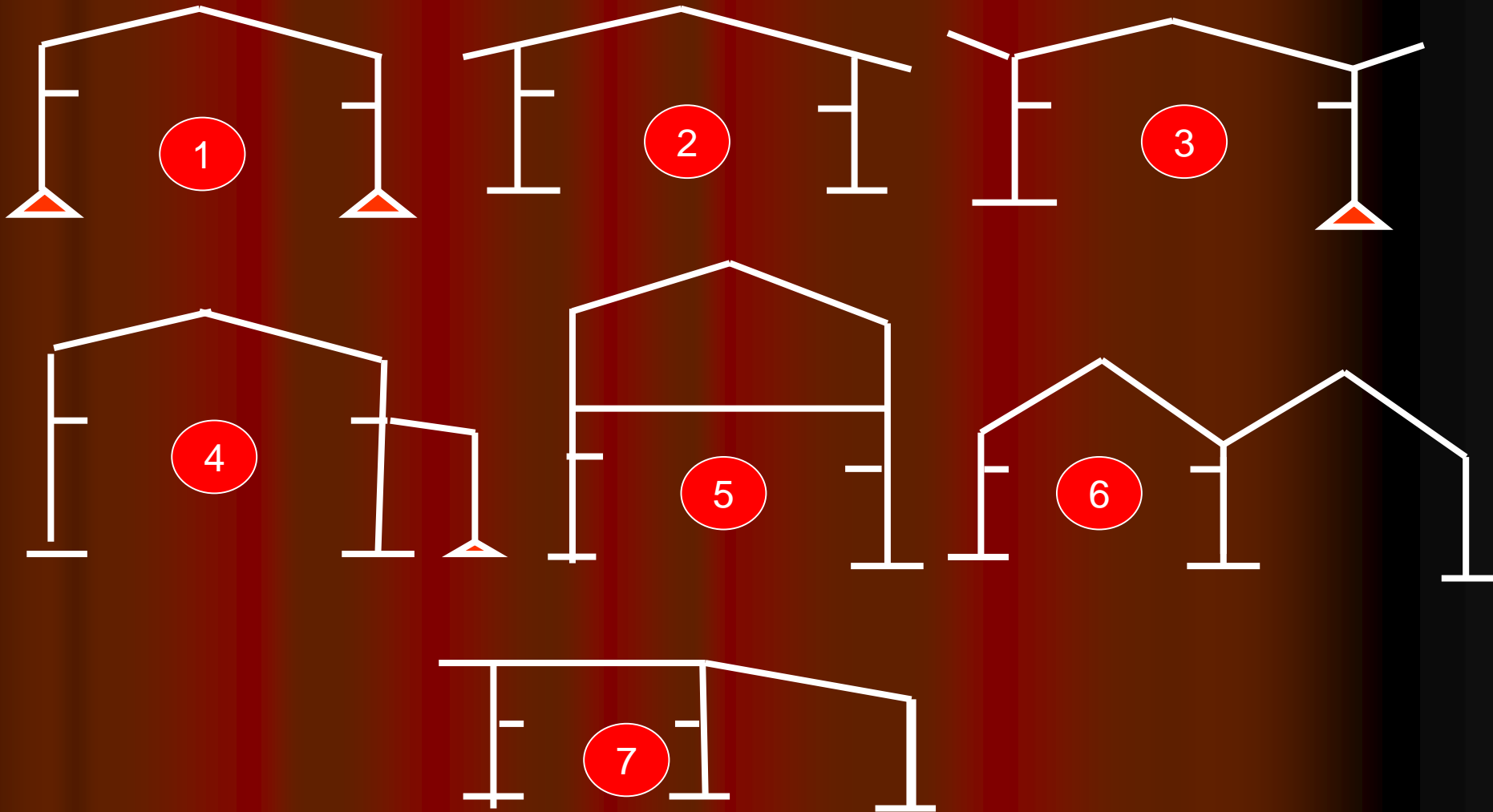
## Steel Structures (III) Part (II)

أ.د. / سعد الدين مصطفى  
أستاذ المنشآت والكبارى المعدنية

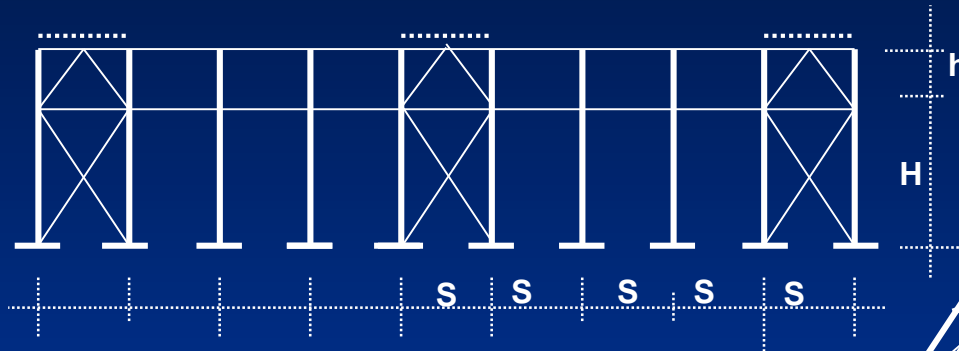
# Proposed Areas for projects



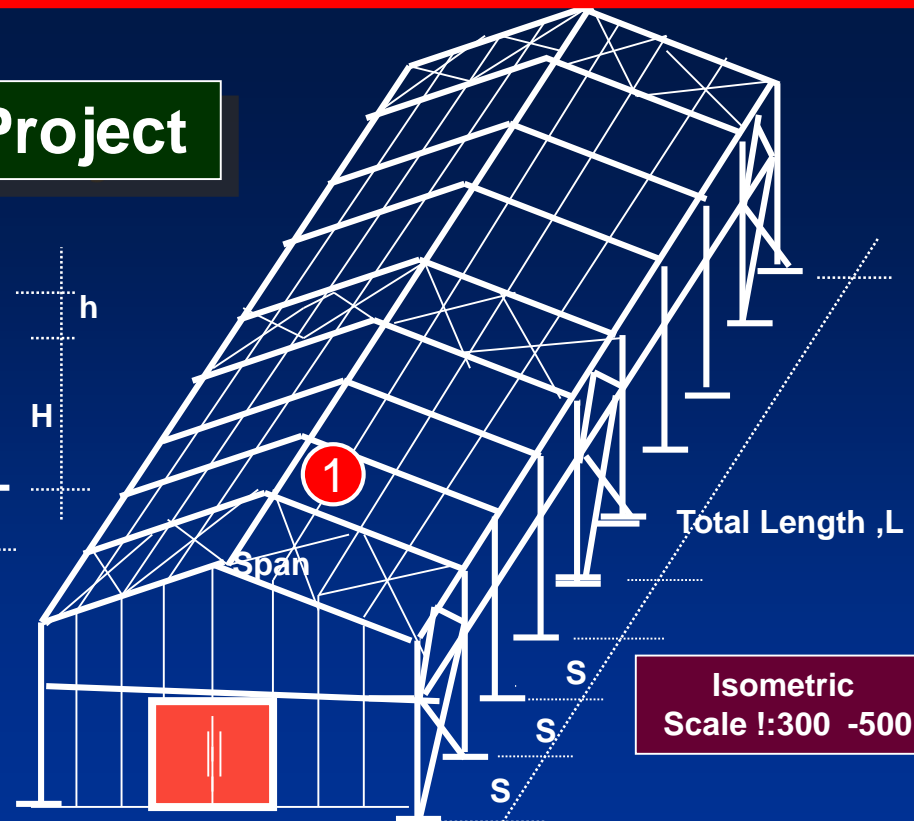
# Some of Structural Systems




# General Layout of Project



Side View- Transverse Wind Bracing  
Scale !:100 = 200

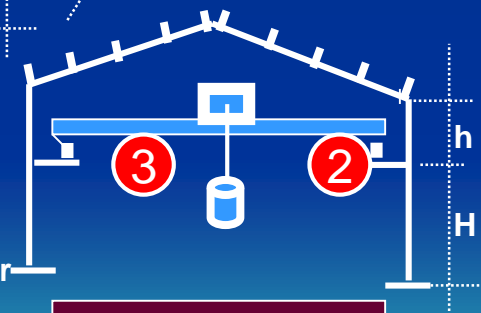


Isometric  
Scale !:300 -500



Plan - Upper Wind Bracing  
Scale !:100 = 200

- ① Purlins
- ② Crane
- ③ Crane Track Girder



Structural System  
Scale :50



# Loads Acting:

## 1) Dead Loads:

-Weight of steel Structure ( $W_{st}$ ).

Assumed  $W_{st}$  [30 - 50] kg/m<sup>2</sup>.

-Weight of covering material ( $W_{c.m}$ ).

\*Flexible Roof:

Corrugated steel sheets.  $W_c = [5 - 8]$  kg/m<sup>2</sup>.

Sandwich panel = [10 - 15] kg/m<sup>2</sup>

Asbestos  $W_c = [15 - 25]$  kg/m<sup>2</sup>

Tiels  $W_c = [30 - 50]$  kg/m<sup>2</sup>

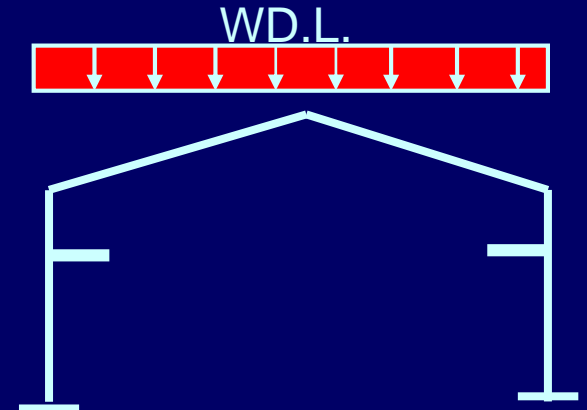

Glass  $W_c = [20 - 40]$  kg/m<sup>2</sup>

\*Rigid Roof:

Concrete  $W_c = \gamma \cdot t_s$        $\gamma = 2.5$  t/m<sup>2</sup>

Then,

$$WD.L. = (W_{s.t} + W_{c.m}) * S = \dots\dots\dots \text{Kg/m}^2$$



## 2) Live Loads:

From Curve get  $W_{L.L.}$  according  
To inclined Roof . Two Cases  
into account:

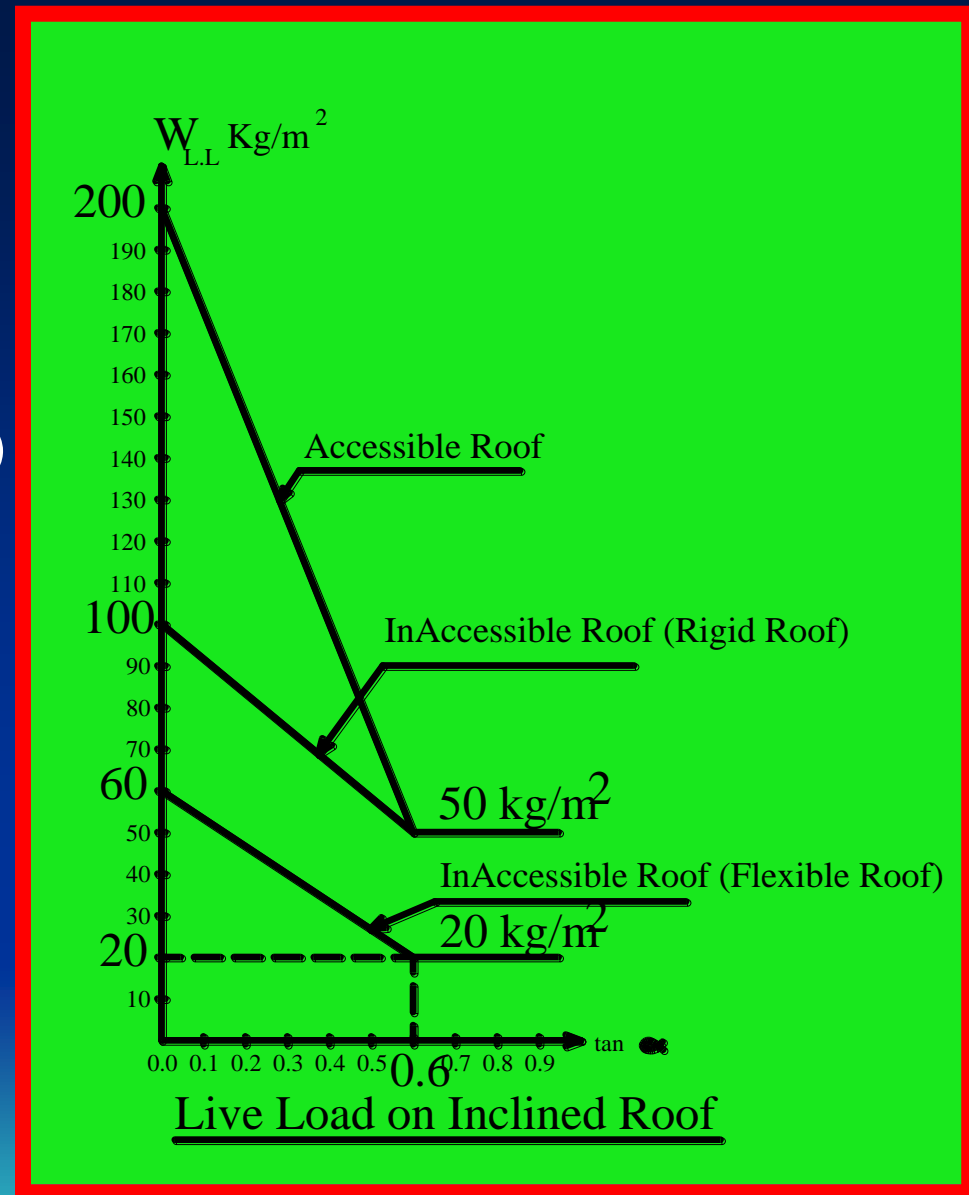
### Case1 :

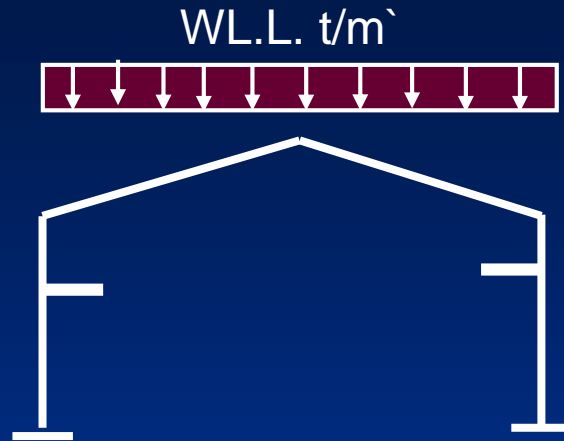
#### (a) Inaccessible Roof – Flexible)

$$W'_{L.L} = 20 + (0.6 - \tan \alpha) \frac{40}{0.6}$$

#### (b) (Inaccessible Roof – Rigid)

$$W_{L.L} = 50 + (0.6 - \tan \alpha) (50/0.6)$$





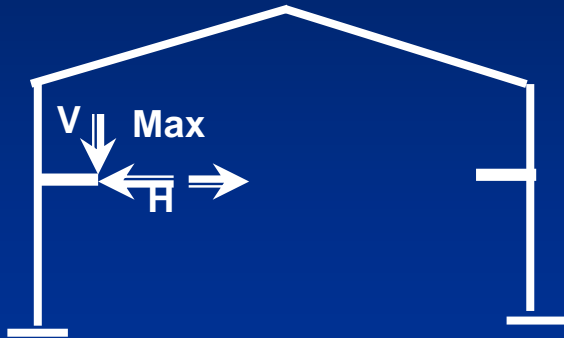
## Case 2: (Accessible Roof – Rigid)

$$W_{L.L.}^{\wedge} = 50 + (0.6 - \tan \alpha)(150/0.6)$$

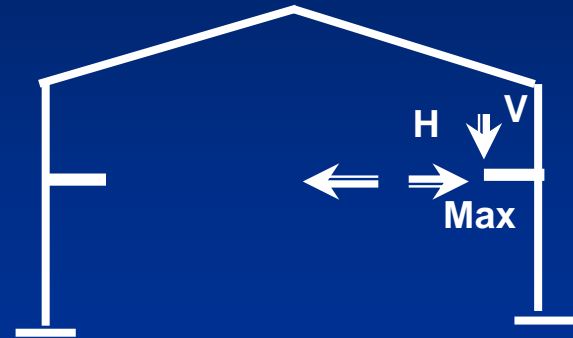
Then,

$$W_{L.L.} = W_{L.L.}^{\wedge} * S = \dots Kg / m^2$$

### 3) Crane Loads



**a) Crane Left**

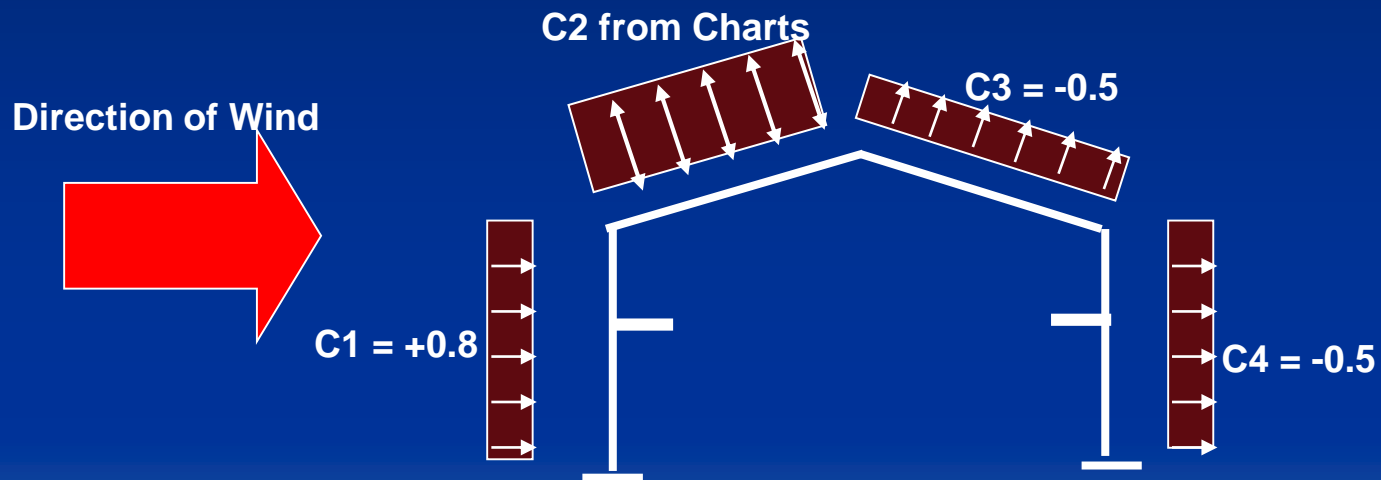


**b) Crane Right**

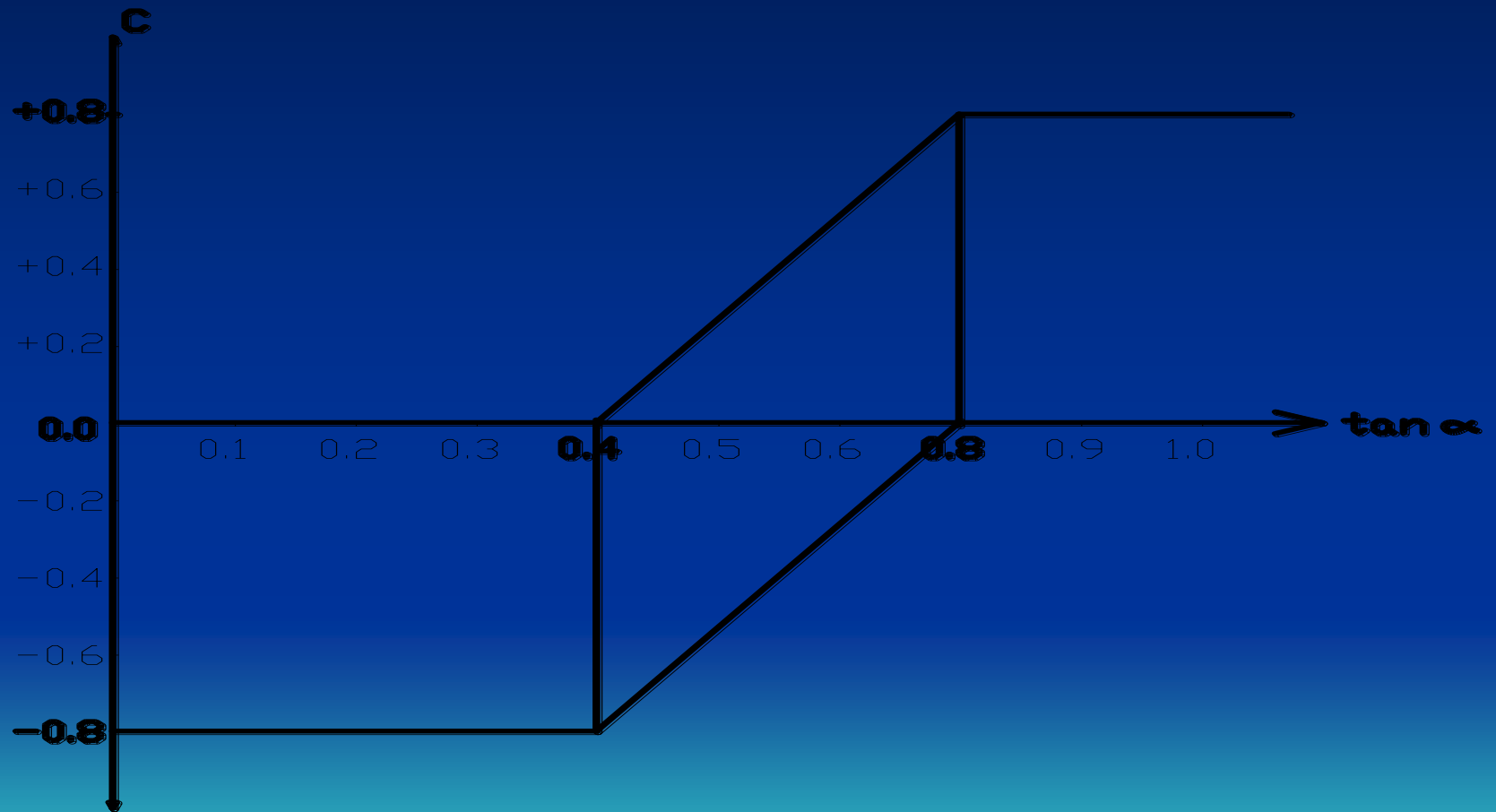
## 4) Wind Loads

$$W_{w.L.} = C * q * K = \dots\dots Kg/m^2$$

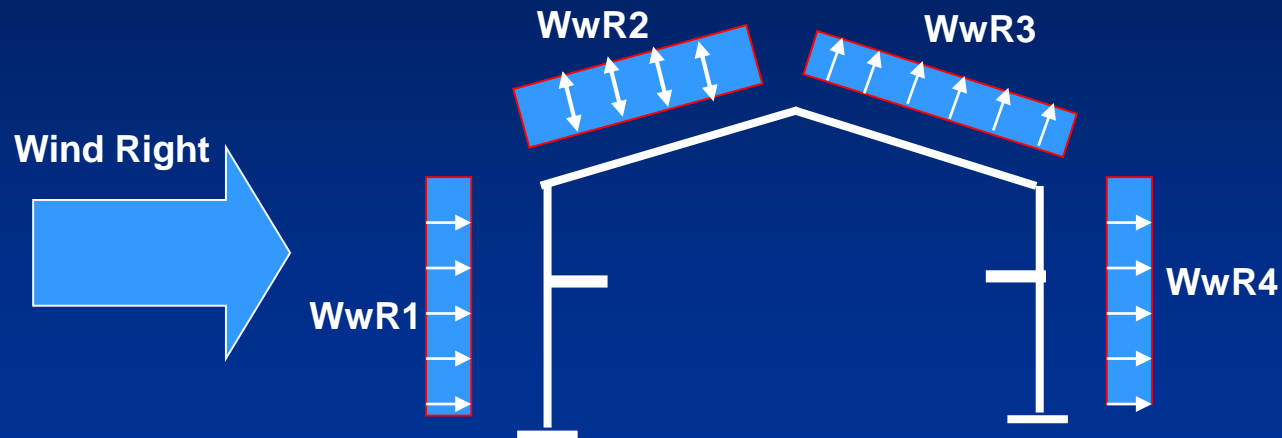
Where, Coeff. C can be determined from charts on each side of Building.



# Coefficient “C”

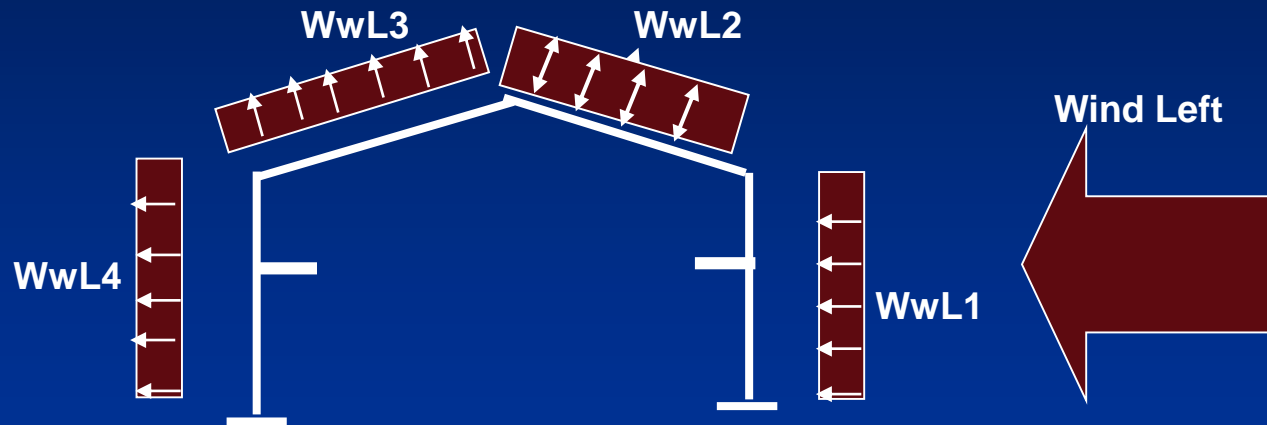


# Case 1 : Wind Right



$$WwR1 = C1*q*K \quad , \quad WwR2 = C2*q*K \quad , \quad WwR3 = C3*q*K \quad , \quad WwR4 = C4*q*K$$

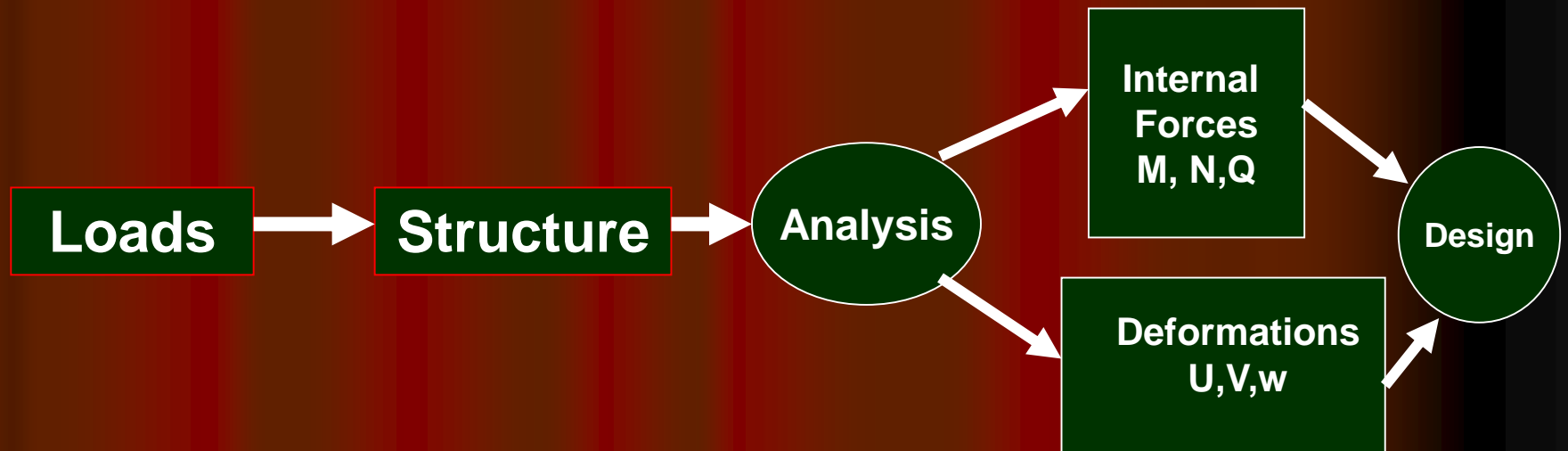
## Case 2 : Wind Left



$$W_{wL1} = C1 * q * K \quad , \quad W_{wL2} = C2 * q * K \quad , \quad W_{wL3} = C3 * q * K \quad , \quad W_{wL4} = C4 * q * K$$



# Structural Analysis



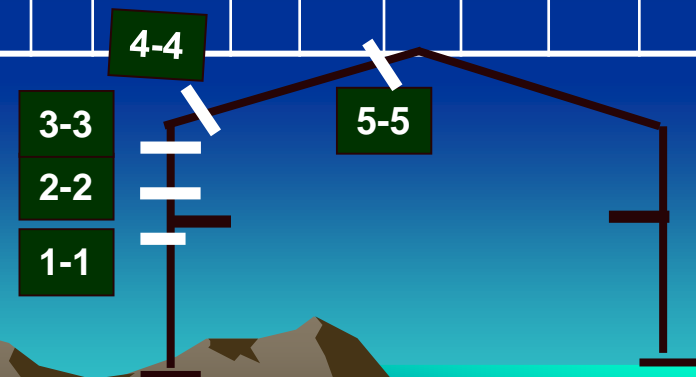
# Structural Analysis of Frame :

**From the applied Loads, by using Computer Program (Sap2000, Abokus, Broeken and Staad III) to determine the straining actions at different sections along the frame.**

**Also, the design values of the straining actions at different sections can be found.**

**Table (1) : Straining Actions at different sections along the Frame**

Sec Number	Forces	D.L.	L.L	W.L.		Crane Left			Crane Right			Max M		Max, N	
				W.L.R	W.L.L	↓	←	→	↓	←	→	+ve	-ve	+ve	-ve
Sec. 1-1	B.M														
	S.F														
	N.F														
Sec. 2-2	B.M.														
	S.F														
	N.F														



Finish Lec100



# **Chapter 2**

## **Analysis and Design of the Steel Columns**

**There are Two Design Methods Taking into Consideration :**

- (1) Allowable Stress Design (ASD)**
- (2) Load and Resistance Factor Design (LRFD)**

# Common Columns cross Sections






S.I.B  
I.P.E




B.F.I






Channel  
Section



Open Sections



Built-up -Section



Closed Section

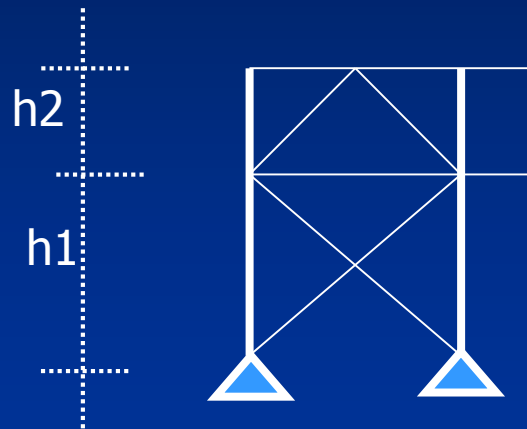
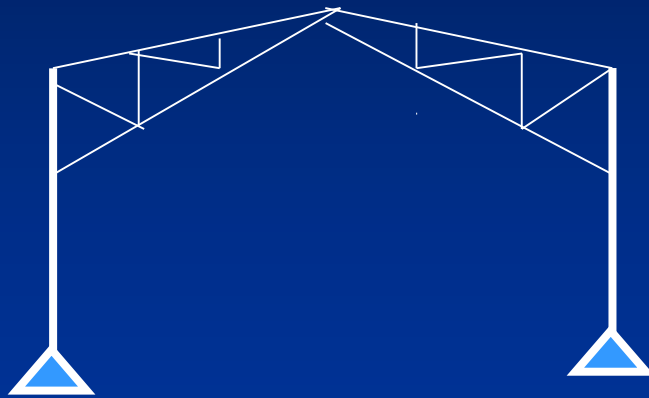
# Analysis of the Steel Columns

- During the design of beam-columns, the member is treated as a compression member (from buckling Phenomena) and as a beam (from lateral torsional buckling Phenomena).
- In general, the design procedure includes:
  - (A) Buckling Lengths ( $L_{b-in}$  &  $L_{b-Out}$ )
  - (B) Design steps (Checks )

## A) Buckling Lengths $L_{b-in\ plan}$ & $L_{b-out\ plan}$

### (1) Buckling Lengths $L_{b-in}$ & $L_{b-out}$ in Trussed Frame\_

(a) Buckling Lengths of Hinged Base trussed Frames: •

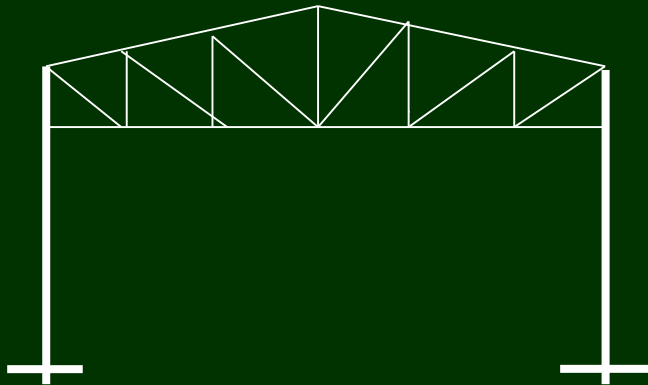


$$L_{b=in} = 2.0 (h1 + h2/2)$$

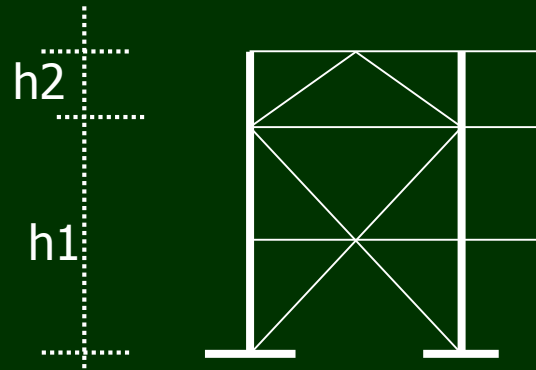
$$L_{b=out} = h1 \text{ or } h2 \text{ (greater)}$$



- (b) Buckling Lengths of Fixed Base trussed Frames:




$$L_{b=in} = 1.2 (h1 + h2/2)$$

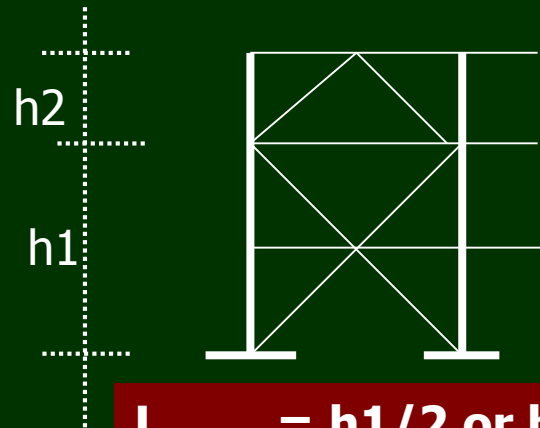


$$L_{b=out} = h1/2 \text{ or } h2 \text{ (greater)}$$

- (c) Buckling Lengths of Columns of Cantilever trussed Frames:

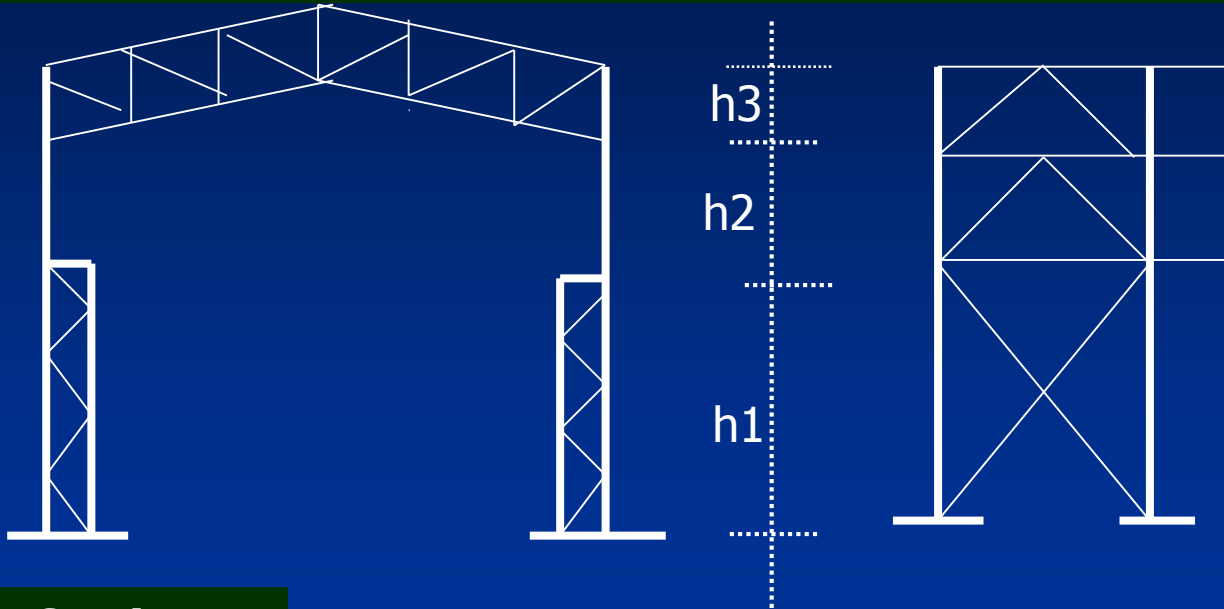


$$L_{b=in} = 2.1 (h1 + h2/2)$$



$$L_{b=out} = h1/2 \text{ or } h2 \text{ (greater)}$$

## (d) Buckling Lengths of Combined Columns Carrying Cranes in trussed Frames:



**\*\*\* Roof Column:**

$$L_{b=in} = 1.5 (h_2 + h_3/2)$$

$$L_{b=out} = h_2 \text{ or } h_3 \text{ (greater)}$$

**\*\*\* Combined Column:**

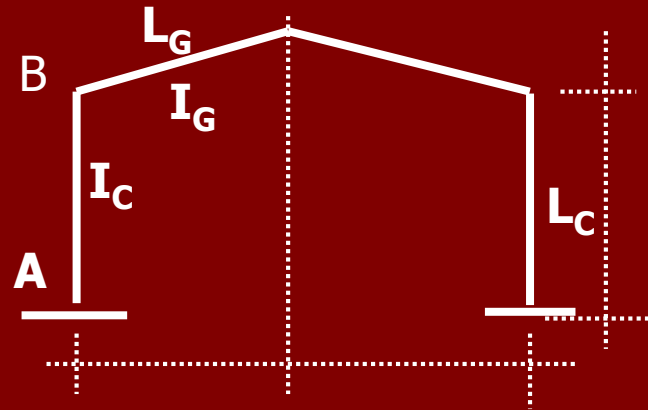
$$L_{b=in} = 1.5 h_1$$

$$L_{b=out} = h_1$$

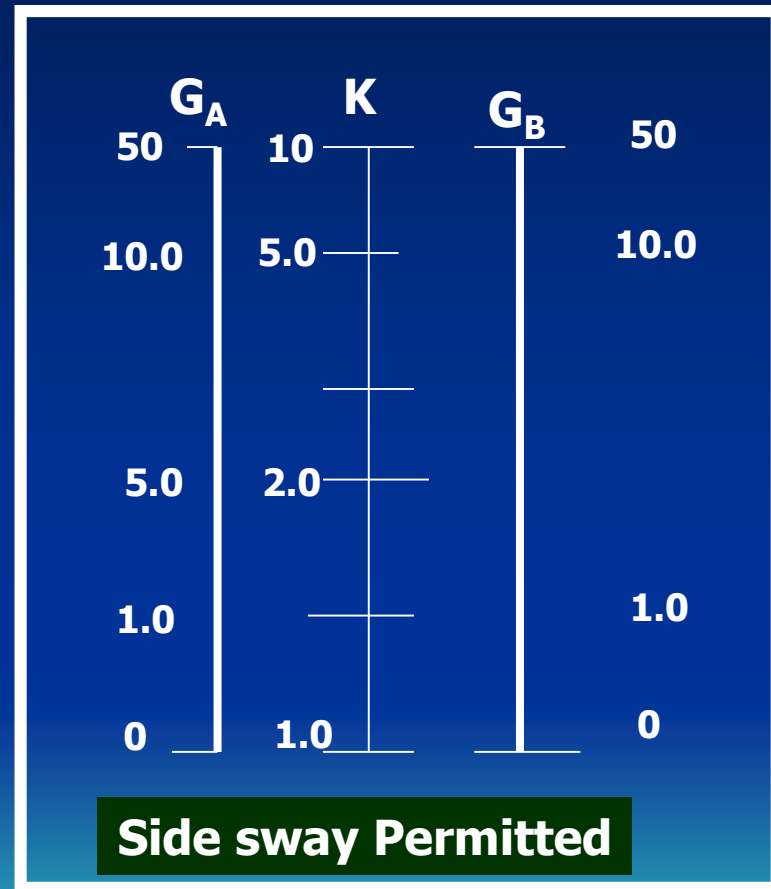
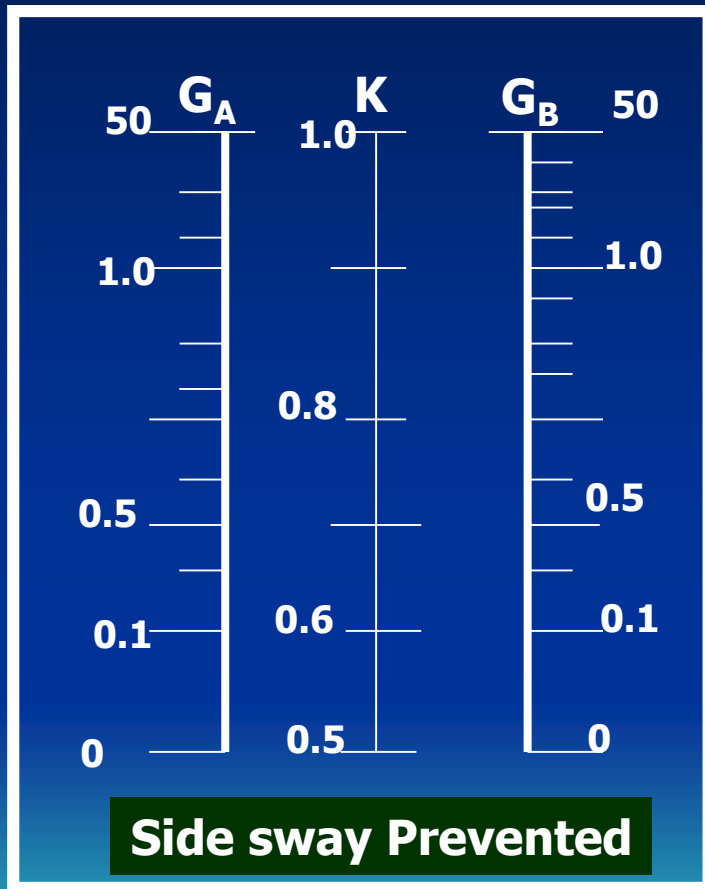
## (2) Buckling Lengths L<sub>b</sub>-in & L<sub>b</sub>-out in Rigid Frame

- The Buckling Factor (k) for a column in a rigid frame is obtained from the alignment charts in figure (4-3 in Code page 61). The two subscripts A & B refer to the points at the two ends of the columns, while G is define by :




$$G = \frac{\sum (I / L) \text{Columns}}{\sum (I / L) \text{Girders}} \quad (\text{Code pp.60})$$



# Alignment Charts for Buckling Length factor (K) of Columns in Rigid Frames {Fig.4-3 pp.61 Code}





# G - values for Columns with Special end Conditions {Code pp.60}

Column Base Condition	 	
$G_B$	$G_B = 10.0$	$G_B = 1.0$

2/9/15

# Beams with Special End Conditions (Code pp.62)

Beam End Conditions		
Side sway Prevented	$(I/L)_G * 1.5$	$(I/L)_G * 2.0$
Side sway permitted	$(I/L)_G * 0.5$	$(I/L)_G * 0.67$

2/10/15

**Example: Determine the buckling lengths of the Columns AB & CD in the following cases :**

- a) Side sway is prevented
- b) Side sway is permitted

**Column A-B**

**Case a:** Side sway is prevented:

Buckling Length in plan:  $L_{b-in} = K \cdot L$

$$G_A = 10.0$$

$$G_B = \{I/6/I/12\} = 2.0$$

From charts (p.61 Code) get  $K = 0.9$

$$L_{b-in} = 0.9 \cdot 6.0 = 5.4m$$

$$L_{b-out} = 3.0m$$

**Case b:** Side sway is permitted

Column A-B :  $L_{b-in} = K \cdot L$

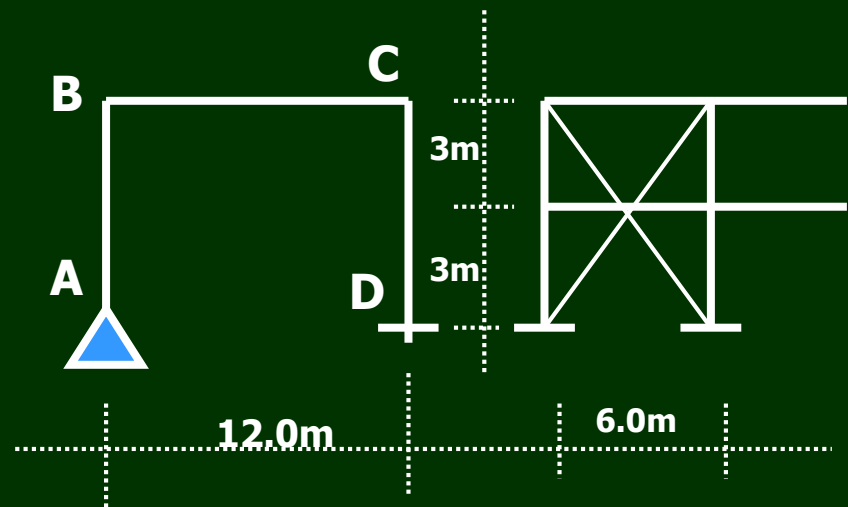
$$G_A = 10.0$$

$$G_B = \{I/6/I/12\} = 2.0$$

From charts (p.61 Code) get  $K = 2.15$

$$L_{b-in} = 2.15 \cdot 6.0 = 12.9m$$

$$L_{b-out} = 3.0m$$



## Column C-D

Case a: Side sway is prevented:

Buckling Length in plan:  $L_{b-in} = K * L$

$$G_A = 1.0$$

$$G_B = \{I/6/I/12\} = 2.0$$

From charts (p.61 Code) get  $K = 0.8$

$$L_{b-in} = 0.8 * 6.0 = 4.8\text{m}$$

$$L_{b-out} = 3.0\text{m}$$

Case b: Side sway is permitted

Column A-B :  $L_{b-in} = K * L$

$$G_A = 1.0$$

$$G_B = \{I/6/I/12\} = 2.0$$

From charts (p.61 Code) get  $K = 1.5$

$$L_{b-in} = 1.5 * 6.0 = 9.0\text{ m}$$

$$L_{b-out} = 3.0\text{m}$$



**Determine the Buckling Lengths of the Columns A-B and D-E, where the Side sway is prevented**  
**If the moment of inertia Of the columns is one**  
**And half moment of Inertia of the rafter**

### **Solution**

#### **Column A-B**

$$G_A = ((1.5I/5 + 1.5I/5)) / (I/4) \\ = (3I/5) / (I/4) = 2.4$$

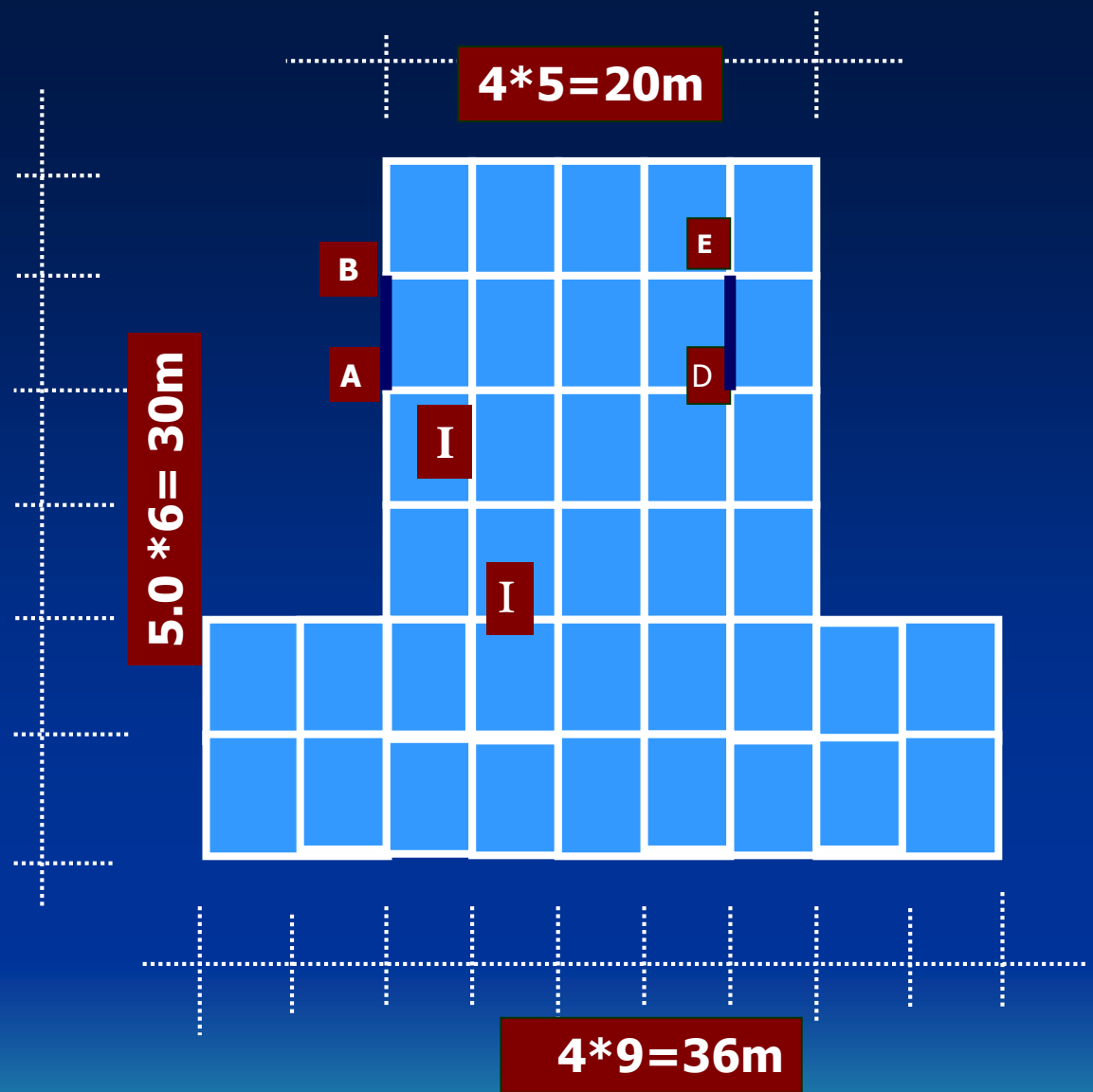
$$G_B = 2.4$$

**From charts 4-3 PP61 get**  
 **$K = 0.88$**

$$L_{b-in} K * L = 0.88 * 5 = 4.4m$$

$$L_{b-out} = 5.0m$$

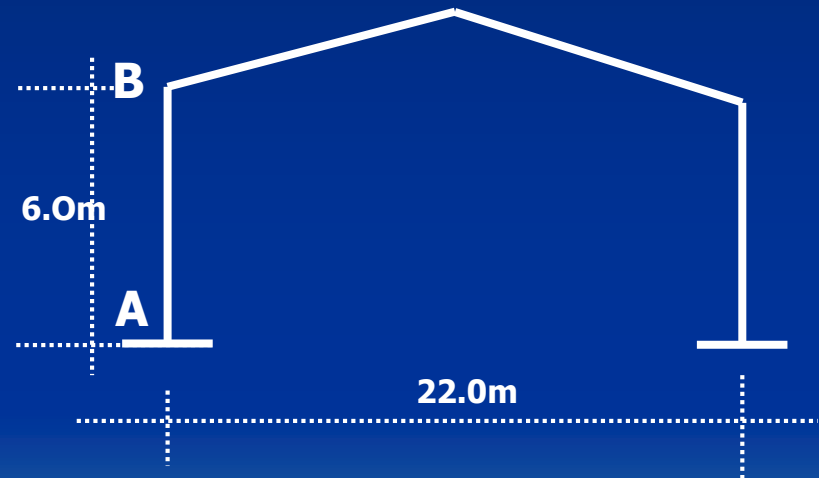
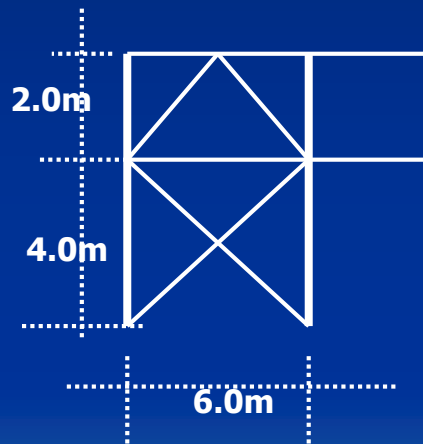
**Column D-E as the same**  
**Procedure of column A-B.**



# Design Procedure of Columns

- (1) Data given: {MD, ND at critical section •  
along the column, Vertical bracing system, •  
Lb-in and Lb-out. •
- (2) Estimation of the cross section •
- (3) Check for Local Buckling •
- (4) Check for Lateral Torsional Buckling •
- (5) Check for Column Buckling •
- (6) Check the interaction Equation. •

- **Example : Design a suitable rolled Section for the column A-B**  
Shown the given figure if the column subjected to the following loads: MD = 20t.m and ND = 20t.



**2/15/15**

بِسْمِ اللَّهِ الرَّحْمَنِ الرَّحِيمِ

## Lec.3

# Design of Steel Columns

Two Cases into Consideration:

- (I) Column Subjected to Axial Force Only (N.F.)
- (II) Column Subjected to Axial Force and Bending Moment (N.F.& B.M.)

# (I) Column Subjected to Axial Force Only

- *Example: Design a Column "AB" to carry a total load 100t . The column is hinged from both sides, the length of the column is 8.0ms ( $L_{bx} = L_{by} = 800 \text{ cm}$ )*

## (i) Stiffness Condition:

$$L_{bx}/i_x \leq 180 \quad i_x \geq 4.44 \text{ cm}$$

$$L_{by}/i_y \leq 180 \quad i_y \geq 4.44 \text{ cm}$$

## (ii) Stress Condition:

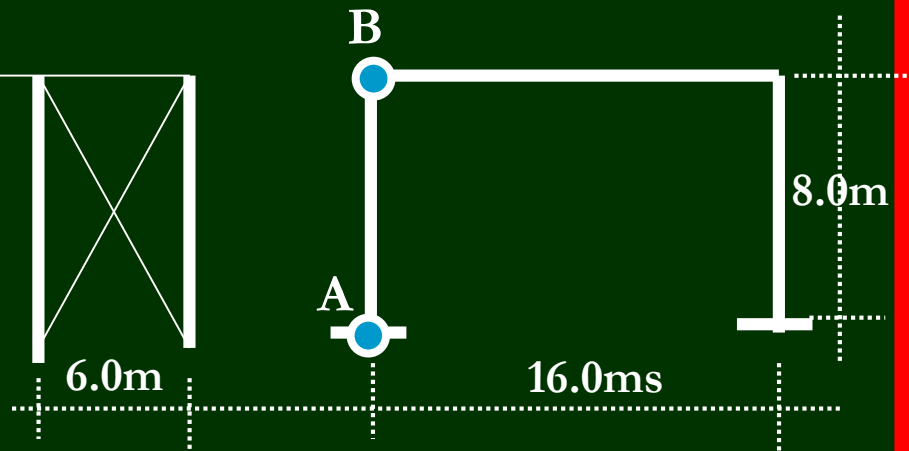
$$A_{req.} = \text{Axial Force} / F_{assumed} =$$

$$= 100 / 0.7 = 142.86 \text{ cm}^2 \quad \text{Choice B.F.I NO.360 , } i_x = 15.6, i_y = 7.49,$$

$$A = 181 \text{ cm}^2$$

## (iii) Check For Local Buckling:

$$\text{Web : } dw = h - 4tf = 27 \text{ cm}$$



$$(d_w/t_w) = 27/1.25 = 21.6 \leq (58/\sqrt{F_y}) 37.3 \text{ (Code pp.9)}$$

*O.K. Compact*

*Flange :*

$$C = (b_f - 2t_f - t_w) = 12.125 \text{ cm}$$

$$(C/t_f)_{act} = (12.125/2.25) 5.39 \leq (16.9/\sqrt{F_y}) = 10.9$$

*O.K. Compact*

*The Section is compact*

*(iv) Check of Stresses:*

$$\lambda_x = (L_{b_x}/i_x) = (800/15.6) = 51.28$$

$$\lambda_y = (L_{b_y}/i_y) = (800/7.49) = 106.8 \quad \text{Take } \lambda_{max} = 106.8$$

$$F_{all.c} = 7500/106.8^2 = 0.657 \text{ t/cm}^2$$

$$F_{act} = (\text{Axial Force}/\text{Area}) = (100/181) = 0.55 \text{ t/cm}^2 < F_c \text{ O.K. Safe}$$

## (II) Columns Subjected to Axial force and Bending Moment (N & M)

### Design Procedure of Column subjected to (M & N) :

- (1) Data given:  $\{M_D, N_D$  at Critical Section Along the Column, Side Sway Prevented or permitted and  $L_{b-in\ plan}$  and  $L_{b-out\ of\ Plan}$ .
- (2) Estimation of the cross section
- (3) Check for Local Buckling (Code pp. 9 to 12 )
- (4) Check for Lateral Torsional Buckling (Code pp. 15 to 18)
- (5) Check of Stresses (Interaction Equation Code pp.25).

# Lateral Torsional Buckling of the Comp. Flange

(1) Determine the Actual Unsupported Length of the Comp. Flange of the Column “ $L_{Uact}$ ” and the coefficient  $C_b$  is depending on the type of load and support conditions:

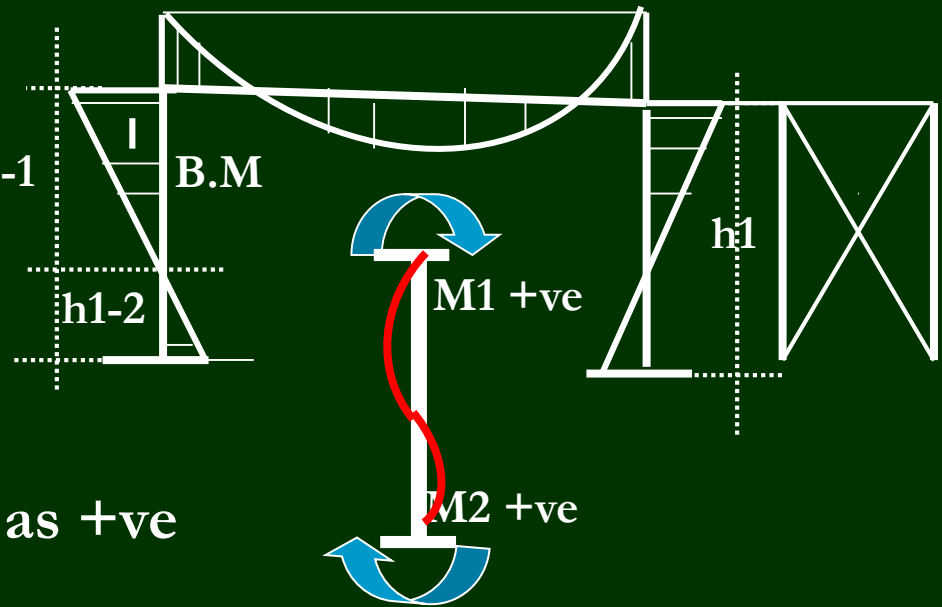
$$L_{Uact} = h_{1-2} \text{ or } h_{1-1}(\text{greater})$$

$$C_b = 1.75 + 1.05 \alpha + 0.3 \alpha^2 \leq 2.3$$

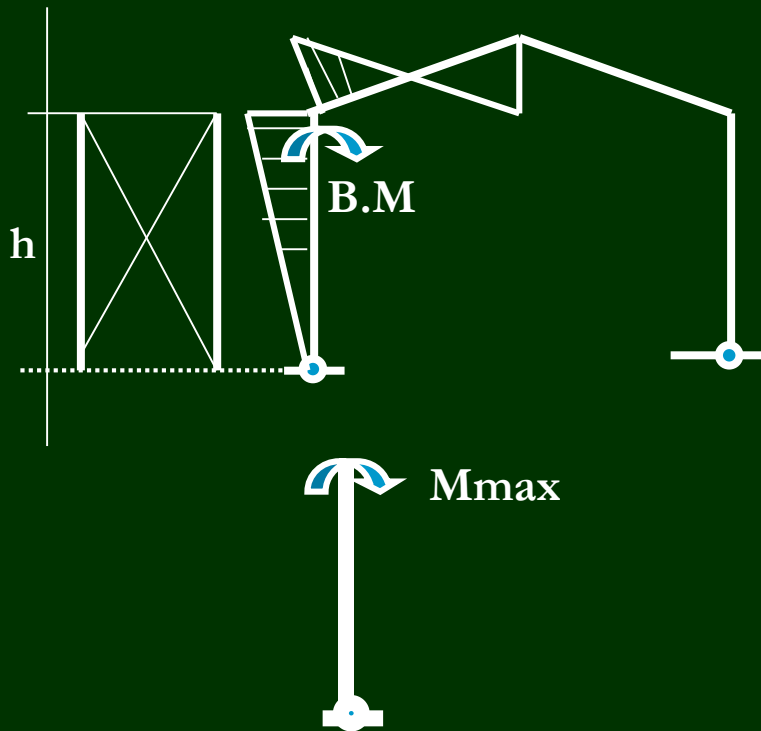
Where:

$$\alpha = M_1/M_2 = +ve$$

$M_1/M_2$  is the algebraic ratio of the smaller to the larger end moments of the column taken as +ve  
For reverse curvature bending.



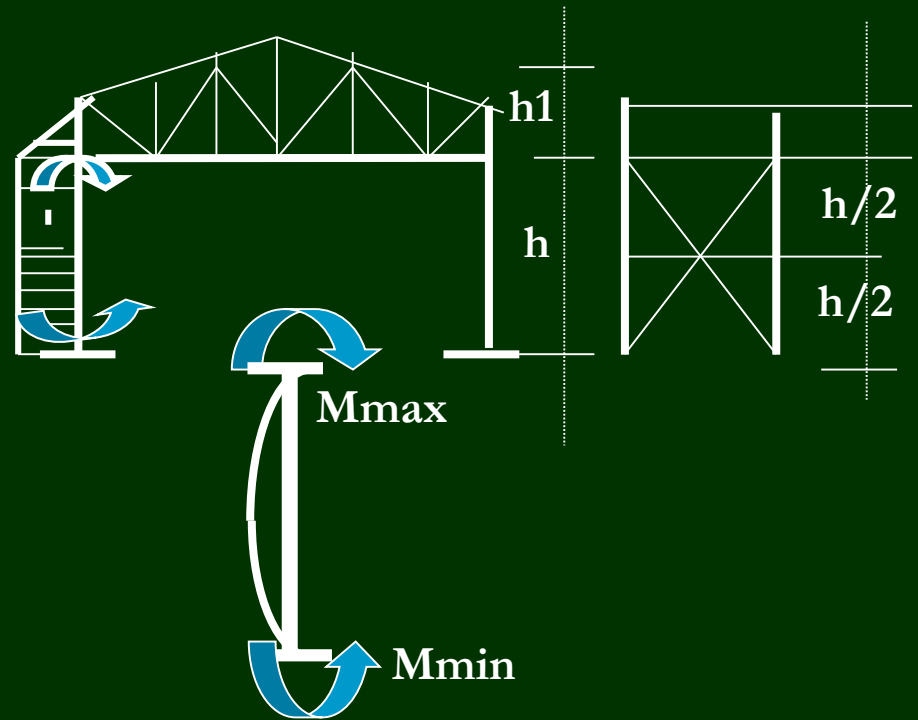




$$L_{Uact} = h$$

$$\alpha = M_{min}/M_{max} = 0.0$$

$$Cb = 1.75$$



$$L_{Uact} = h/2$$

$$\alpha = M_{min}/M_{max} = -1.0$$

$$Cb = 1.75 + 1.05 \alpha + 0.3 \alpha^2 \leq 2.3$$

(code pp.19 Eq.2.28)

(2) Determine the Actual Lateral Torsional Buckling “Fbc”:

- Calculate the values if Lu-max according to the following equations (Code pp. 16):

$$L_{u1\max} \leq (20b_F/\sqrt{F_y}) \quad (\text{Eq. 2.18 in Code})$$

$$L_{u2\max} \leq (1380.A_F/d.F_y)C_b \quad (\text{Eq. 2.18 in Code})$$

- If  $L_{u \text{ act.}} \leq L_{u1 \& 2 \max}$  (no Lateral torsional buckling is considered)

$$F_{be} = 0.64 F_y \quad \text{if the section is compact}$$

$$F_{bc} = 0.58 F_y \quad \text{if the section is non-compact}$$

- If  $L_{u \text{ act.}} > L_{u1} \text{ OR } L_{u2} \text{ max}$

(Then Calculate the Lateral Torsional Buckling  $F_{Ltb}$  as following (pp.18 &19 in Code):

$$F_{Ltb} = \sqrt{F_{Ltb1}^2 + F_{Ltb2}^2} \leq 0.58F_y \text{ (code pp.19)}$$

Firstly : Find the  $F_{Ltb1}$  as follows:

$$\longrightarrow F_{Ltb1} = \{800.Af.Cb/L_{uact.d}\} \leq 0.58F_y \text{ (Eq. 2.23 Code)}$$

Secondly: Find the  $F_{Ltb2}$  as follows :

- When  $L_{uact} < 84\sqrt{Cb/F_y}$

$$\longrightarrow F_{Ltb2} = 0.58F_y$$

- When  $84\sqrt{Cb/F_y} \leq L_{uact}/r_T \leq 188\sqrt{Cb/F_y}$

$$\longrightarrow F_{Ltb2} = (0.64 - (L_{uact}/r_T)^2 F_y / 1.176 \cdot 10^5 \cdot Cb) F_y \leq 0.58F_y$$

■ When  $Lu_{act}/r_T > 188\sqrt{C_b/F_y}$

➡  $F_{Ltb2} = 12000(L_u/r_T)C_b \leq 0.58F_y$  (code pp.18)

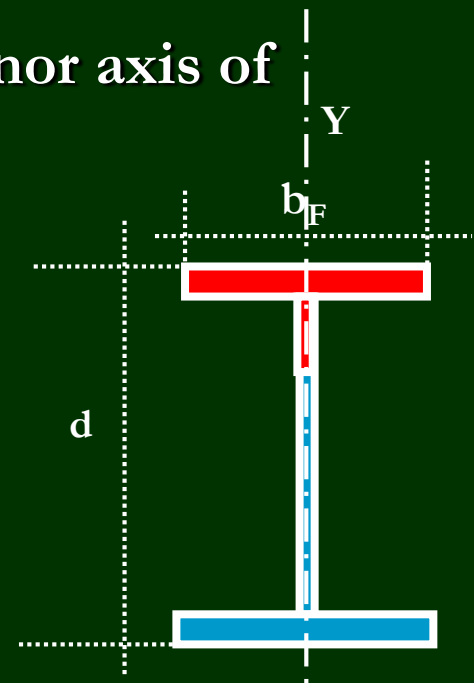
Then,

➡  $FL_{tb} = \sqrt{F_{Ltb1}^2 + F_{Ltb2}^2} \leq 0.58F_y$  (code pp.19)

Where :  $r_T$  = Radius of Gyration about minor axis of section concerning the compression flange plus sixth of the compression area of web

$$r_T = \sqrt{I_{y-y}/A_f} =$$

$$I_{y-y} = bf(tf)^3/12 + tw.(hw/6)^3/12$$



# Check of Stresses (Interaction Equation 2.35)

in Code pp.25 :

$$\frac{f_{ca}}{F_c} + \frac{f_{bx}}{F_{bcx}} A_1 + \frac{f_{by}}{F_{bcy}} A_2 \leq 1.0$$

■ Where :

$f_{ca}$  = Actual Compression Stresses  $= (N/A)$

$F_c$  = Allowable compression Stresses ( $\lambda \leq 100$  or  $\lambda > 100$ )

$f_{bx}$  = Actual Bending Stresses in x-direction ( $M_x/S_x$ )

$F_{bcx}$  =  $0.64F_y$  (case of Compact) or  $0.58F_y$  in case of non-compact (Allowable bending Stresses on the compression side due to  $M_x$ )

$f_{by}$  = Actual Bending Stresses in y-direction ( $M_y/S_y$ )

$F_{bcy}$  = Actual Bending Stresses due to

$M_y = 0.72F_y$  in Case of Compact Sec. and  
 $= 0.58F_y$  in Case of Non-Compact Sec.)

$A_1$  and  $A_2 = 1.0$  for  $(f_{ca}/F_c) \leq 0.15$ , (Code pp.25),

Otherwise:

$A_1 = (C_{mx}/(1-f_{ca}/F_{EX}))$  (Code pp.25)

and  $A_2 = (C_{my}/(1-f_{ca}/F_{EY}))$  (Code pp.25)

3/11/18

Where:

- $C_{mx}$  and  $C_{my}$  are Moment Modification Factors and to be taken according to the following:
  - (i) Side sway permitted  $C_m = 0.85$
  - (ii) Side sway prevented with transverse Load  
 $C_m = 1.0$  Hinge End       $C_m = 0.85$  Fixed End  
without transverse Load :  
 $C_m = 0.6 - 0.4(M_1/M_2) \leq 0.4$
- The Euler Stresses for buckling in X&Y directions:  
 $F_{EX} = (7500/\lambda_x^2)$  (Codepp.26 Eq.2.36)  
 $F_{EY} = (7500/\lambda_y^2)$  (Codepp.26 Eq.2.36)

- Example : Design a suitable rolled Section for the column A-B Shown the given figure if the column subjected to the following loads: MD = 20t.m and ND = 20t.(side sway is prevented)

**(1) Data Given :**

- MD = 20 t.m
- ND = 20t
- Buckling Lengths

$$L_{b-in} = K * L$$

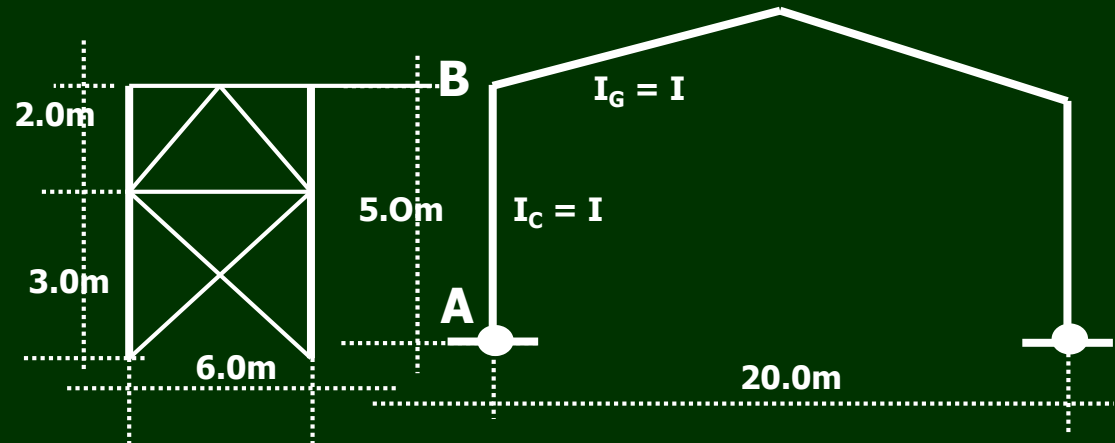
$$G_A = 10.0$$

$$G_B = (I/5 / I/10) = 2$$

From Charts (4-3) (Code pp.61 )  $K = 0.91$

$$\text{Then, } L_{b-in} = K * L = 4.55m$$

$$L_{b-out} = \text{Greater} = 3.0m$$





## (2) Estimation of the cross section

Assume  $F_b = 0.8$  to  $1.2 \text{ t/cm}^2$

$$Z_x = (M_D / F_b) = (20 * 100 / 1.0) = 2000 \text{ cm}^2$$

Try B.F.I.B. No. = 320

$$Z_x = 2020 \text{ cm}^3, Z_y = 661 \text{ cm}^3, i_x = 13.7 \text{ cms}, i_y = 7.6 \text{ cms}, b = 30 \text{ cms}$$

$$A = 171 \text{ cm}^2, t_F = 2.2 \text{ cms}, t_w = 1.3 \text{ cms}$$

## (3) Check for Local Buckling:

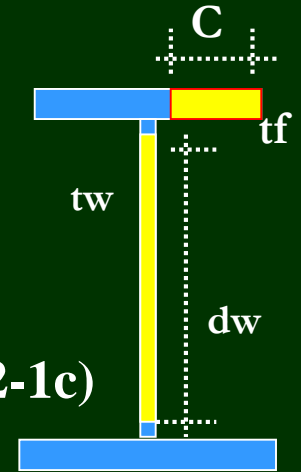
A) Flange Component (Code Page 11 - table (2-1c):

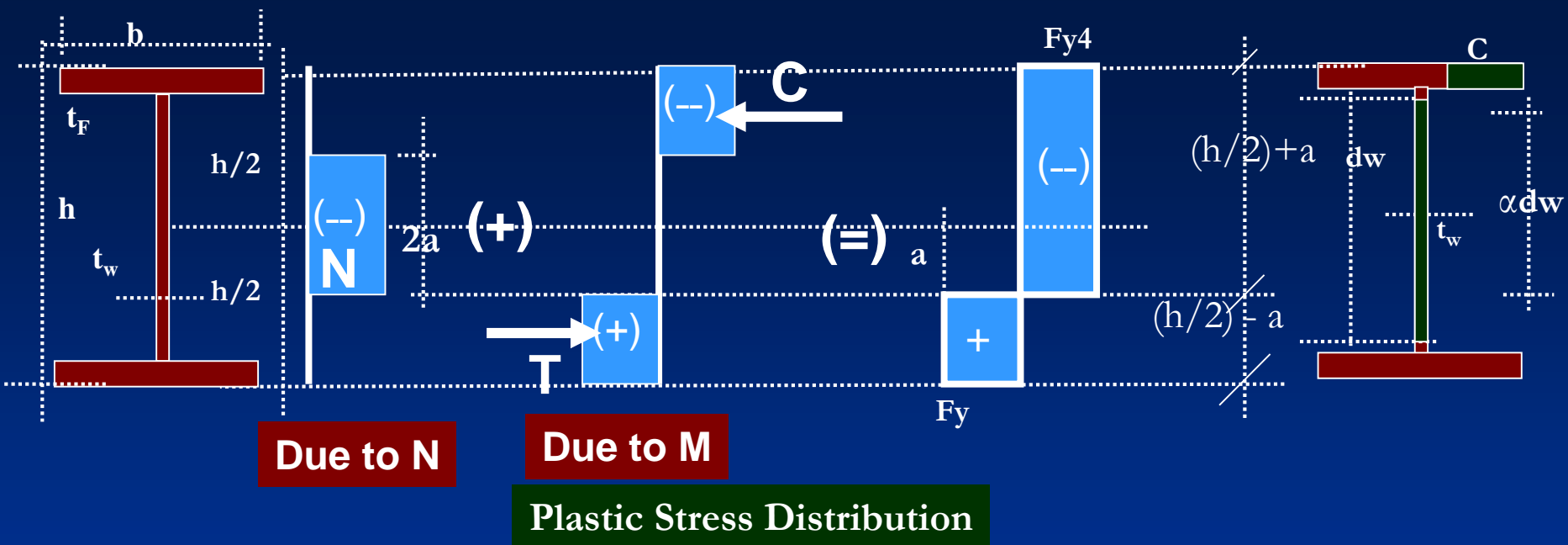
$$C = 0.5(b_F - t_w - 2t_F) = 12.15 \text{ cm}$$

$$C/t_F = (12.15 / 2.2) = 5.52 < (16.9 / \sqrt{2.4}) = 10.91 \text{ (Code table 2-1c)}$$

Then, the flange is thus Compact.

B) Web Element ( Code Page 9 table(2-1a):





From the stress Diagram distribution the value of “a” is determined as Follows:

$$N = 2 \cdot a \cdot t_w \cdot F_y$$

$$20 = 2 \cdot a \cdot 1.3 \cdot 2.4$$

$$\text{Then, } a = 3.2 \text{ cm}$$

$$\alpha dw = h/2 + a - 2t_F = 21.2 \text{ cm}$$

$$dw = h - 4t_F = 23.2 \text{ cm}$$

$$\alpha = \alpha dw / dw = 0.914 > 0.5$$

- $(dw/tw)_{Code} = \{(699\sqrt{F_y})/(13\alpha - 1)\} = 41.48$  (Code pp.9)
- $(dw/tw)_{Act.} = (23.2/1.3) = 17.84 < 41.48$  (O.K. Compact)

*The Section is Compact.*

#### *4- Check for Lateral Torsional Buckling •*

- $L_u \text{ act} = 300\text{cm}$
- $L_{u1} = \{20bf/\sqrt{F_y}\} = \{20.30/\sqrt{2.4}\} = 387.3 \text{ cm} > 300$  Safe
- $L_{u2} = \{1380Af/d.F_y\}C_b =$   
 $= \{1380*66.0/32*2.4\} 1.75 = 2075.4\text{cm} > 300$

Since  $L_{u1}$  &  $L_{u2}$  greater than  $L_u \text{ act}$ , then calculate  $FL_{tb}$ .

- $F_{L_{tb1}} = \{800.Af.C_b/L_{uact}.d\} \leq 0.58F_y$  (Eq. 2.23 Code)  
 $= \{800*66*1.75/300*32\} = 9.625 > 0.58 F_y$   
 Since  $FL_{tb1}$  is greater than  $0.58 F_y = 1.4 \text{ t/cm}^2$ ,  
 , no need to calculate  $FL_{tb2}$

**(5) Check of Stresses (Interaction Equation 2.35**  
**Code pp.25):**

$$\frac{f_{ca}}{F_c} + \frac{f_{bx}}{F_{bcx}} A_1 + \frac{f_{by}}{F_{bcy}} A_2 \leq 1.0$$

Where:

$$f_{Ca} = (N/A) = 20/171 = 0.117 \text{ t/cm}^2$$

$$\lambda_x = L_{bx}/i_x = 455/13.7 = 33.21$$

$$\lambda_y = L_{by}/i_y = 300/7.6 = 39.47 \quad \text{Then, } \lambda_{\max} = 39.47$$

$$F_c = 1.4 - 0.000065(39.47)^2 = 1.3 \text{ t/cm}^2$$

$$(F_{ca}/F_c) = (0.117/1.3) = 0.09 \text{ t/cm}^2 < 0.15$$

Then,  $A_1$  and  $A_2 = 1.0$

$$f_{bc} = M_x / S_x = (20 * 100 / 2020) = 0.99 \text{ t/cm}^2$$

$$F_{bc} = 0.64 F_y = 1.536 \text{ t/cm}^2$$

$$\frac{f_{ca}}{F_c} + \frac{f_{bx}}{F_{bcx}} A_1 + \cancel{\frac{f_{by}}{F_{bcy}} A_2} \leq 1.0$$

$$\frac{0.117}{1.3} + \frac{0.99}{1.536} (1.0) + \cancel{\frac{0.0}{0.0} 1.0} = 0.734 \leq 1.0$$


O.K. Safe and Economic

بِسْمِ اللَّهِ الرَّحْمَنِ الرَّحِيمِ


Lec. 4

***Design of Combined Steel Columns with  
Lacing and Batten Plates***


4/1/20



Single



Double




1- Lacing Systems

2- Batten System

3- Combination of Laced and Battened Systems

Systems of Laced and Battened Columns

- Generally, Columns with Combined Section are suitable in case of Large Straining actions or when rolled I-Sections are not readily available.
- The Combined Sections of the Steel Columns are usually chosen to be 2-channels, 2-IPE or 4-angles connected together by Lacing Bars or Batten Plates .



**Cross Sections of Built-Up Columns**



## (II) Combined Columns Subjected to Axial force and Bending Moment (N & M)

### Design Procedure of Combined Column subjected to (M & N) :

- (1) Data given:  $\{M_D, N_D$  at Critical Section Along the Column, Side Sway Prevented or permitted and  $L_{b-in\ plan}$  and  $L_{b-out\ of\ Plan}$ .
- (2) Estimation of the cross section
- (3) Check for Local Buckling (Code pp. 9 to 12 )
- (4) Check of Stresses (Interaction Equation Code pp.25).

- Example :For the pitched Roof Frame shown in Figure is required to design the “AB” as 2-channels spaced 50 cm using lacing bars, if the maximum B.M. at A=30.0t.m, the corresponding normal force,  $N= 30t$  and the maximum Shearing Force at A ,  $Q = 4.0 t$ , Side sway is permitted.

- (1) Data Given:

- $MD = 30 \text{ t.m}$

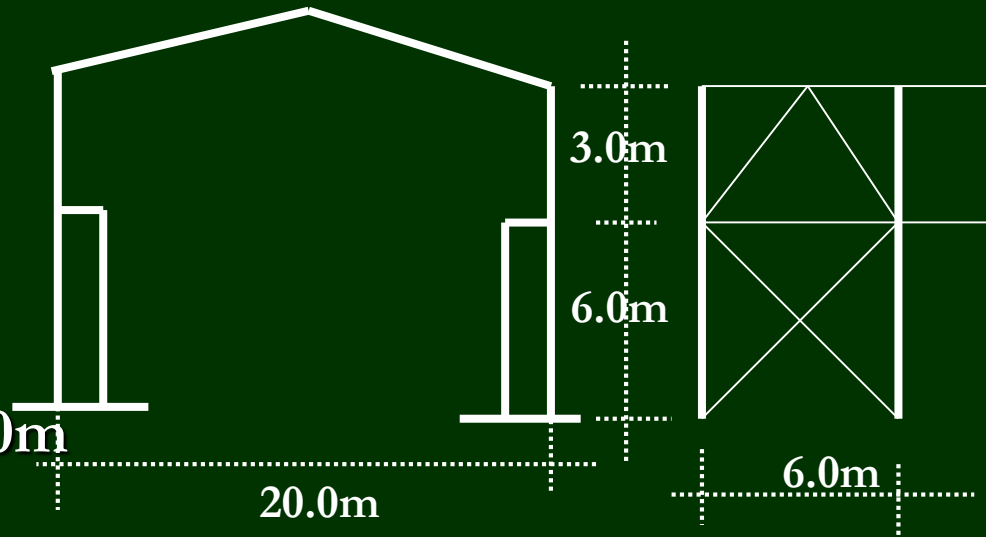
- $ND = 30 \text{ t}$

- $Q = 4.0t$

- $L_{b_{\text{in-plan}}} = 1.5h = 9.0m$

- $L_{b_{\text{out-of plan}}} = 6.0m$

- Side Sway is permitted



## (2) Estimation of the Cross Section:

- $d$  = Spacing between two Section Component

$$= (h/10-15) = (600/10-15) = 60-45\text{cm}$$

- Calculating the max. Compressive Force “C”

$$C = -(M/d + N/2) = -(3000/50 + 30/2) = -75 \text{ t}$$

on one Channel

- $A_{\text{required}} = (C/F_{C \text{ Assumed}}) = (75/1.0) = 75\text{cm}^2$

Choice 2-Channels 320

$$d/h = (50/32) = 1.56 \text{ lies between } 1.5 \text{ to } 2$$

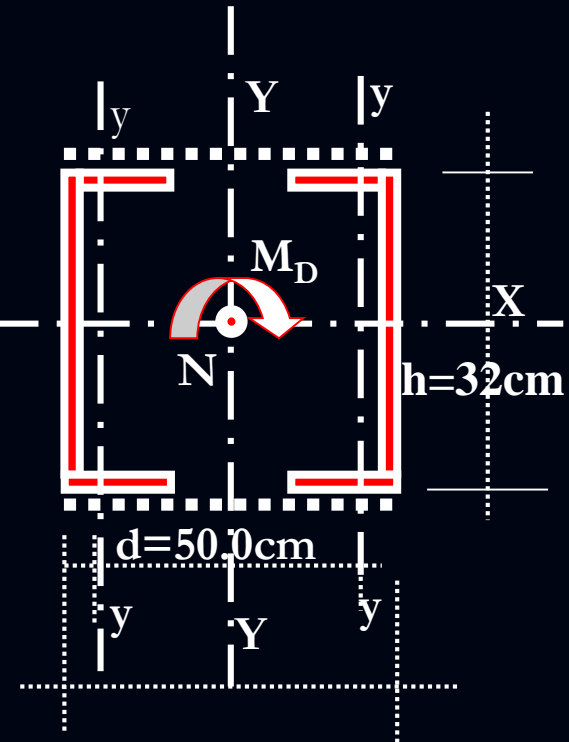
Then Choose 2-channels 320

$$A_{2C} = 2 * 75.8 = 151.6\text{cm}^2$$

$$I_{y-y-2C} = (2(597 + 75.8 * 25^2)) = 95944\text{cm}^4$$

$$\left\{ \begin{array}{l} r_{X-X-2C} = r_{x1C} = 12.1\text{cm} \quad , \quad r_{y-y-2C} = \sqrt{(95944/151.6)} = 25.15\text{cm} \end{array} \right.$$

$$r_z = r_{y-1C} = 2.81$$



### (3) Check for Local Buckling:

Web Element (table 2-1a Code pp. 9):

$$dw = hC - 4t_F = 32 - 4 * 1.75 = 25 \text{ cm}$$

$$(dw/tw)_{act} = (25/1.4) = 17.86$$

$$(dw/tw)_{Code} = 58/\sqrt{2.4} = 37.44,$$

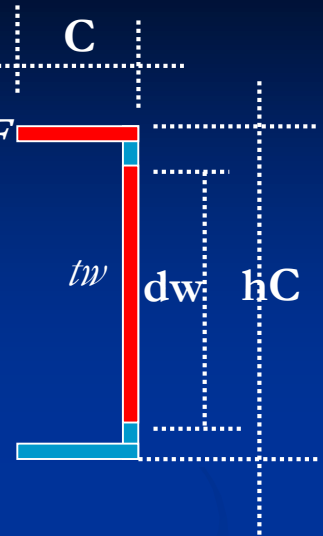
then,  $(dw/tw)_{act} < (dw/tw)_{Code}$  O.K. Compact

Flange Element (table 2-1c Code pp. 11):

$$C = bf \text{ (Code pp. 11 table 2.1c)} = 10 \text{ cm}$$

$$(C/t_f)_{act} = (10/1.75) = 5.7, \quad (C/t_f)_{Code} = (16.9/\sqrt{2.4}) = 10.9$$

$(C/t_f)_{act} < (C/t_f)_{Code}$  O.K. Compact.



#### (4) Check of Stresses (Interaction Equation):

$L_{b-in} = 1.5(6) = 9.0\text{m}$  ,  $L_{b-out} = 6.0\text{m}$  ,  $L_z = 90\text{cm}$  ,

$k = 1.0$  (lacing bars) &  $K = 1.25$  (Batten plate)

$$\lambda_{y-in} = \sqrt{\left(\frac{L_{b-in}}{r_{y-2C}}\right)^2 + \left(k \frac{L_z}{r_z}\right)^2} = 48.01 < 180$$

(Equivalent Slenderness ratio of Battened or Latticed Steel Columns) Code Eqs.9-1 & 9-2 pp.138)

$$\lambda_{x-out} = (L_{b-out} / r_x) = (600 / 12.1) = 49.6$$

Where :

$\lambda_z$  is the Local Slenderness ratio ( $L_z / r_z$ ) should be

Satisfied the following Conditions:

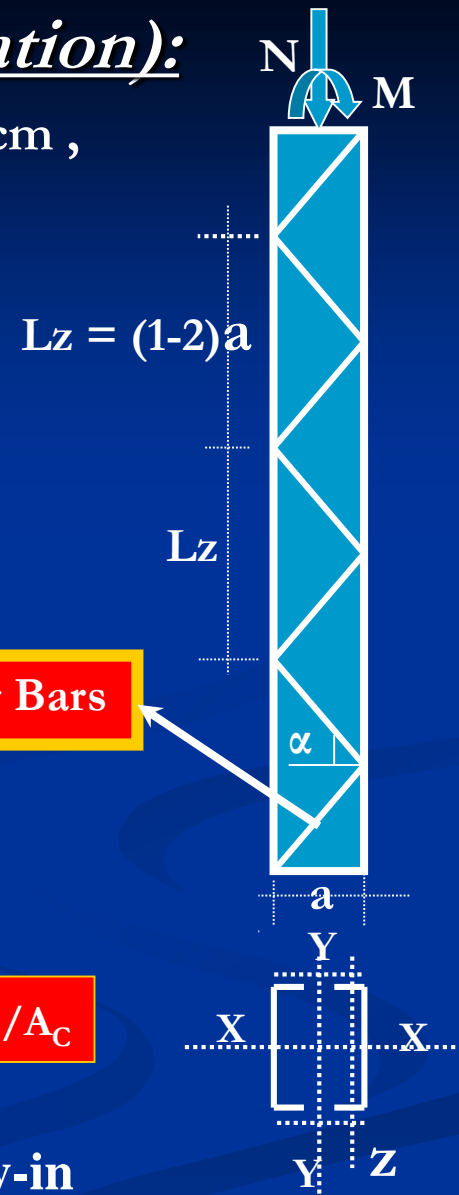
$$\lambda_z = (L_z / r_z) < 60 \text{ and, (Code pp.136)}$$

$$\text{and } < (2/3) \lambda_{y-in} \text{ (Code pp.136)}$$

$$\text{Then, } \lambda_z = (L_z / r_z) = (90 / 2.81) = 32.0 < 60 \text{ and } < (2/3) \lambda_{y-in}$$

Lacing Bars

$$r_z = \sqrt{I_C / A_C}$$



- $F_C = 1.4 - 0.000065(49.6)^2 = 1.24 \text{ t/cm}^2$
- $fca = N/A = (30/151.8) = 0.197$   
 Then,  $Fca/F_C = (0.197/1.24) = 0.159 > 0.15$
- $A2 = (Cmy/(1-(fca/F_{CY})))$  (Code pp.25)
- Where :  $Cmy = 0.85$  (Frame permitted side sway) (Code pp.26)  
 $F_{EY} = 7500/\lambda_y^2 = 7500/(48.01)^2 = 3.254 \text{ t/cm}^2$   
 Then,  $A2 = Cmy/(1-(fca/F_{EY})) = 0.96 < 1.0$  take  
 $= 1.0$
- $fby = (M/I_{y-2C})(d/2 + e_C)$   
 $= (30*100/95944*(50/2 + 2.6)) = 0.86 \text{ t/cm}^2$
- $Fbc = 0.58F_y = 1.4 \text{ t/cm}^2$

*(Interaction Equation):*

$$\frac{fca}{Fc} + \frac{fby}{Fbcy} A_2 \leq 1.0$$

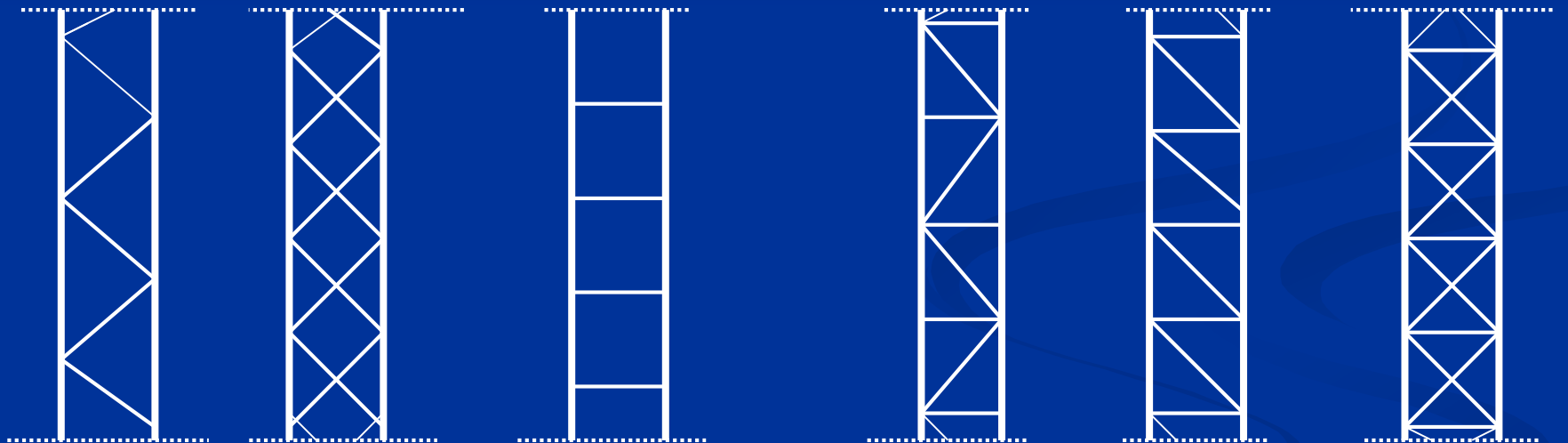
$$\frac{0.179}{1.10} + \frac{0.86}{1.4} * 1.00 = 0.794 < 1.0$$

O.K. Safe and Economic

# Design of Lacing Bars

## Introduction:

### Systems of Laced and Battened Columns



Single

Double

1- Lacing Systems

2- Batten System

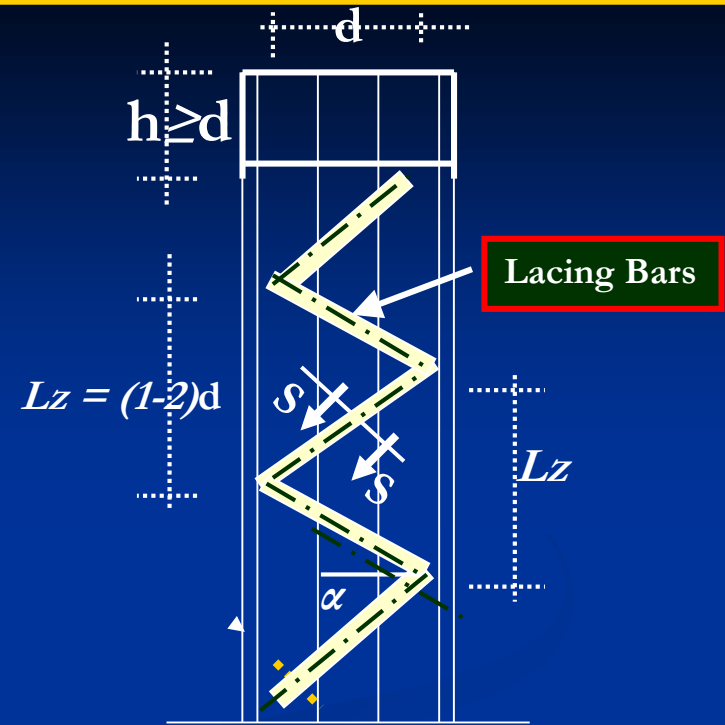
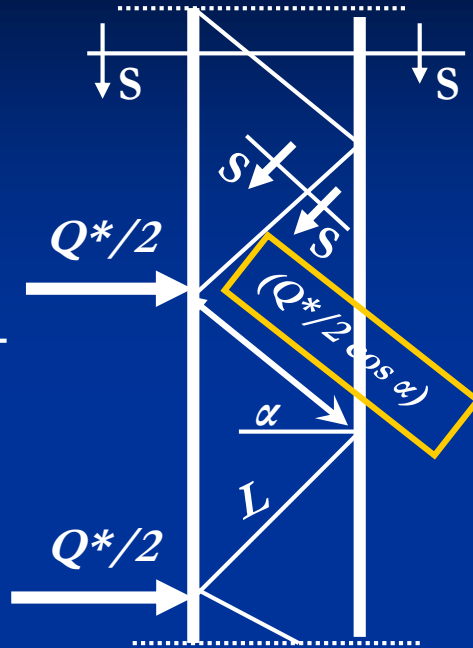
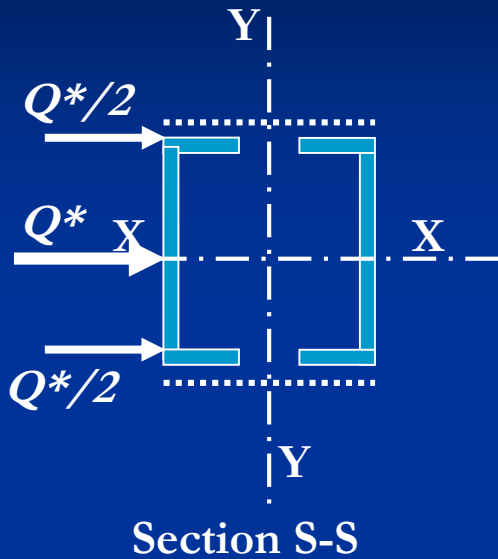
3- Combination of Laced and Battened Systems

4/10/20

Laced and Battened Columns

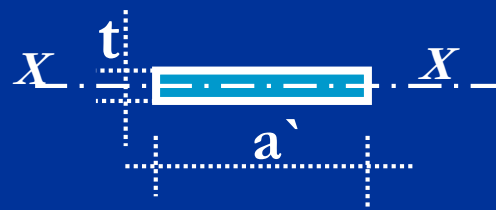


*Batten plates are provided at the ends of the lacing systems.*

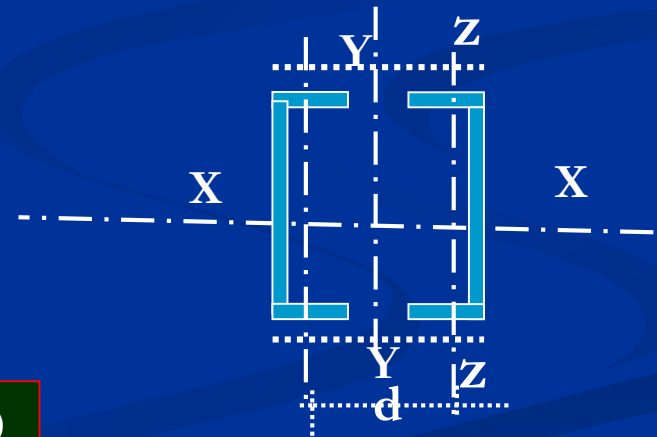


$$a = (L/10)$$

$$t = (L/40)$$



Section at Lacing Bars( Section S-S)



4/11/20

# Notations on Lacing Bars and Batten Plates

- (1) Lacing Bars shall be inclined at an angle of  $\alpha = 50^\circ$  to  $70^\circ$  to the axis of the member where a single interaction System is used and at an angle  $\alpha = 40^\circ$  to  $50^\circ$  where a double interaction system is used.
- (2) Maximum Length between Lacing Bars ( $L_z = kL = [(1 - 2)d]$  in a Single Interaction Lacing and  $L_z = [(0.5-1.0)d]$  for Double Interaction Lacing) where  $d$  is the distance between the Centroids of the main component thickness.
- (3) The ratio  $(L_z/r_z) \leq 140$
- (4) The thickness of the plates  $\leq (1/50)$  of the distance between the inner lines of bolts
- (5) Lacing Bares are designed to resist this Force =  $Q^* = (Q + 0.02 N)$ . where  $Q$  and  $N$  are the shearing and the axial forces of the column. The lacing bars are treated as diagonal members of a truss.

- Example : For the frame carrying crane shown in Figure, the crane column subjected to  $N=20t$  and  $M=20t.m$  and  $Q = 6.0t$ , it is required to : (i) Design the welded lacing bars if the column consists of 2C 320 spaced 50cm. (ii) Design the connection of the lacing bar to the column as Riveted connection.

(1) Data Given:

$$Q^* = Q + 0.02N = 6.4t$$

Force in Lacing Members ( $F_{Lacing}$ ):

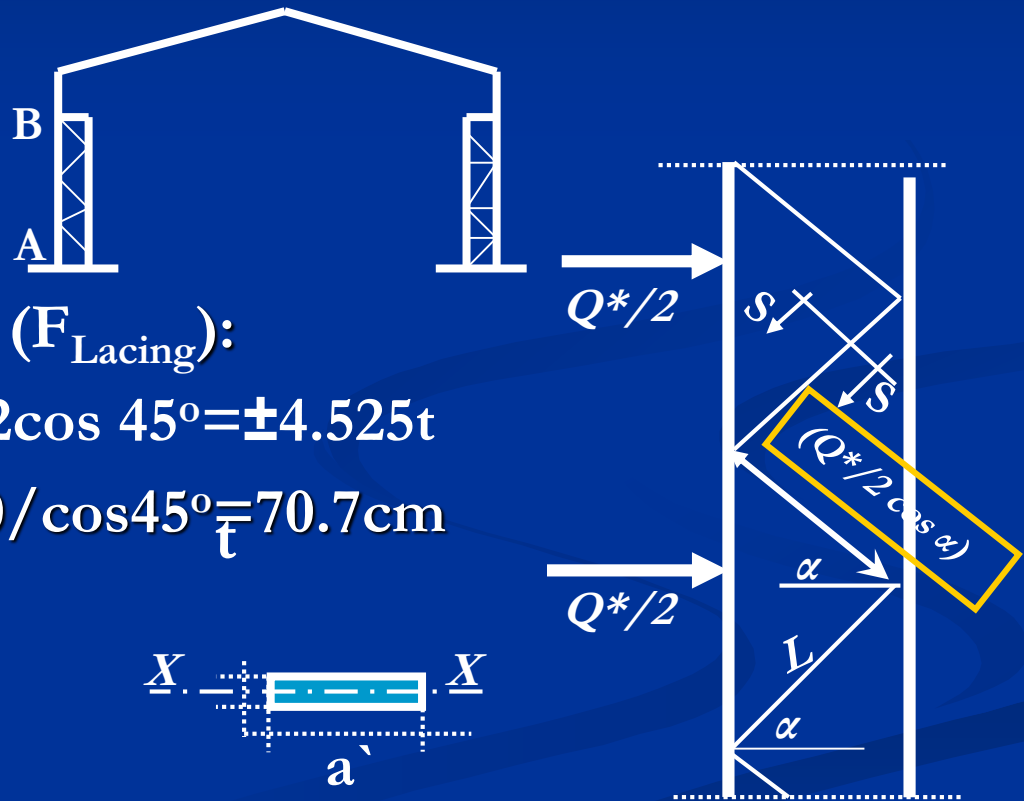
$$F_{Lacing} = Q^*/2 \cos \alpha = 6.4/2 \cos 45^\circ = \pm 4.525t$$

$$\text{Length of Lacing} = L = 50 / \cos 45^\circ = 70.7cm$$

$$\text{Assume } a = L/10 = 7cm$$

$$\text{Assume } t = L/50 = 14mm$$

$$L_{bx} = L = 70cm$$



Section S-S

## (2) Design of the Lacing bar as a Compression Member:

- $r_x = (\sqrt{I_{x-x}/\text{Area}}) = \sqrt{(at^3/12)/a*t} = t/\sqrt{12} = 1.4/\sqrt{12} = 0.404$
- $\lambda_x = L_{bx}/r_x = 70/0.404 = 173.2 > 140$  Unsafe
- Use  $t = 2.0$  cm
- $r_x = (t/\sqrt{12}) = 2.0/\sqrt{12} = 0.577$
- $\lambda_x = L_{bx}/r_x = 70/0.577 = 121.317 > 140$
- $F_C = (7500/(121.317)^2) = 0.51 \text{ t/cm}^2$
- $f_{\text{act}} = F_{\text{Lacing}}/\text{Area} = (4.525/(7*2)) = 0.323 \text{ t/cm}^2 < F_C$  O.K. Safe

## (3) Design of Lacing bar as a Tension Member:

- $f_{\text{act}} = (F_{\text{Lacing}}/\text{Area}) = (4.525/(7*2)) = 0.323 \text{ t/cm}^2 < 1.4 \text{ t/cm}^2$
- $(L/a) = (70/7) = 10 \leq 60$  O.K. Safe

#### (4) Design of the Connection between the batten plate and column as a Welded Connection:

Assume Weld Size =  $s = 8\text{mm}$

- Force = Area of Weld \* Allowable stresses in Weld  
 $5.525 = (L * 2s)(0.2F_u) = (L * 2 * 0.8)(0.2 * 3.6)$   
get  $L = 4.8\text{cm}$
- $L_{\text{weld eff.}} = 2s + L = (2 * 0.8 + 4.8) = 6.5\text{cm}$     min  $L = 5.0\text{cm}$

#### (5) Design of the Connection between the batten plate and column as a Bolted Connection:

Force =  $5.525 \text{ t} \leq R_{\text{Least}}$     Assume Diameter of Bolts  $\Phi_{16}$

- $R_{\text{Least}}$  is the Least of  $R_{\text{s.s.}}$  and  $R_{\text{bearing}}$

# Design of Batten Plate

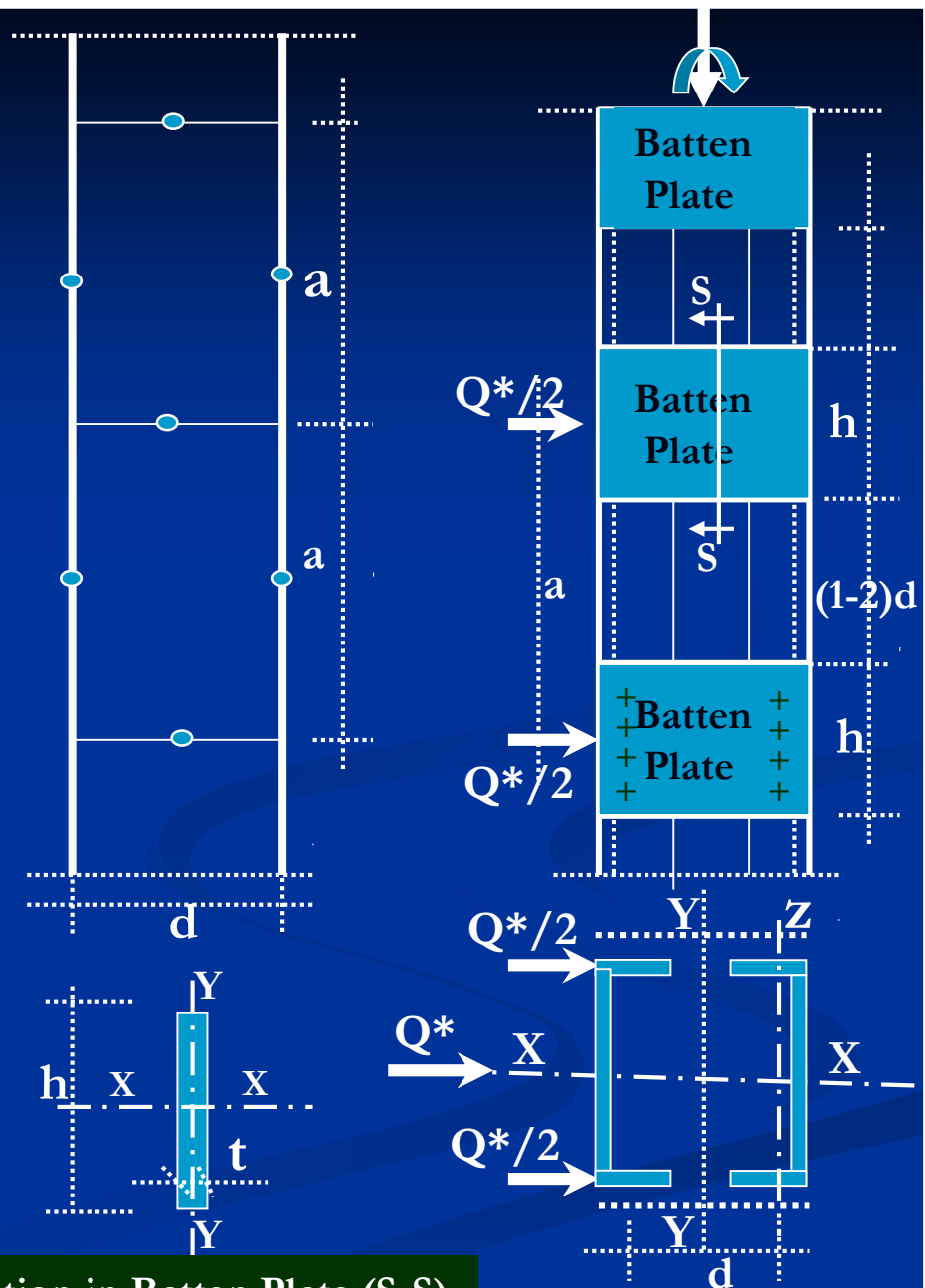
- ❑ *Battens shall be plates or Channels and shall be bolted or welded to the main elements.*
- ❑ *The system may be assumed as a virandeel girder or intermediate hinges may be assumed at mid distance to change the system into a statically determinate system.*

$$h = (0.75 - 1.25)d \approx d$$

4/16/20

$$a = h + (1 - 2)d$$

Section in Batten Plate (S-S)



# Design Steps of Batten Plate :

## (1) Data Given:

$$h = (0.75-1.25)d \approx d$$

$$\text{Thickness} = t = (h/50)$$

$$Q^* = Q + 0.02N$$

$$I_{x-x} = (t \cdot h^3 / 12) \quad \text{weld Batten}$$

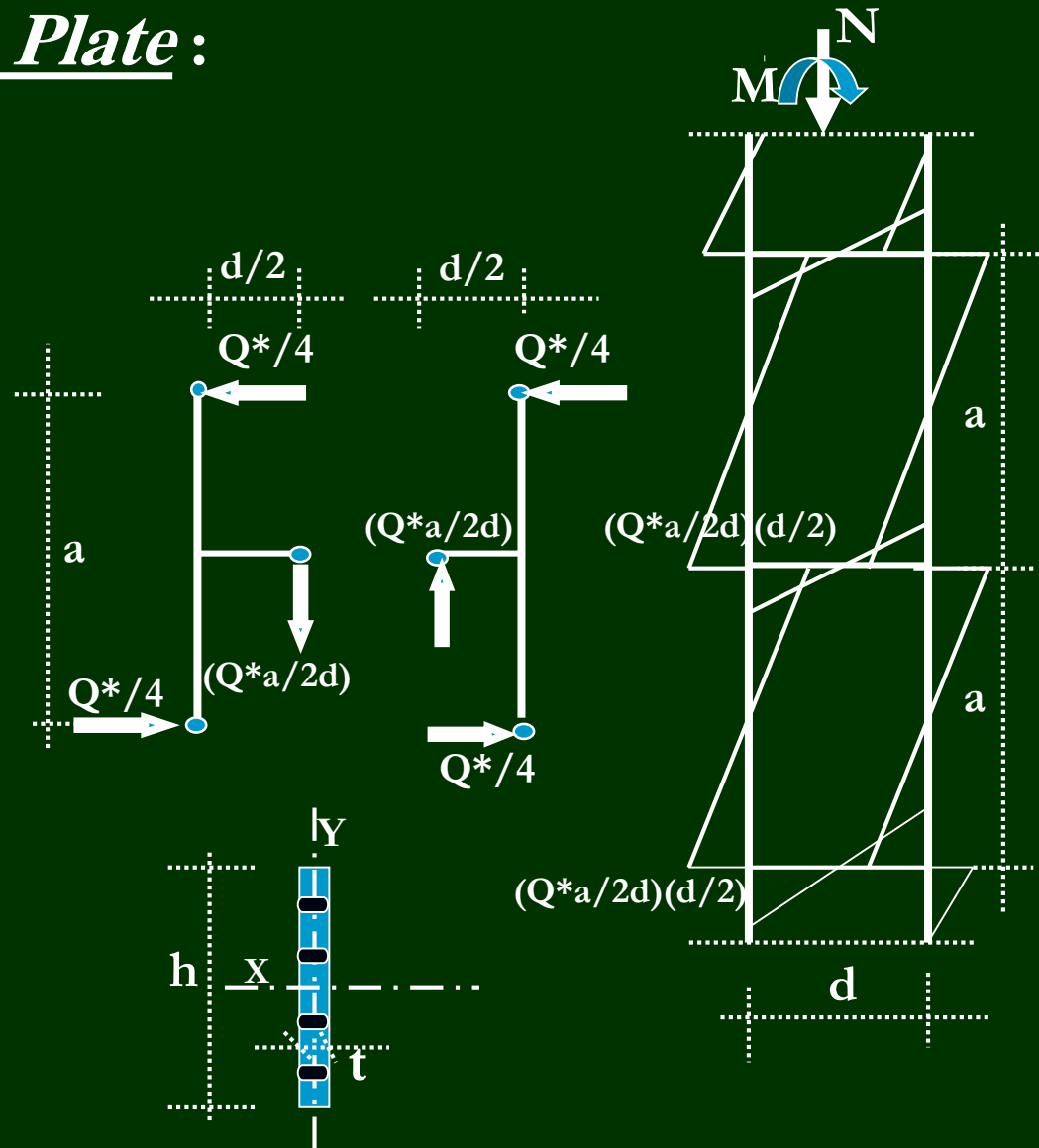
$$I_{x-x} = ((t \cdot h^3 / 12) - I_{\Phi})$$

(Bolted batten)

The acting straining actions  
on the Batten Plate are :

$$\text{S.F.} = (Q^* \cdot d / 2a)$$

$$\begin{aligned} \text{B.M.} &= \text{S.F.} \cdot (d/2) \\ &= (Q \cdot a / 2d) (d/2) \end{aligned}$$



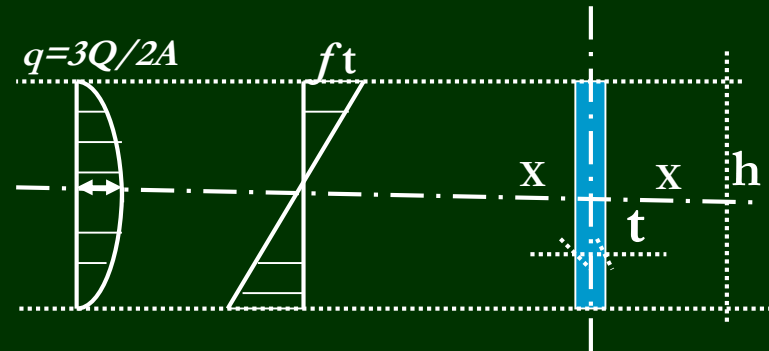
Section in Batten Plate (Bolted Conn.)

## (2) Check of Flexure Stresses:

$$f_b = (M_x / I_x)(h/2) = \dots \leq 0.72 F_y$$

## (3) Check of Shear Stresses:

$$Q_{act} = (1.5Q/h \cdot t) = \dots \leq 0.35 F_y$$



## (4) Design of the Connection between the batten plate and column as a Bolted Connection:

$$Q = Q^* \cdot a / 2d$$

$$M_t = (Q^* \cdot a / 2d) (d/2)$$

The used Bolts put either in one column or in two column (4-rows)

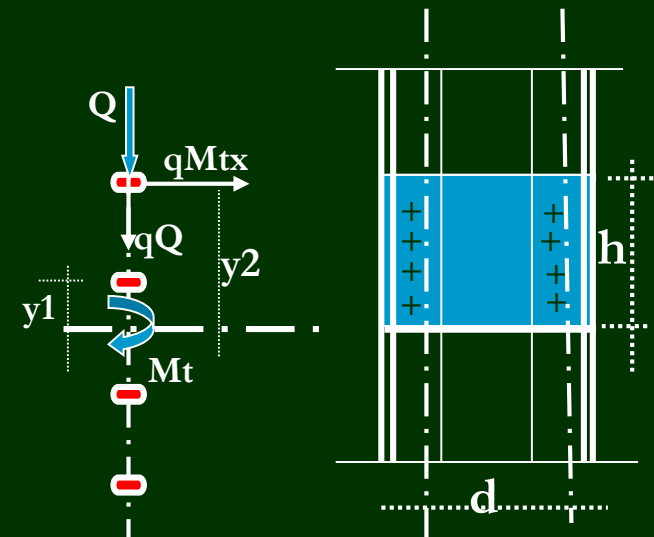
### Case1 : to use one row of 4-bolts :

Check of Stresses:

$$q_Q \downarrow = (Q^* / n) = \dots t$$

$$q_{Mtx} \rightarrow = (M_t \cdot y_2) / 2(y_1^2 + y_2^2) = \dots t$$

$$Q_{total} = \sqrt{(q_Q)^2 + (q_{Mtx})^2} = \dots t$$



Section in Bolts



$$R_{s.s.h.} = \pi \Phi^2 / 4 (0.25 F_{U \text{ bolt}}) = \dots t$$

$$Q_{total} \leq R_{s.s.h} \quad \text{O.K. Safe}$$

*Case2 : to use two rows of 4 – bolts (n=8Φ):*

Check of Stresses:

$$qQ \downarrow = (Q^*/n) = \dots t$$

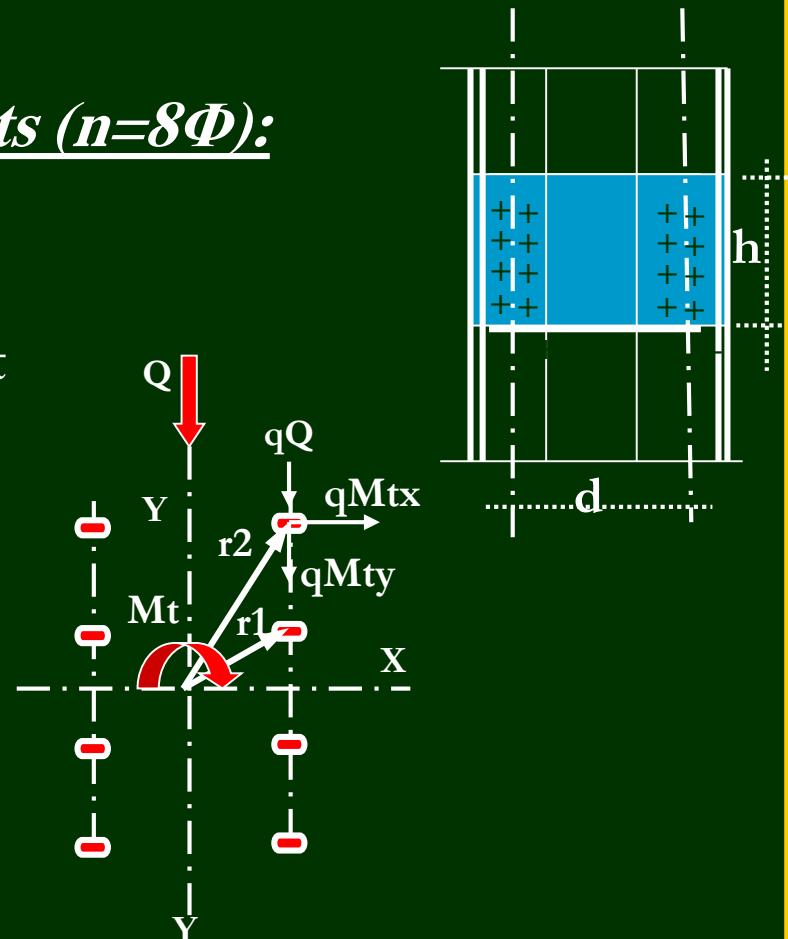
$$qM_{tx} \rightarrow = (M_t \cdot Y) / n(r_1^2 + r_2^2) = \dots t$$

$$qM_{ty} \downarrow = (M_t \cdot X) / n(r_1^2 + r_2^2) = \dots t$$

$$Q_{total} = \sqrt{(qQ + qM_t)^2 + qM_{ty}^2} = \dots t$$

$$R_{s.s.h.} = (\pi \Phi^2 / 4) (0.25 F_{U \text{ bolt}}) = \dots t$$

$$Q_{total} \leq R_{s.s.h} \quad \text{O.K. Safe}$$



Section in Bolts

4/19/20

## (5) Design of the Connection between the batten plate and column as a Welded Connection:

Assume weld size = "S"

Each side is calculated to resist

A shear force =  $Q = (Q^* \cdot a / 2d)$  and  
torsional Moment  $(Q^* \cdot a / 2d) (d/2)$

$$X' = (2 \cdot b \cdot s)(b + s/2) / (2bs + (h + 2s)s)$$

$$I_{x-x} = \dots\dots\dots$$

$$I_{y-y} = \dots\dots\dots$$

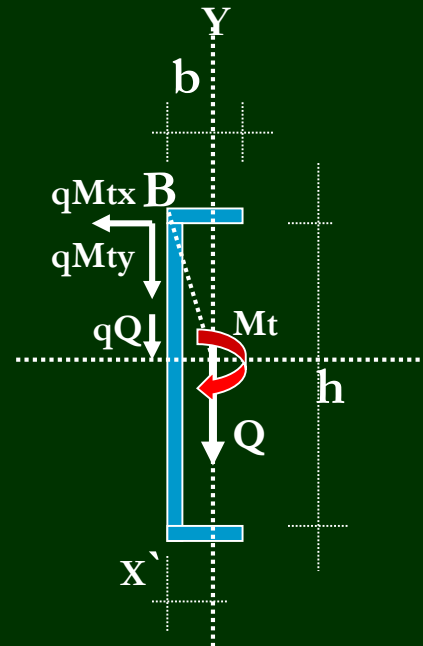
$$I_p = I_{x-x} + I_{y-y}$$

$$qQ \downarrow B = Q / (h + 2s)s =$$

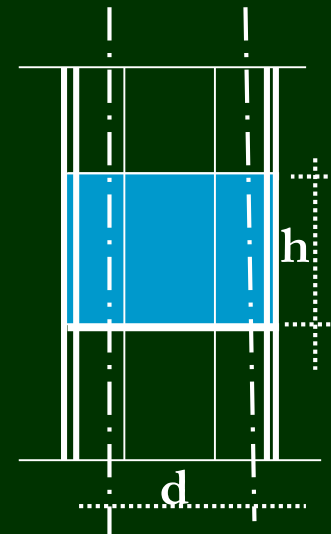
$$qM_{ty} \downarrow B = M_t \cdot X' / I_p =$$

$$qM_{tx} \rightarrow B = M_t \cdot (h/2) / I_p =$$

$$qB \text{ total} = \sqrt{(qQB \downarrow + qM_{ty} \downarrow)^2 + qM_{tx} B^2 \rightarrow} = \dots\dots\dots \leq 0.2F_u$$



Section of Weld






# Lec. 5


## Design of Steel Beams

5/1/16

# Common Beam Cross Sections




S.I.P or I.P.E







Channel



B.F.I.



Built up sections



Built up sections

## Performance and Behavior of Steel Beams:

The behavior of a beam under

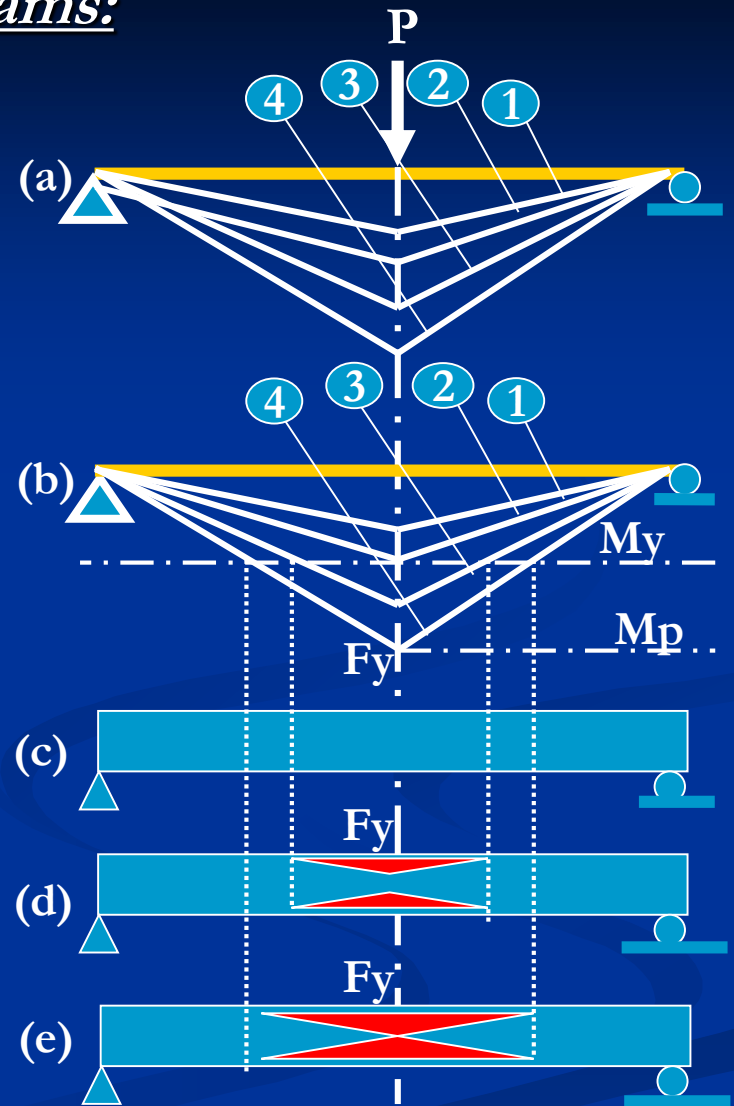
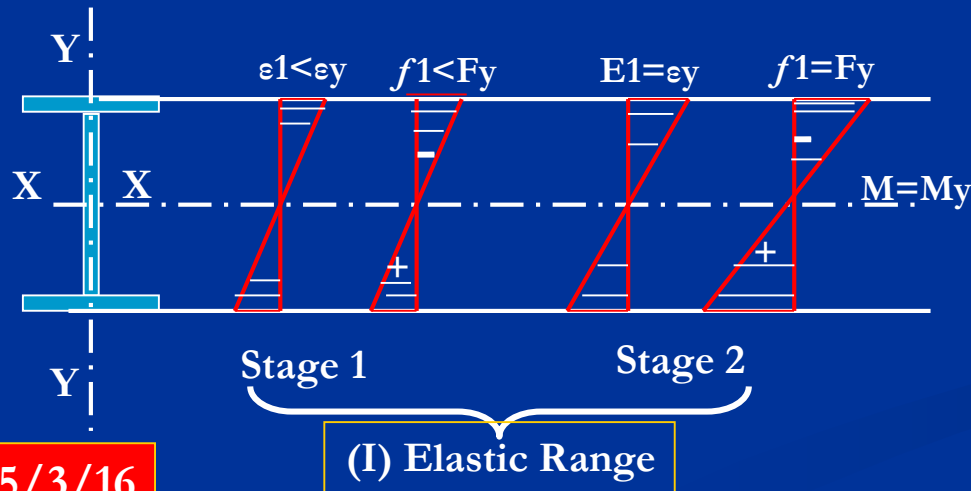
Concentrated Load at mid-span illustrated by the following example.

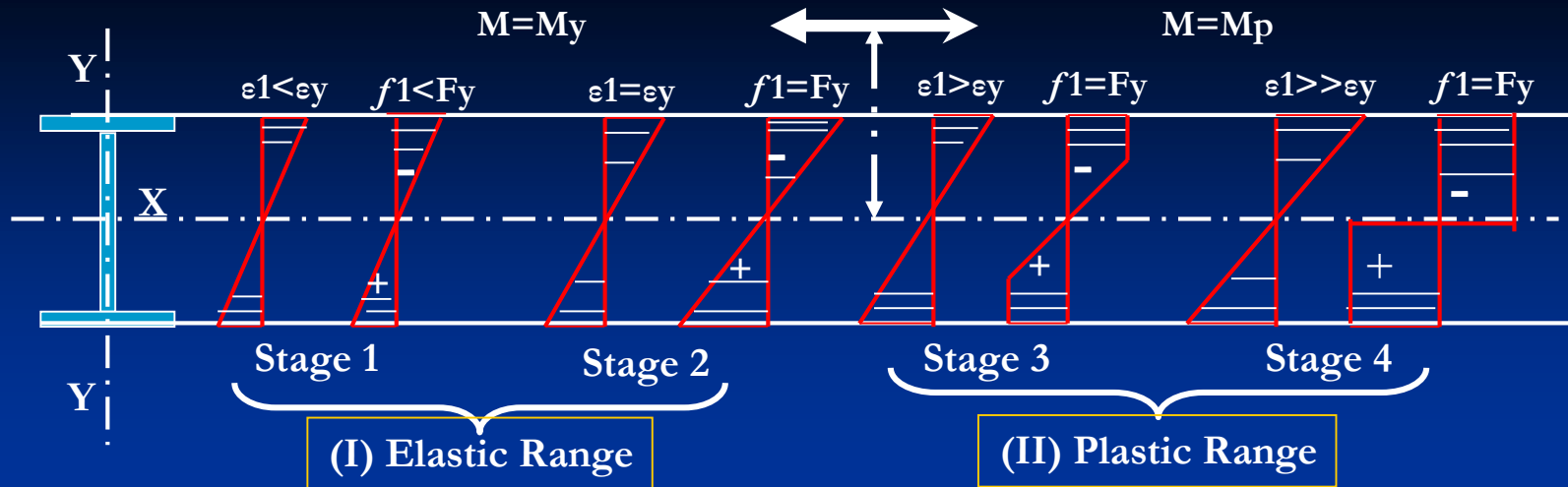
The max. moment, outer - fiber strain and stresses occur at mid-span

Successive Stages in bending are shown in This figure .

(I) Elastic Range [Stage (1) and Stage (2)]

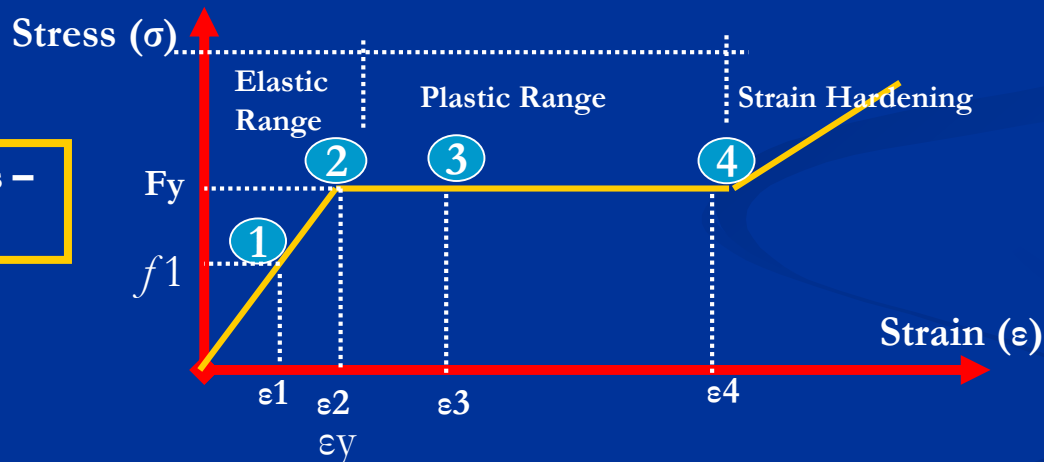
(II) Plastic Range [Stage (3) and Stage (4)]





### Variation in Strain and Stress Along The Depth of the Beam

Idealized Stress - Strain Diagram



Strength in Elastic Range =  $M_y = F_y \cdot S_x$

,  $Z_x$  = elastic Section Modulus


Strength in Plastic Range =  $M_p = F_y \cdot S_p$

,  $Z_p$  = Plastic Section Modulus, and,


$\zeta = (M_p/M_y) = (Z_x/Z_p) = 1.1 - 1.18$  For I- Sections and  $= 1.5$  for Rectangular Section

# *Fully Laterally Supported Beams (Floor or Roof Beams)*

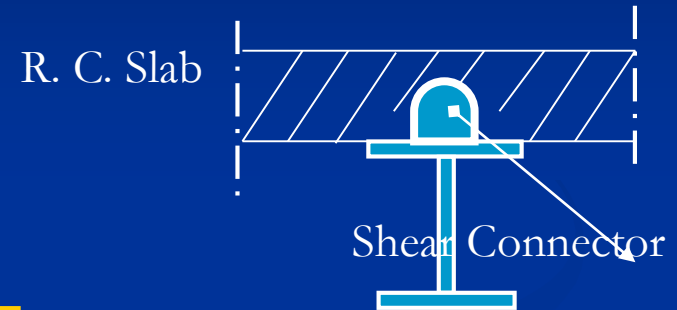
Flexural Members have the Compression Flange Restrained to Satisfy Lateral Support . This is True in Beams Supporting floors and Roofs, where the beam is in direct contact or has the top Flange embedded in the floor or Roof Slabs as the Following:



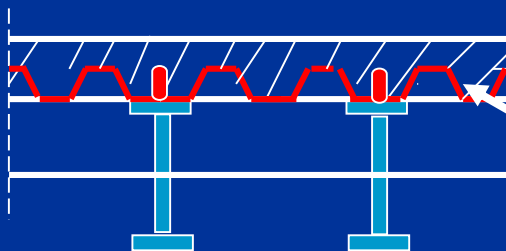
Steel Section imbedded  
in Concrete Section



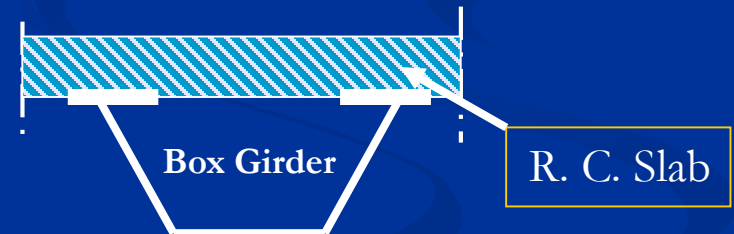
Top Flange embedded  
in Concrete Slab



Top Flange Connected with R.  
C. Slab by Shear Connectors



Composite Slab



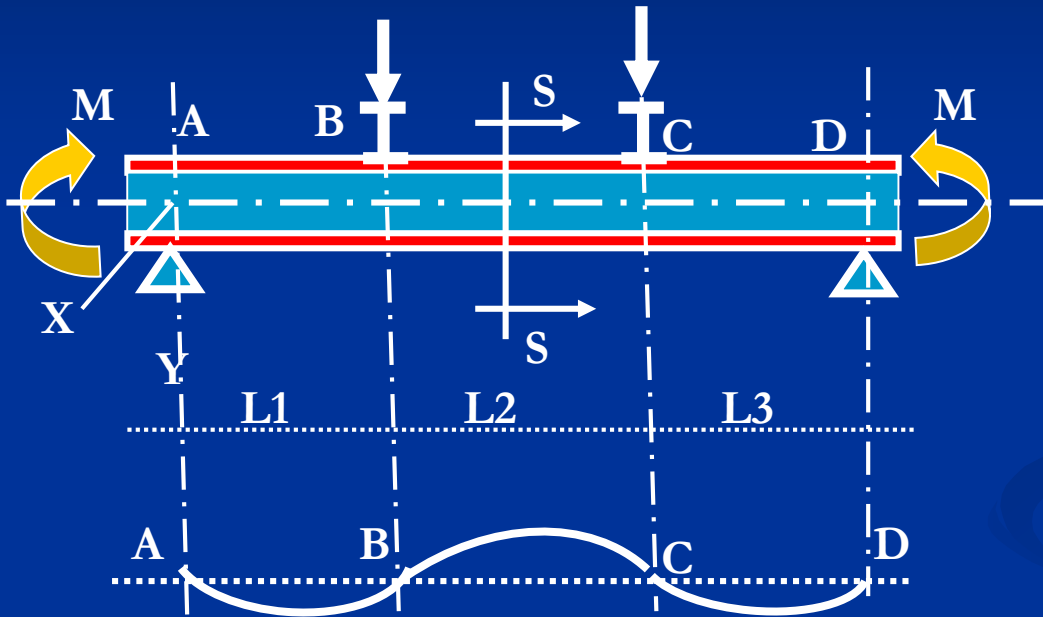
R. C. Slab

Beam is Laterally Supported by Composite Slab

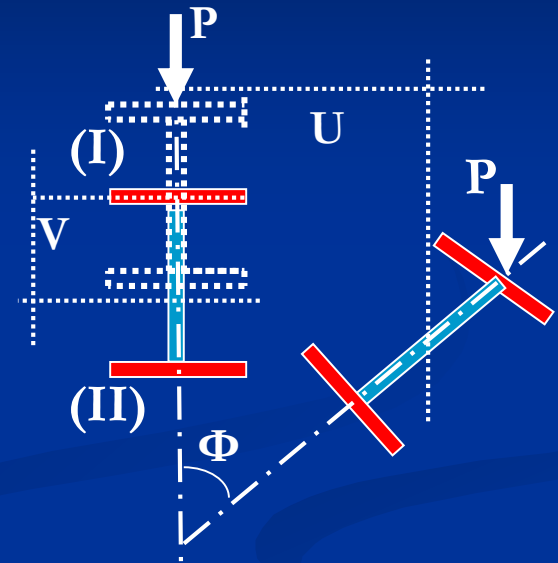


## Laterally Unsupported Beams

**Torsion will be combined with Bending when the Line of action of Load is not passing through the Shear Center of the cross section**



**Main Beam “A-D” provided by Lateral  
Supported by Lateral Beams at B & C  
“Buckling of Beams Provided with  
Lateral Secondary Beams”**



## Section S-S

LU act = Greater (L1, L2 & L3)

# Design Procedure of Steel Beams:

(1) Data given:  $\{M_D, Q \& N_D$  at Critical Section Along the Beam, B.M.D, Unsupported Length “ $L_{Uact}$ ” in Regions 1 & 2 .

(2) Estimation of the cross section.

$$Z_x = (M_D / F_{all.b}) = \dots \text{cm}^2 \text{ Choice S.I.B No....}$$

(3) Check for Local Buckling (Code pp. 9 to 12 )

- $(C/tf)_{act} = \dots \leq (C/tf)_{Code}$
- $(dw/tw)_{act} = \dots \leq (dw/tw)_{Code}$

(4) Check of the Safety Against Lateral Torsional Buckling:

**How to Determine the Allowable Bending Stresses ( $F_{bx}$ )**

Determine  $L_{u\text{ act}}$  and,

$$L_{u1\text{ max}} = (20bf/\sqrt{F_y}) \text{ and,}$$

$$L_{u2\text{ max}} = (1380Af.Cb/d.F_y) \text{ (Code pp.16, Eq.2.18)}$$

- If  $L_{u\text{ act}} < L_{u1\text{ max}}$  and  $L_{u2\text{ max}}$ , the section is compact and safe against Lateral Torsional Buckling > In this case Allowable Bending Stresses

$$F_{bx} = 0.68F_y$$

- If  $L_{u\text{ act}} > L_{u1\text{ max}}$  or  $L_{u2\text{ max}}$ , the Section is Non-Compact. In this Case Allowable Bending Stresses  $= 0.58F_y$  and must be Check for Lateral Torsional Buckling as Follows.

☞ Calculate  $\longrightarrow FL_{tb1} = (800.Af.Cb/d.L_{u\text{ act}})$



If  $FL_{tb1} \geq 0.58F_y$ , then the section is safe against Lateral Torsional Buckling and stop

$$F_{bx} = FL_{tb} = 0.58F_y$$



If  $FL_{tb1} < 0.58F_y$ , then Find the  $F_{Ltb2}$  as follows :

When  $Lu_{act} < 84\sqrt{C_b/F_y}$  (Code pp.18)

$$\Rightarrow FL_{tb2} = 0.58F_y$$

When  $84\sqrt{C_b/F_y} \leq Lu_{act}/r_T \leq 188\sqrt{C_b/F_y}$

$$\Rightarrow F_{Ltb2} = (0.64 - (Lu_{act}/r_T)^2 F_y / 1.176 \cdot 10^5 C_b) F_y \leq 0.58 F_y$$

When  $Lu_{act}/r_T > 188\sqrt{C_b/F_y}$

$$\Rightarrow F_{Ltb2} = 12000(Lu/r_T) C_b \leq 0.58F_y \quad (\text{code pp.18})$$

Then,

$$F_{Ltb} = \sqrt{F_{Ltb1}^2 + F_{Ltb2}^2} \leq 0.58F_y \quad (\text{code pp.19})$$



$$F_{bx} = F_{Ltb}$$

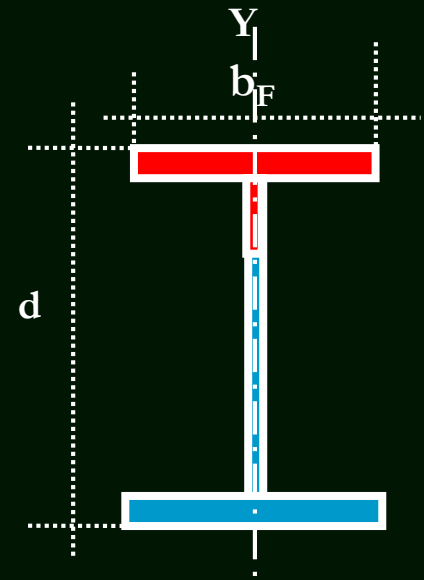
Where :  $r_T$  = Radius of Gyration about minor axis of section concerning the compression flange plus sixth of the compression area of web

$$r_T = \sqrt{I_{y-y}/A_f} =$$

$$I_{y-y} = t_f \cdot (b_f)^3 / 12 + (h_w / 6) (t_w)^3 / 12$$

### Summary of Allowable Bending Stresses:

Section	$F_{bx}$	$F_{by}$
Compact - Supported	$0.64F_y$	$0.72F_y$
Compact - Unsupported	$F_{Ltb}$	$0.72F_y$
Non-Compact - Supported	$0.58F_y$	$0.58F_y$
Non-Compact - Unsupported	$F_{Ltb}$	$0.58F_y$



## (5) Check for Deflection :

The Calculated Deflection due to WL.L only

$$\Delta = \left( \frac{PL^3}{48EI} \right) \text{Concentrated Load Simple Span}$$

$$\Delta = \left( \frac{5WL^4}{384EI} \right) \text{Uniform Distributed Loads Simple Span}$$

$$\Delta = \left( \frac{5L^2}{48EI} \right) \left( M_s - 0.1 \left( \frac{M1}{M2} \right) \right) \text{Uniform Distributed Loads}$$

*Continous Span*

Where :  $M_s$  is the Absolute value of the mid-span moment  
and  $M1$  and  $M2$  unequal end moments

$\Delta_{act} = \Delta = \text{Mid-span Deflection}$

$\Delta_{Code} = \text{See Code (pp.132 table 9-1)}$

## (6) Check of Stresses :

Bending Stresses =  $f_{bc} = M_D * 100 / Z_x = \dots t/cm^2$

Shear Stresses =  $q_{act} = Q / A_w = \dots q_{all}$ . Shear =  $0.35 F_y$

Equivalent Stresses =  $\sqrt{f_{bc}^2 + 3q_{act}^2} = \dots t/cm^2 \leq 1.1 * F_{cb}$

Where:

$F_{bc} = (0.64 F_y \text{ in Compact Sec. or } 0.58 F_y \text{ in Non-compact Sec.})$

Example: Design the girder B-C shown in the following Frame. The design values of the straining action are ( $M_D = 20.0\text{t.m}$ ,  $Q = 4\text{t}$  and  $N = -5\text{t}$ ,  $M_1 = M_2$ , Spacing between Purlins =  $2.1\text{ m}$ ,  $W_{L.L} = 0.3\text{t/m}$ ).

(1) Data Given :

$M_D = 20.0\text{t.m}$ ,  $Q = 4\text{t}$  and  $N = -5\text{t}$

(2) Estimate of the cross Section

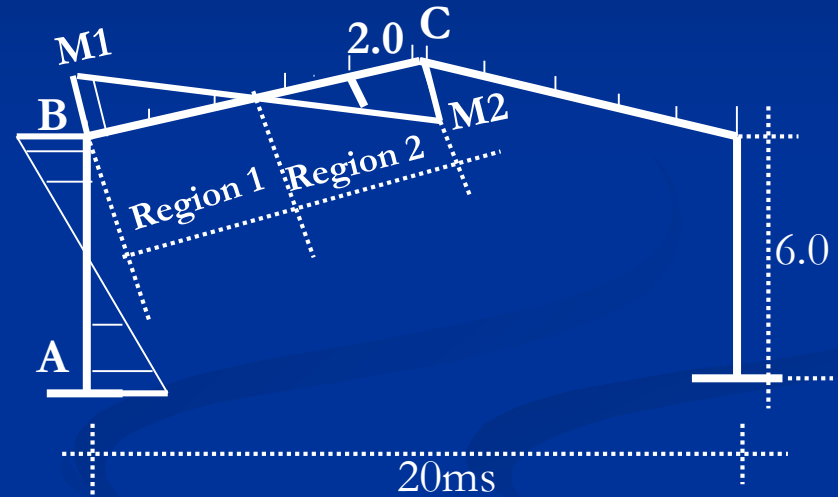
$$Z_x = (M_D / f_{\text{Assume}}) = 1667.0\text{cm}^3$$

From table Choice B.F.I No.300

$tw = 1.1\text{cm}$ ,  $tf = 1.9\text{cm}$ ,  $ix = 13\text{cm}$

$iy = 7.57$ ,  $I_x = 30820\text{cm}^4$ ,  $I_y = 9240\text{cm}^4$

$A = 149\text{cm}^2$ ,  $I_x = 25170\text{cm}^4$ ,  $I_y = 8560\text{cm}^4$ ,  $Z_x = 1680\text{cm}^3$



(3) Check for Local Buckling :

Web Element:



$$D_w = (h - 4t_f) = 30 - 4 \times 1.9 = 22.4 \text{ cm}$$

$$(d_w/t_w)_{\text{act}} = (22.4/1.1) = 20.36 ,$$

$$(d_w/t_w)_{\text{Code}} = (127/\sqrt{F_y}) = 82 \text{ (Table 2-1a Code p.9)}$$

$$(d_w/t_w)_{\text{act}} \leq (d_w/t_w)_{\text{Code}} \quad \text{Compact}$$

Flange :

$$C = 0.5(b_f - t_w - 2t_f) = 12.55 \text{ cm}$$

$$(C/t_f)_{\text{act}} = (12.55/1.9) = 6.6 , \quad (C/t_f)_{\text{Code}} = (16.9/\sqrt{F_y}) = 10.9 \text{ (table 2-1c)}$$

$$(C/t_f)_{\text{act}} < (C/t_f)_{\text{Code}} \quad \text{Compact , The section is Compact.}$$

#### (4) Check for Lateral Torsional Buckling:

Region 1 :

$$L_{U \text{ act}} = (L_G/2) = 10.1/2 = 505.0 \text{ cm}$$

$$L_{U1 \text{ max}} = 20b_f/\sqrt{F_y} = 387.3 \text{ cm} , \alpha = 0.0$$

$$C_b = 1.75 + 1.05\alpha + 0.03\alpha^2 = 1.75$$

$$L_{U2 \text{ max}} = 1380.A_f.C_b/(h.F_y) = 1911.87 \text{ cm}$$

➤  $L_{U \text{ act}} > L_{U1 \text{ max}}$  and  $< L_{U2 \text{ max}}$  , then

The Section is Unsupported

The section will be treated as a Non-Compact and must be checked for Lateral Torsional Buckling as the Following:

$$FL_{tb1} = (800.Af.Cb./L_u.d) = (800*30*1.9*1.75)/505*30) = 5.27t/cm^2$$

$$FL_{tb1} > 0.58F_y = 1.4t/cm^2, \text{ then Stop}$$

$$FL_{tb} = FL_{tb1}, \quad F_{bx} = FL_{tb} = 1.4 t/cm^2$$

The Section is Safe against Lateral Torsional Buckling.

## Region 2 :

$$L_{Uact} = \text{Spacing between purlins} = 210 \text{ cm}$$

$$L_{U1 \text{ max}} = 20bf/\sqrt{F_y} = 387.3 \text{ cm}$$

$$\alpha = (0.6M_2/M_1) = 0.6$$

$$C_b = 1.75 + 1.05\alpha + 0.03\alpha^2 = 2.4 > 2.3 \quad \text{take } C_b = 2.3$$

$$L_{U2 \text{ max}} = 1380.Af.Cb/(h.F_y) = 2512.75 \text{ cm}$$

➤  $L_{Uact} < L_{U1max}$  and  $L_{U2max}$ , then

The section is Compact and,

The section is supported safe against Lateral Torsional Buckling. In this Case Allowable Bending Stresses

$$F_b = 0.68F_y$$

### (5) Check for Deflection:

$$\Delta_{Act} = \left( \frac{5W_{L.L.}L^4}{384EI} \right) \text{Uniform Distributed Loads Simple Span}$$

$$\Delta_{Act} = \left( \frac{5 * 0.3 * (1000)^4}{384(2100)(30820)100} \right) = 1.2 \text{ cm}$$

$$\Delta_{Code} = \left( \frac{Span}{200} \right) = \frac{1000}{200} = 5 \text{ cm}$$

$$\Delta_{Act} < \Delta_{Code} \text{ O.K. Safe}$$

### (6) Check of Stresses

$$\text{Bending Stresses} = f_{bc} = M_D * 100 / Z_x = 2000 / 1680 = 1.19 \text{ t/cm}^2$$

$$\text{Shear Stresses} = q_{act} = Q / A_w = (4.0 / 26.2 * 1.1) = 0.139 < 0.35 F_y = 0.84 \text{ t/cm}^2$$

$$\text{Equivalent Stresses} = \sqrt{f_{bc}^2 + 3q_{act}^2} = \sqrt{1.4741} = 1.21 \text{ t/cm}^2 \leq 1.1 * F_{bx}$$

End of Lec 5

بِسْمِ اللَّهِ الرَّحْمَنِ الرَّحِيمِ

Lec.600

# Analysis and Design of Steel Connections



# ***Different Types of Steel Connections:***

## ***(1) Concentric Shear Connections***

- (i) Truss member Connections**
- (ii) Splices of Truss Members**
- (iii) Splices of Column Flanges**
- (iv) Continuity of Beams**
- (v) Splices of Girder Flanges**

## ***(2) Eccentric – Shear Connections***

- (i) Crane Bracket Connections**
- (ii) Flexible Beam to Column Connections**
- (III) Flexible Secondary-to-Beam Connections**
- (iv) Splices of Column` Web**
- (v) Splices of Beam`s Web**

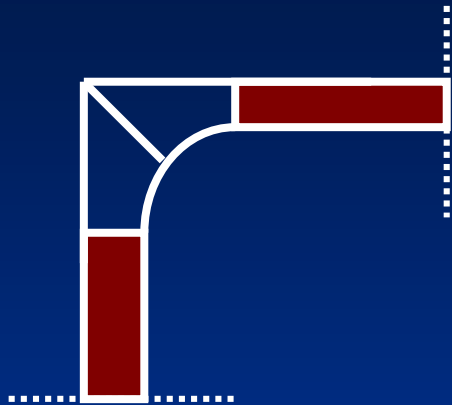
### ***(3) Pure Tension Connections***

- (i) Hanger Connections**
- (ii) Truss-to-Column Connections**


### ***(4) Moment Connections***

- (i) Beam to Column T Connections**
- (ii) Bracket Connections**
- (iii) Beam Column Rigid Connections**
- (iv) Seat Angle Connections**
- (v) Column Truss Connections**


# Types of Corner Connections:



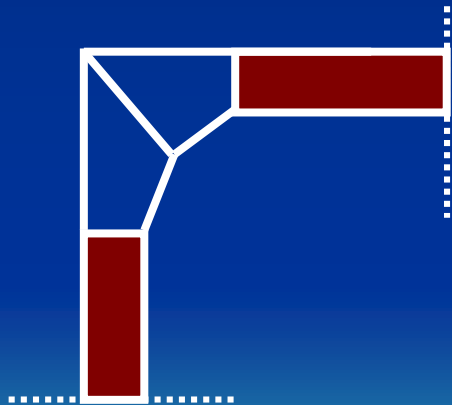
**(i) Curved Corner**



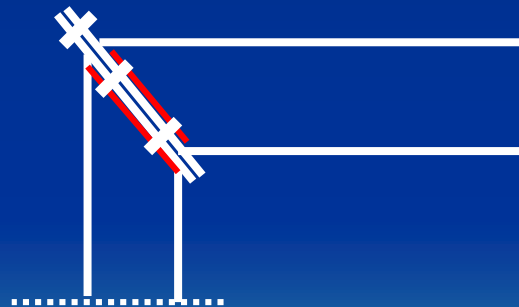
**(ii) Square Corner**



**(iii) Corner with Haunch**



**(iv) Corner with tapered Haunch**



**(v) Corner with Diagonal End Plate**

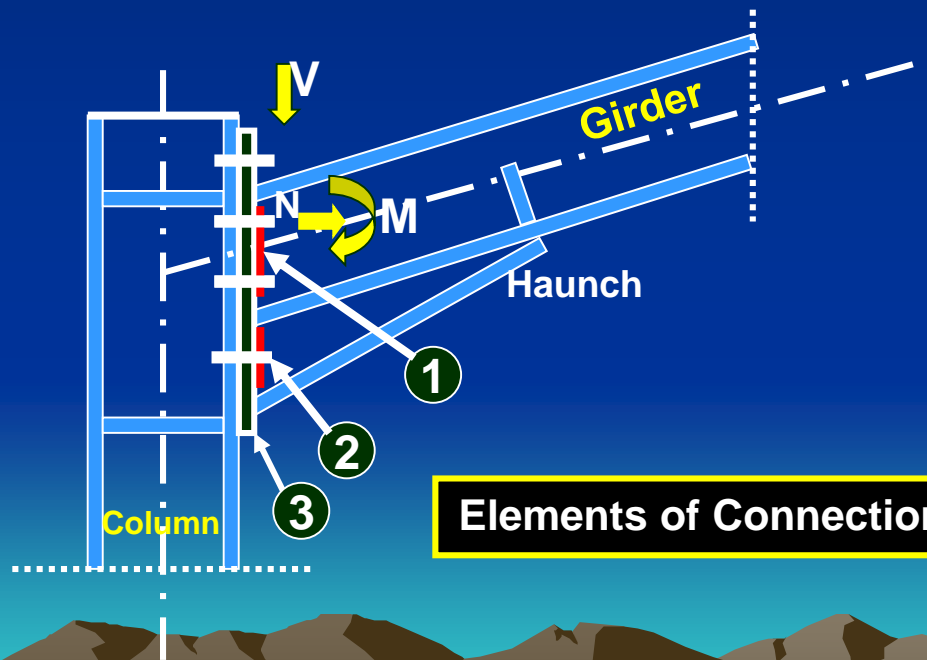




# Design of Pitched Roof Frame Connections Rigid Beam – to - Column Connections.

## Corner Connections (Rigid Connections):

Rigid Connections are those transmitting the B.M., S.F. and N.F from one Structure Element to the Other.



Elements of Connection

1

Weld

2

Bolts

3

End Plate

# Design Steps of Corner Connections:

**(1) Data Given:** B.M., S.F., N.F., Bolts, Column and Girder Cross

Sections,

## **(2) Design of Weld:**

(i) Check For weld thickness

(Use Haunch or not)

$$N' = N \cos \alpha - Q \sin \alpha$$

$$Q' = N \sin \alpha + Q \cos \alpha$$

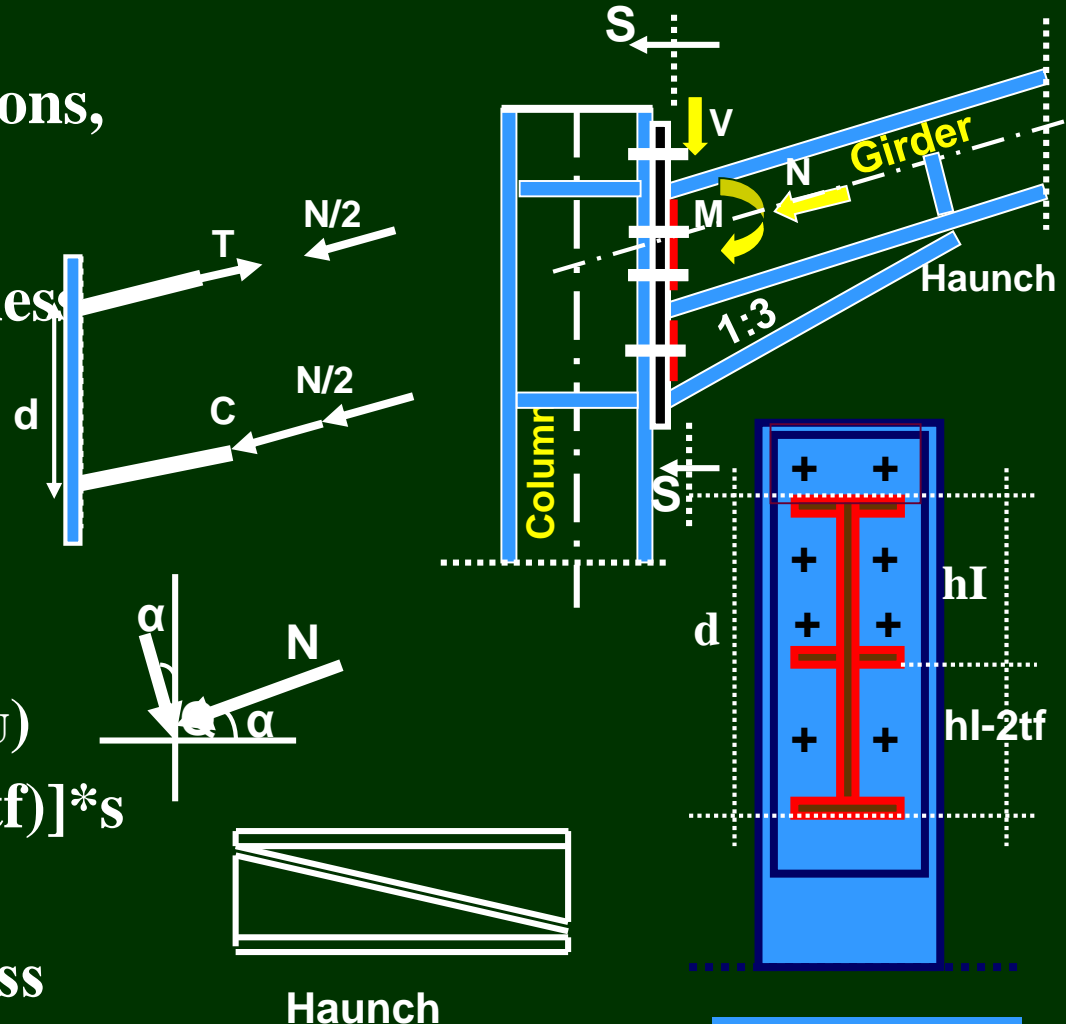
$$T = C = (M / d)$$

$$A = (T - N'/2) / (0.2F_U)$$

$$\text{Area} = [(bf + (bf - tw - 2tf)] * s$$

get “s”

If “s” greater than thickness of the flange then, use Haunch



Section S-S

## (ii) Flange Weld:

$$T = C = (M/d) \quad d = h_I + (h_I - 2t_f)$$

$$\text{Area} = (T - (N'/2))/0.2F_U = (b_f \cdot s_f + (b_f - t_w - 2t_f)s_f)$$

$$\text{get } s_f \quad s_f < t_f$$

## (iii) Web Weld :

$$\text{Area} = (Q'/0.2F_u)$$

$$\text{Area} = [(d - 4t_f)s_w] \cdot 2$$

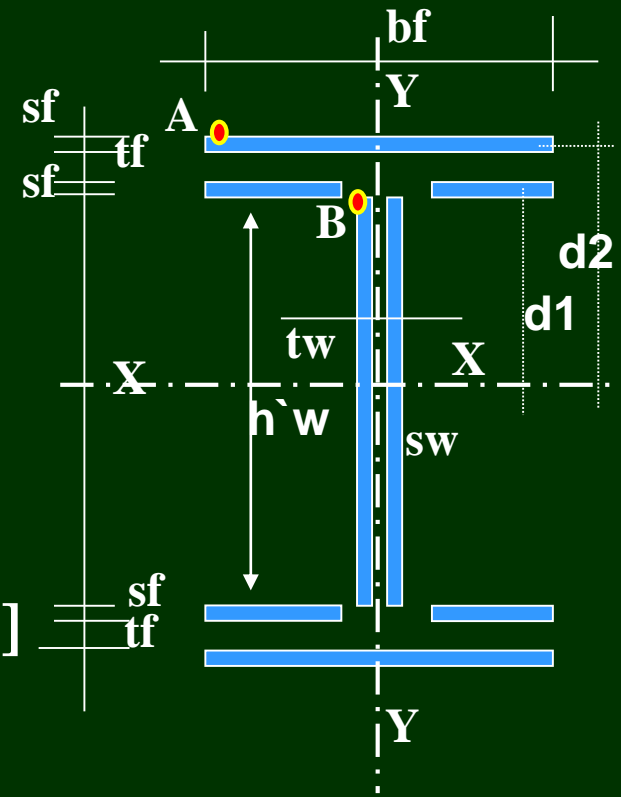
$$s_w = \dots \text{ Not less than } 4.0\text{mm}$$

## (iv) Check of Stresses:

$$I_x = 2(s_w \cdot h_w^3)/12 + 4[b_f(s_f)^3/12 + (b_f \cdot s_f) \cdot d_1^2] + 2[b_f \cdot s_f^3/12 + (b_f \cdot s_f)(d_2)^2]$$

$$F_A = (M_x/I_x) \cdot y_A + (N'/A) = \dots < 0.2F_U$$

$$F_B = (M_x/I_x) \cdot y_B + (N'/A) = \dots < 0.2F_U$$



$$q_{yB} = (Q/A_{\text{weld}}) = \dots t/cm^2 < 0.2F_U$$

$$q_{Eq} = \sqrt{Fb^2 + 3qv_A^2} = \dots < 0.2F_U * 1.1$$

### (3) Design of High Strength Bolts:

#### (i) Approximate Method:

$$T = (M/d \cos \alpha)$$

Assume to use 2 rows of 2-bolts each  
round the tension flange ( $n\Phi = 4$ )

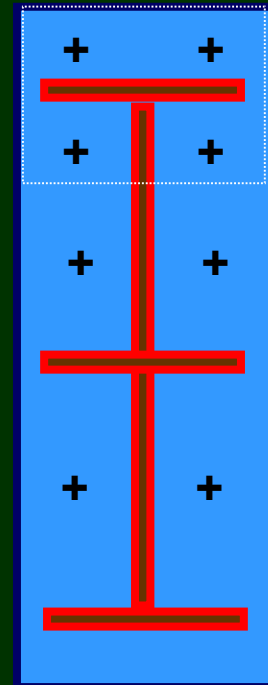
$$\text{Tension force / Bolt} = (T / n\Phi) = \dots t$$

Try M(20) (10.9)

From table (6-3) (Code pp106)

$$\text{Get, Tall} = 15.43 * 0.8 = 12.4$$

$$, P_s = 4.93t$$



## (ii) Exact Analysis:

$$I_x = bf (d)^3/12 = \dots \text{cm}^4$$

$$f_{t1} = (M * y_1 / I_x) = \dots \text{t/cm}^2$$

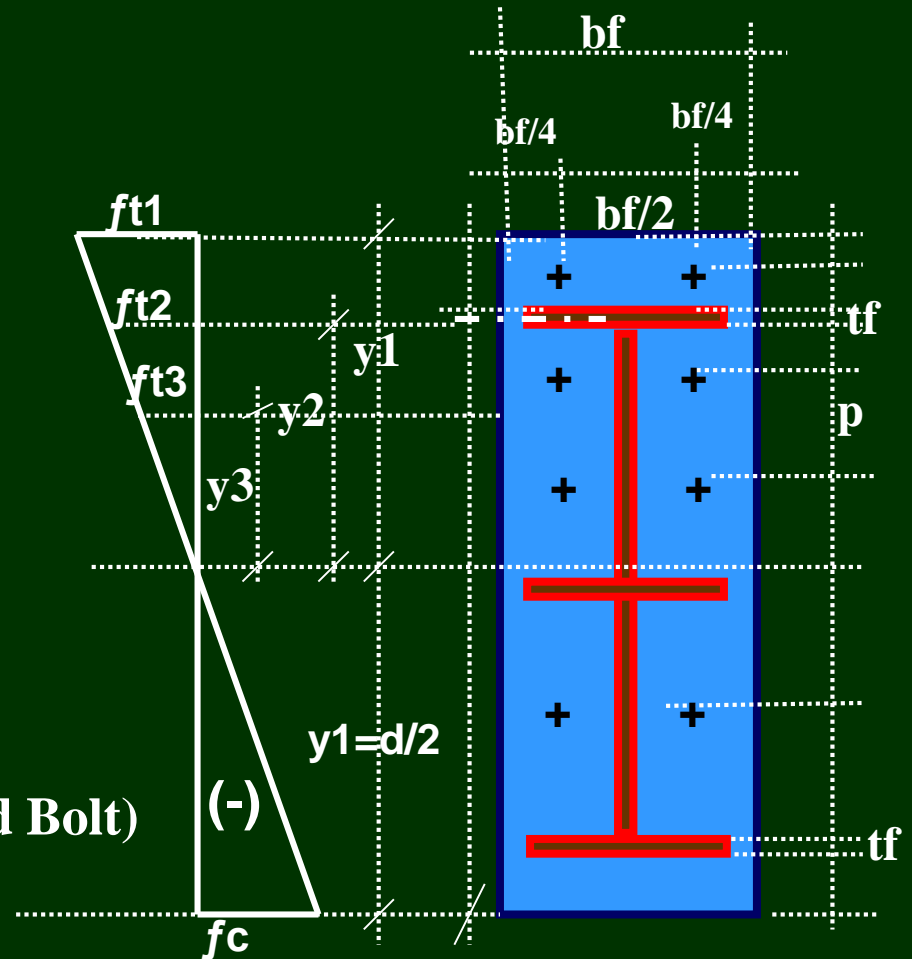
$$f_{t1} = (M * y_2 / I_x) = \dots \text{t/cm}^2$$

$$f_{t1} = (M * y_3 / I_x) = \dots \text{t/cm}^2$$

**Check for External Force  
in Bolts due to Moment**

$$T_{\text{ext.b.M}}$$

= (Actual Stress \* Stressed Area Around Bolt)



$$T1_{\text{Ext.b.M}} = [((f_{t1} + f_{t2})/2 * (bf * (y_1 - y_2))] / 2 \text{ or } 4 = \dots \text{t} \leq T_{\text{all}} = 15.43 * 0.8 \text{t}$$

$$T2_{\text{Ext.b.M}} = [((f_{t2} + f_{t3})/2 * (bf * (y_2 - y_3))] / 2 \text{ or } 4 = \dots \text{t} \leq T_{\text{all}} = 15.43 * 0.8 \text{t}$$

$$T_{3_{Ext.b.M}} = [(ft^3)/2 * (bf*y^3)] / 2 \text{ or } 4 = \dots t \leq T_{all} = 15.43*0.8t \quad \text{Safe}$$

$$T_{Ext.b.} = N' / \text{Total } n\Phi \text{ resisting the external tension force} = \dots t$$

$$T_{Total} = T_{ext.b.M.} (\text{greater}) \pm T_{Ext.b.} + P = \dots \leq 0.8T_{all} \quad (\text{Case of HSB. 10.9})$$

$$= \dots \leq 0.8T_{all} * 0.7 \quad (\text{Case of HSB. 8.8})$$

 (Code pp109 -Eq.6.16)

#### **(4) Check of Shear on Bolts:**

$$Q/\text{Bolt} = Q / n\Phi = \dots t \leq P_s = (\mu T / \gamma) \quad (4.93t) \quad \text{Connection subjected to Shear only.}$$

$$\leq ((\mu T - T_{ext,b}) / \gamma) \quad \text{Connection subjected to Shear and Tension.}$$

#### **(5) Check of Prying Force on Bolts (Eq.6-24 Code pp115) :**

The Prying Force can be determined using the following Equation:

$$P = \left[ \frac{\frac{1}{2} - \frac{wt_p^4}{30ab^2 A_s}}{\left(\frac{3a}{4b}\right)\left(\frac{a}{4b} + 1\right) + \frac{wt_p^4}{30ab^2 A_s}} \right] \cdot T_{ext.b.M.} \text{ OR } T_{ext.b.}$$

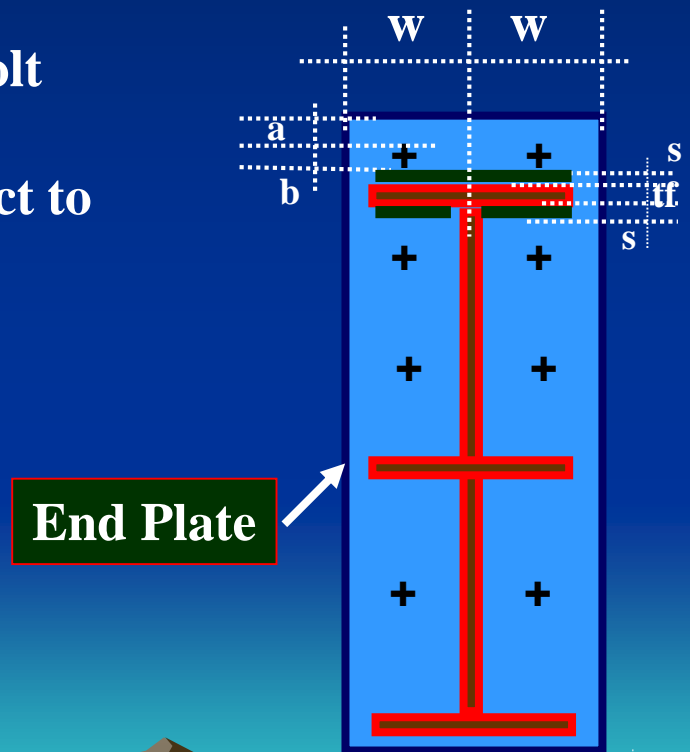
$t_p$  = Thickness of End Plate

$A_s$  = Bolt Stress Area (table 6-3 Code pp106)

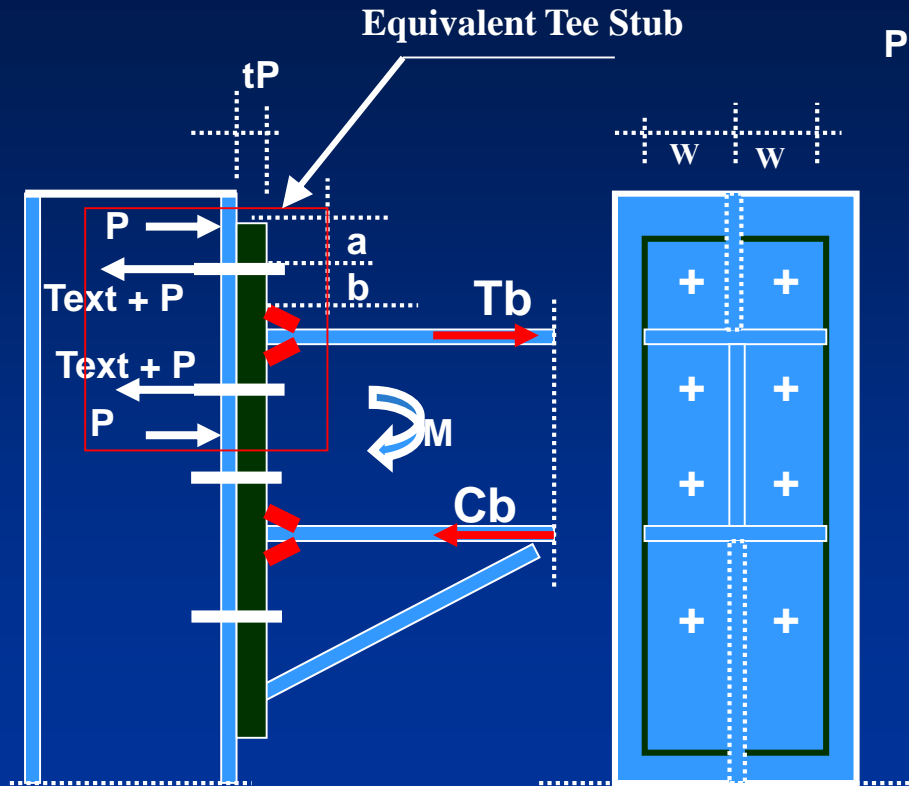
$T_{Ext. b}$  ,  $T_{Ext. b. M.}$  = Applied External Tension Force  
on one bolt column due to either external tension  
force (Text.b) or due to the replacement  
of the applied moment (M) by two equal  
external and opposite forces ( $T_b = C_b = (M/d)$ ).

$a$  ,  $b$  = Bolt outer overhanging and inner dolt  
dimensions in cm

$W$  = End Plate flange breadth with respect to  
one column of bolt



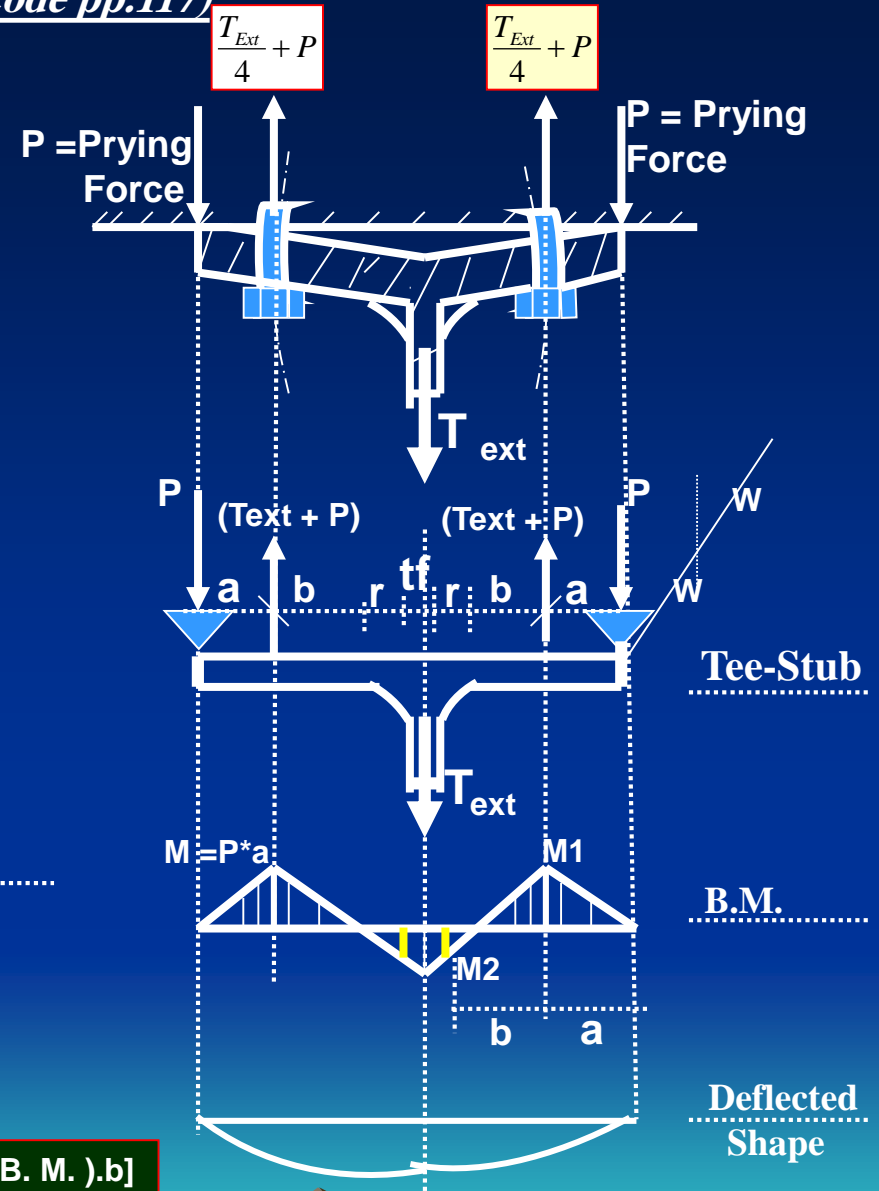
# Determination of the Prying Force "P" (Code pp.117)



End Plate Moment Connection

$$M1 = P \cdot a$$

$$M2 = P \cdot a - [(T_{ext} \cdot b \text{ OR } T_{ext} \text{ B. M.}) \cdot b]$$



Equivalent Tee Stub Connection



## (6) Design of End Plate :

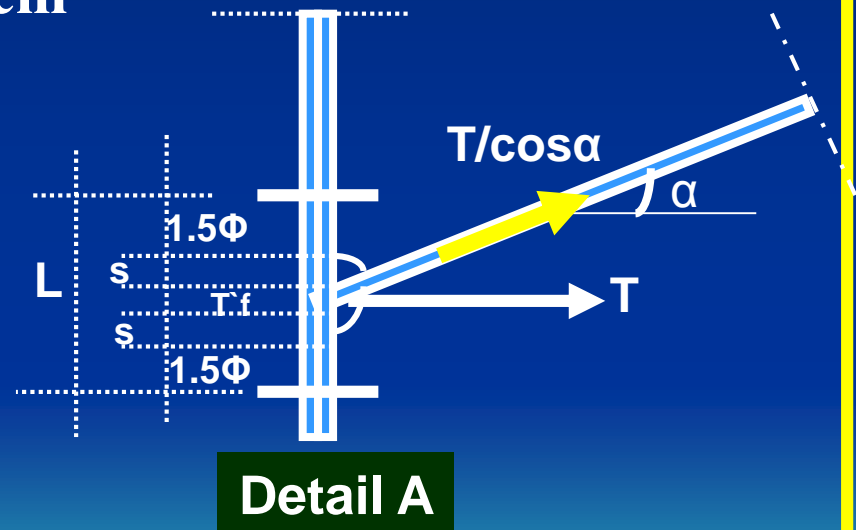
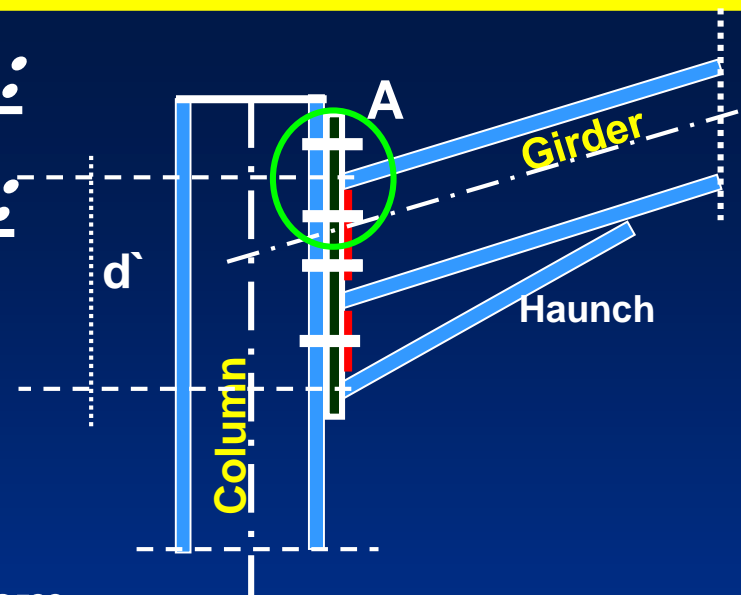
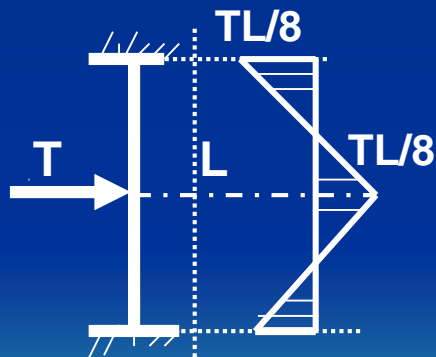
### Approximate Method:

$$L = 3\Phi + 2s + t'f = \dots \text{cm}$$

$$T = M/d' = \dots t$$

$$M = (TL/8) = \dots t \cdot \text{cm}$$

$$t_{\text{plate}} = \sqrt{6M/bf \cdot F_b} = \dots \text{cm}$$



Exact Method get After Calculating Prying Force.

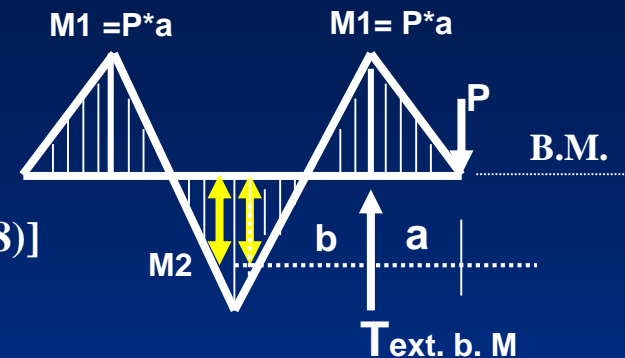
## (6) *Determination of the End Plate thickness*

### Exact Method :

(i) Compute the exact bending moments:

$$M1 = P \cdot a \quad \text{Eq.6-28 Code pp.118)}$$

$$M2 = P \cdot a - T_{\text{ext. b. M}} \cdot b \quad [\text{Eq.6-28 Code pp.118)]$$



(ii) Compute the exact required end plate thickness:

$$t_p = \sqrt{6(\text{Greater of } M1 \text{ or } M2)/2w \cdot F_b} = \quad (\text{Eq.6-27 Code pp.118})$$

Where :  $F_b = 0.72 F_y$

if  $t_p$  is of Large , it can be reduced by using a Stiffener

**(7) Check for Safety Requirements for Beam to Column Connections (Code 119 Clause 6-9-4):**

**(i) Column Web at the Vicinity (بالقرب -جوار) Compression beam Flange “Crippling of the Column Web” :**

$$t_{wc} \geq [bb.tb / (tb + 2tp + 5k)] \quad (\text{Eq.6.29 Code pp.119})$$

If Eq. (6.29) is not satisfied, use a pair of Horizontal stiffeners to achieved the following Equation:

$$2bst.tst \geq [bb.tb - (tb + 2tp + 5k).t_{wc}] \quad (\text{Eq.6.30 Code pp.119})$$

In order to prevent the Local Buckling in this stiffeners :

$$(bst / tst) \leq (25 / \sqrt{F_y}) \quad (\text{Eq.6=31 Code pp. 119})$$

**(ii) Column Flange at the Location of the Tension Beam Flange**

Bending of the column Flange is prevented if:

$$t_{fc} \geq (0.4 \sqrt{bb \cdot tb}) \quad (\text{Eq.6-32 Code pp.119})$$

If Eq. (6.32) is not satisfied, use a pair of Horizontal stiffeners to achieved the condition of equation (6-30).


### **(iii) Distorsion of the Web at Beam to Column Connection .**

**Distorsion of the Column Web is Prevented if :**

$$t_{wc} \geq (M/db)/[(0.35F_y)hc] \quad (\text{Eq.6.33 Code pp.120})$$

**If Eq.(6.33) is not satisfied use either a or b:**

- a- a double plate to lap over the web to obtain the total required thickness.**
- b- a pair of diagonal stiffeners in the direction of the diagonal compression as given in Eq.(6.34 Code pp.120)**



بِسْمِ اللَّهِ الرَّحْمَنِ الرَّحِيمِ

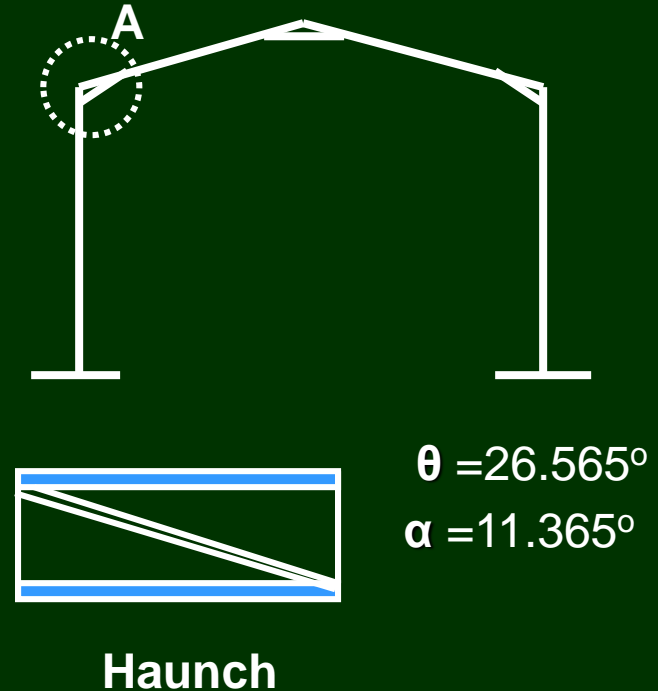
Lec.700

# Analysis and Design of Steel Connections

**Example: Design a rigid frame Connection at “A” in the shown Figure , the Connection is subjected to  $M = 20 \text{ t.m}$ ,  $Q = 10.0\text{t}$  &  $N = 5.0\text{t}$ , The beam section is a SIB No. 360 and the Column section is a BFI No. 300.**

**(1) Data Given :**

- ➔  $M_d = 20 \text{ t.m}$  ,  $Q = 10.0\text{t}$  &  $N.F. = 5.\text{t}$  ,
- ➔ Bolts Grade (8.8) ,
- ➔ Column Section is a BFI. No. 300 and
- ➔ Girder Section is a SIB No. 360,
- ➔ Haunch will be a part of a beam girder with a height equals to  $(36-2 \text{ tf}) = 32.1\text{cm}$  and cuts to two parts .
- ➔ (Column Section)  $h_{Ic} = 30$ ,  $twc = 1.1$  ,  $t_{fc} = 1.90$  ,  $b_{fc} = 30$
- ➔ (Girder Section)  $h_{Ib} = 36$ ,  $twb = 1.3$  ,  $t_{fb} = 1.95$  ,  $b_{fb} = 14.3$



## (2) Design of Weld:

$$h1 = hI / \cos\alpha = 36.73\text{cm}, \quad h2 = (hI - 2tf) / \cos\theta = 36.06\text{cm},$$

$$tf1 = tf1 / \cos\alpha = 2.0\text{cm}, \quad tf2 = (tf1 / \cos\theta) = 2.2\text{cm and,}$$

$$d = (h1 + h2) = 72.8\text{ cm}$$

(i) Check For weld thickness

(Use Haunch or not)

$$N' = N \cos\alpha - Q \sin\alpha = -8.82t$$

$$Q' = N \sin\alpha + Q \cos\alpha = 6.87t$$

$$T = C = (M / h1) = 54.45t$$

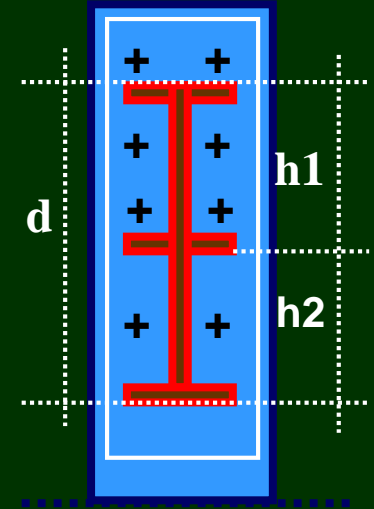
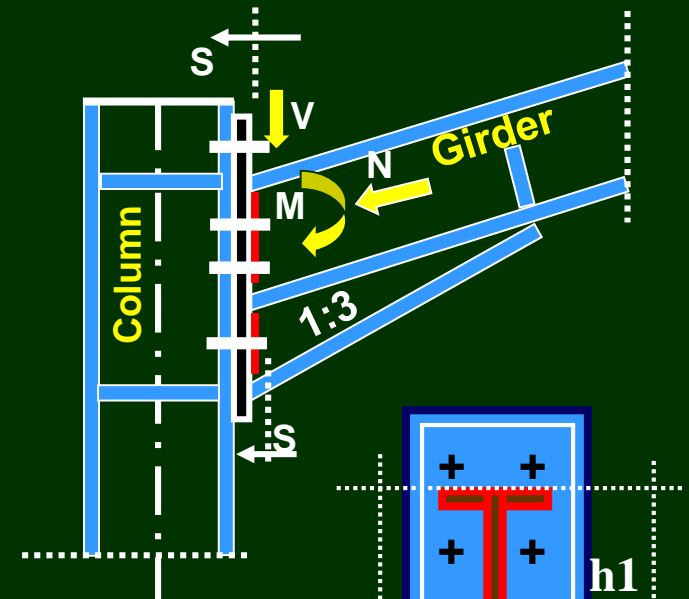
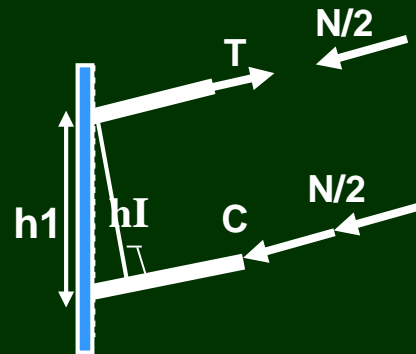
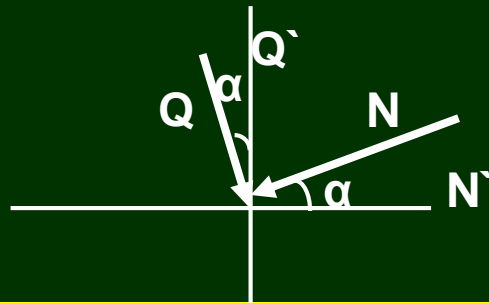
$$A = (T - N'/2) / (0.2FU) = 69.5\text{cm}^2$$

Area of Weld Around Flange =

$$A_{\text{weld}} = [(bf + (bf - tw - 2tf)] * s$$

get "s"  $s = 2.97\text{cm} > t_{fb}$

then, use Haunch



Section S – S



## (ii) Flange Weld:

$$T = C = (M/d) = (20 \times 100 / 72.8) = 27.47 \text{ t}$$

$$\text{Area} = (T - (N/2)) / 0.2F_U = (bf \cdot sf + (bf - tw - 2tf)sf) = [(27.47 - 4.41) / 0.72]$$

get  $sf = 1.36 \text{ cm}$  take  $sf = 1.4 \text{ cm} < tf$  O.K.

## (iii) Web Weld :

$$\text{Area} = (Q / 0.2F_u) = (6.87 / 0.2 \times 3.6) = 9.54 \text{ cm}^2$$

$$\text{Area} = [(d - 4tf_1 - 2tf_2) sw] \times 2$$

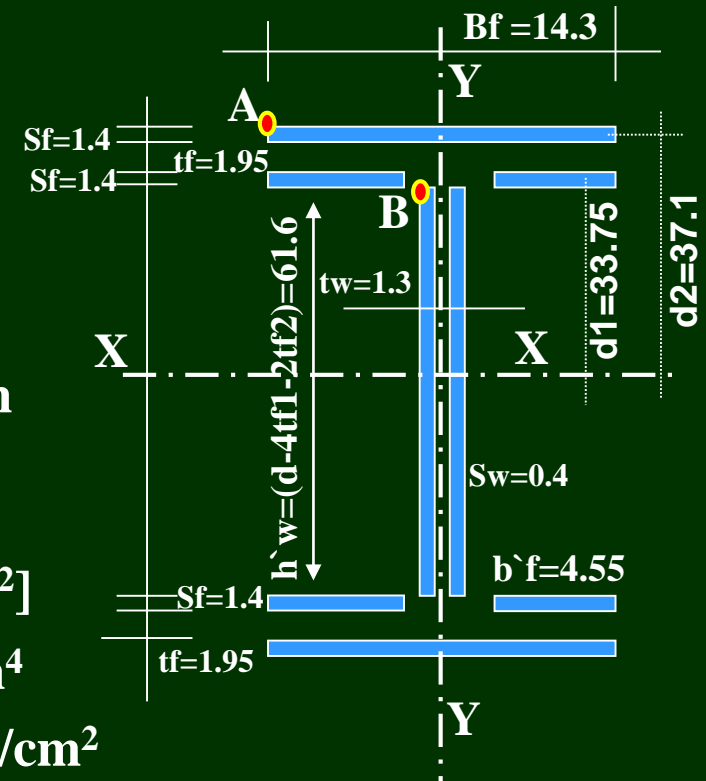
$sw = 0.08 \text{ cm} = 0.8 \text{ mm}$  take  $sw = s_{\min} = 4.0 \text{ mm}$

## (iv) Check of Stresses:

$$I_x = 2(sw \cdot h_w^3) / 12 + 4[b_f(sf)^3 / 12 + (b_f \cdot sf) \cdot d_1^2] + 2[bf \cdot sf^3 / 12 + (bf \cdot sf)(d_2)^2] = 128756.0 \text{ cm}^4$$

$$F_A = (M_x / I_x) \cdot y_A - (N / A) = 0.511 < 0.2F_U = 0.72 \text{ t/cm}^2$$

$$F_B = (M_x / I_x) \cdot y_B - (N / A) = 0.460 < 0.2F_U = 0.72 \text{ t/cm}^2$$



$$q_{yB} = (Q' / A_{\text{weld Web}}) = (6.87 / 123.2) = 0.06 \text{ t/cm}^2 < 0.2 F_U = 0.72 \text{ t/cm}^2$$

$$q_{\text{EqB}} = \sqrt{F_B^2 + 3q_{yB}^2} = 0.47 \text{ t/cm}^2 < 0.2 F_U * 1.1 = 0.79 \text{ t/cm}^2$$

### (3) Design of High Strength Bolts:

#### (i) Approximate Method:

$$T = (M/d) = (2000 / 72.8) = 27.47 \text{ t}$$

Assume to use 2 rows of 2-bolts each  
round the tension flange ( $n\Phi = 4$ )

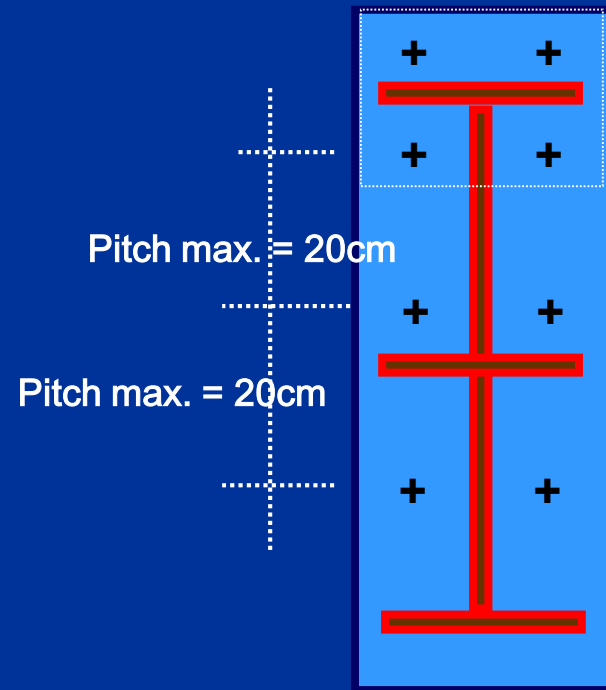
$$\text{Tension force / Bolt} = (T / n\Phi) = 6.87 \text{ t}$$

Try M(20) (8.8)

From table (6-3) (Code pp106)

$$\text{Get, Tall} = 15.43 * 0.8 * 0.7 = 6.91 \text{ t}$$

$$, P_s = 4.93 * 0.7 = 3.45 \text{ t}$$



Add two rows in the Compression zone at maximum pitch 20cm

## (ii) Exact Analysis:

- ➔ Assume the required number of bolts (H.S.B.) in the Tension side from the following Equation  $N\Phi t = (M/(0.8d*0.6T)) = 3.8\Phi \approx 6\Phi$
- ➔ Add to the calculated ( $N\Phi t$ ) a row of bolts in the compression zone to get the total number of bolts ( $N\Phi$ ) =  $6\Phi + 2\Phi = 8\Phi$
- ➔ Since the Pretension Force in Pretensioned Bolts (HSB) “T” causes the Head Plate to be always in Compression, and is always in Contact with Column.

The Section resisting the straining actions is the total contact area of the end plate and its inertia is calculated as follows:

$$bf = bfc = 30\text{cm}$$

$$d^* = d + 2(8.0) = 72.8 + 16 = 88.8\text{cm}$$

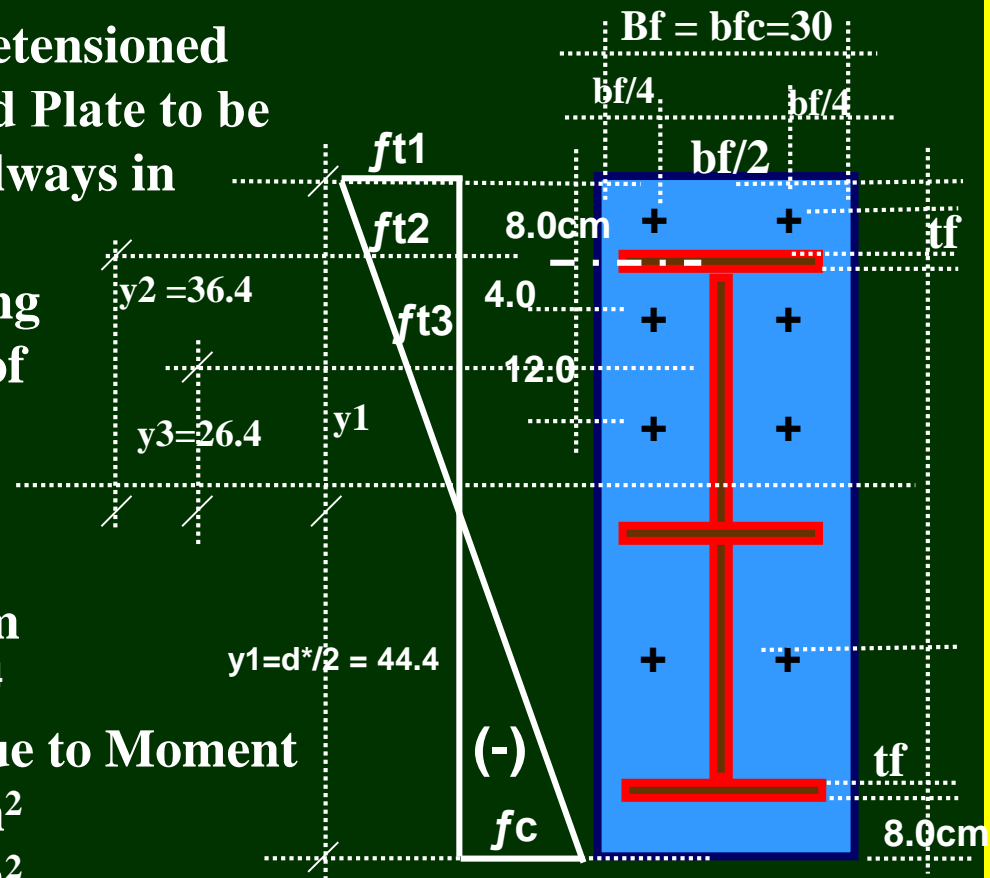
$$I_x = bf (d^*)^3 / 12 = 1750567.7 \text{ cm}^4$$

Check for External Force in Bolts due to Moment

$$ft1 = (M * y1 / I_x) = 0.051 \text{ t/cm}^2$$

$$ft2 = (M * y2 / I_x) = 0.042 \text{ t/cm}^2$$

$$ft3 = (M * y3 / I_x) = 0.03 \text{ t/cm}^2$$



Stress Distribution Due to B.M.


$$T_{\text{Ext. b. M}} = (\text{Actual Stress} * \text{Stressed Area Around Bolt})$$

$$T1_{\text{Ext.b.M}} = [((ft1+ft2)/2 * (bf*(y1-y2))] / 2 = 5.6t \leq T_{\text{all}} = 15.43*0.8 *0.7 = 8.64 t$$

$$T2_{\text{Ext.b.M}} = [((ft2+ ft3)/2 * (bf*(y2-y3))] / 2 = 5.4t \leq T_{\text{all}} = 8.64t$$

$$T3_{\text{Ext.b.M}} = [((ft3)/2 * (bf*(y3))] / 2 = 6.00 \leq T_{\text{all}} = 8.64t$$

$$T_{\text{Ext. b.N}} = N / \text{Total } n\Phi \text{ resisting the external tension force} = (8.82/8) = -1.1t$$

  $T_{\text{Total/Bolt}} = T_{\text{Ext. b. M. (greater)}} \pm T_{\text{Ext.b.N}} + P = \dots \leq 0.8T_{\text{all}}*0.7 = 8.64t$   
 $= [6.0 - 1.1 + 0.50] = 5.40 < 8.64 \quad \text{O.K. Safe}$   
 (Case of HSB. 8.8) (Code pp109 - Eq.6.16)

#### (4) Check of Shear on Bolts:

$$Q/\text{Bolt} = Q / n\Phi = (6.87/8) = 0.86t \leq ((\mu T - T_{\text{ext,b.N}})/\gamma) = (P_s - (T_{\text{ext,b.N}}/\gamma))$$

$$= (4.93 - (1.1/1.05)) = 3.88 * 0.7 \text{ (Bolt Grade 8.8)} = 2.72t \quad \text{Safe}$$

(Connection subjected to Shear and Tension).

$$\gamma = 1.25 \text{ (Case I) and } = 1.05 \text{ (Case II) [Code pp.105]}$$

**(5) Check of Prying Force on Bolts: (Eq. 6-24 Code pp.115)**

***The Prying Force is determined using the following Equation:***

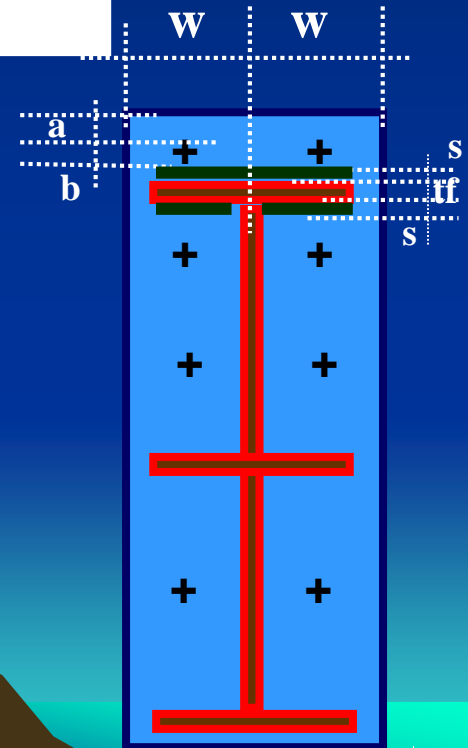
$$P = \left[ \frac{\frac{1}{2} - \frac{wt_p^4}{30ab^2 A_s}}{\left(\frac{3a}{4b}\right)\left(\frac{a}{4b} + 1\right) + \frac{wt_p^4}{30ab^2 A_s}} \right] T_{ext.b.M.} \text{ OR } T_{ext.b.}$$

$$a = 4cm, \quad b = 1.9cm, \quad W = 15cm$$

$$A_s = 2.45cm^2, \quad T_{Ext. b. M} = 6.0t$$

$$T_{Ext. b. N} = -1.1t, \quad tp = 2.1cm$$

$$p = +0.5t$$



## (6) Design of End Plate :

### Approximate Method:

$$\Phi = 20\text{mm} , sf = 14\text{mm} , tf1 = 20\text{mm}$$

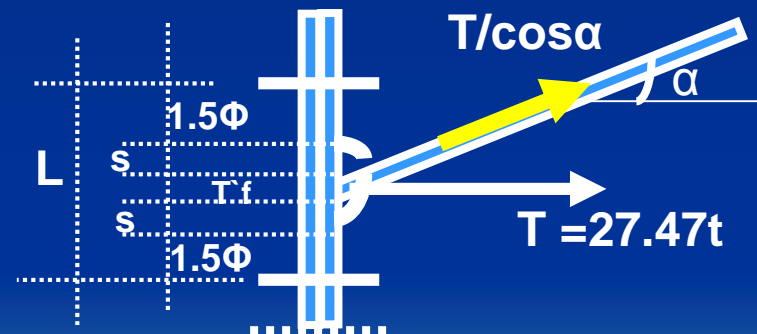
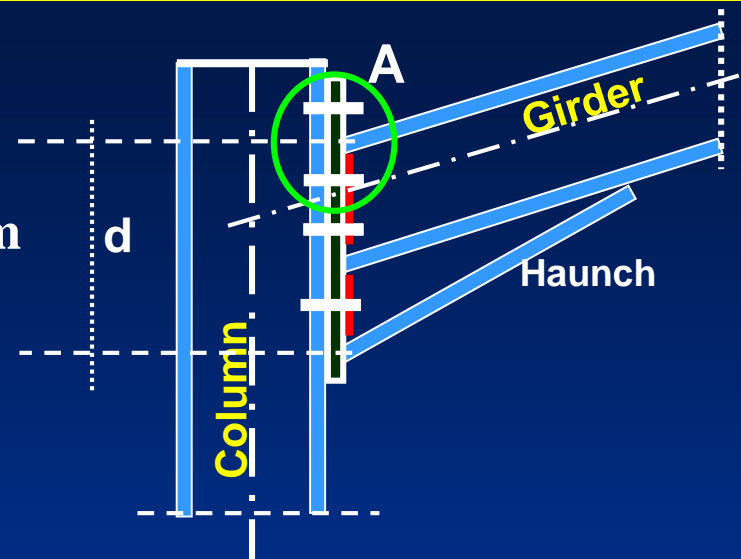
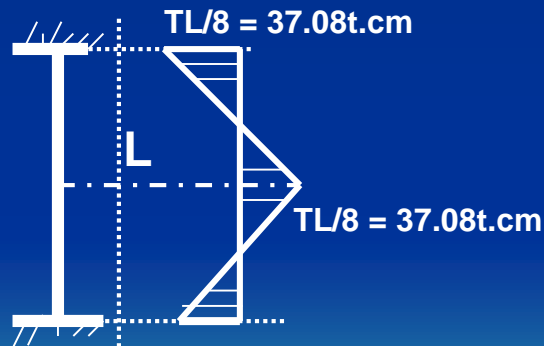
$$L = 3\Phi + 2s + t^f = 10.8 \text{ cm}$$

$$T = M/d = 27.47t$$

$$M = (TL/8) = 37.084 \text{ t.cm}$$

$$t_{\text{plate}} = t_p = \sqrt{6M/bf \cdot F_b} = 2.07\text{cm}$$

$$F_b = 0.72F_y = 1.728t/cm^2$$



**Detail A**

## Exact Method :

### (i) Compute the exact bending moments:

$$M1 = P*a = 0.50 * 4 = 2.0 \text{ t. cm} \quad (\text{Eq.6-28 Code pp.118})$$

$$M2 = P*a - T_{\text{Ext. b. m.}} * b = 2.0 - (-1.1) * 1.9 = 4.1 \text{ t.cm}$$

[Eq.6-28 Code pp.118)]

### (ii) Compute the exact required end plate thickness:

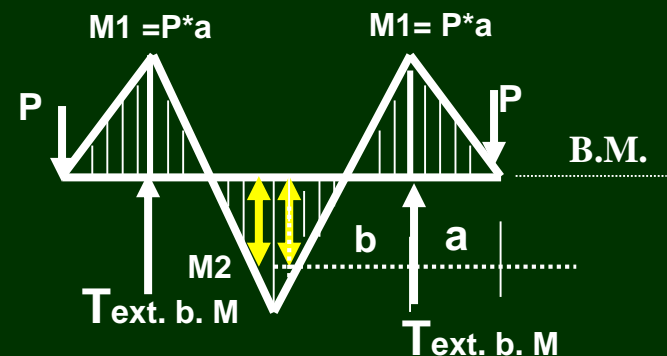
$$t_p = \sqrt{6(\text{Greater of } M1 \text{ or } M2)/2w * F_b} \quad (\text{Eq.6-27 Code pp.118})$$

Where :  $F_b = 0.72 F_y$

$$t_p = \sqrt{6 * 4.1/2 * 15 * 0.72 * 2.4} = 0.70 \text{ cm}$$

take  $t_p = 10.0\text{mm}$  O.K.

$t_p$  is reasonable and no large,



**(i) Column Web at the Vicinity (بالقرب - جوار) Compression beam Flange “Crippling of the Column Web” :**

### **Use a pair of Horizontal Stiffeners**



**Required Stiffeners Areas ( $A_{st}$ )  $\geq$  (Applied Area – Resisting Area)**

$$A_{st} = 2b_{st} * t_{st} \geq (b_b * t_b - L * t_{wc}) \quad (\text{Eq.6-30 Code pp.119})$$

**Where :**  $b_{st} = (h_{IC} - 2 t_{FC}),$

$$L = (5K + 2t_p + t_b / \cos \alpha)$$

$$\text{Get } t_{st} \geq \dots \text{cm} \quad (1)$$

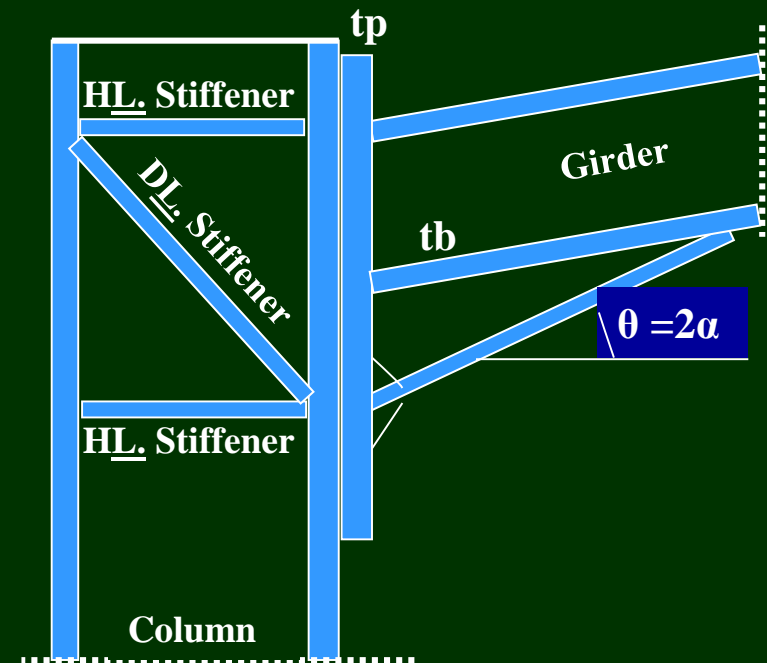
**In order to prevent the Local Buckling**

**in this stiffeners:**

$$(b_{st} / t_{st}) \leq (25 / \sqrt{F_y}) \quad (\text{Eq.6.31 Code pp. 119})$$

$$\text{Then, } t_{st} \geq (b_{st} / 16.1) \quad (2)$$

***From (1) and (2) take “ $t_{st}$ ” greater***



(ii) (Check Bending of Tension Column Flange):

Bending of the Column flange is Prevented if :

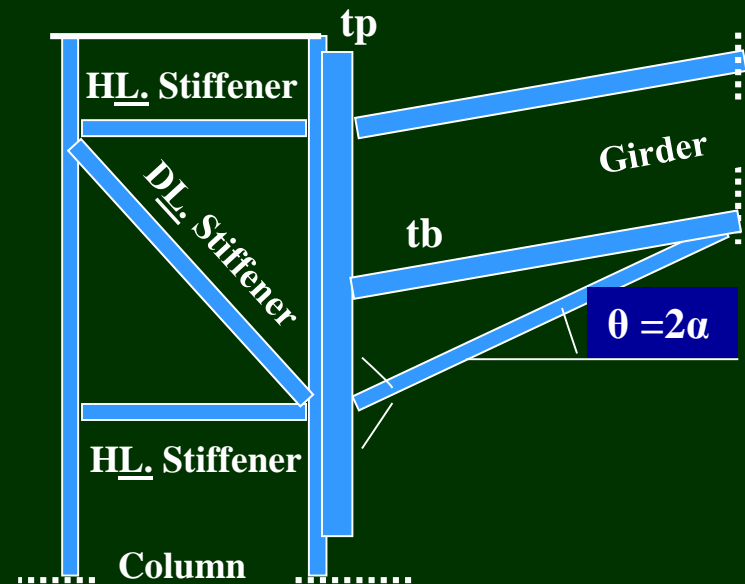
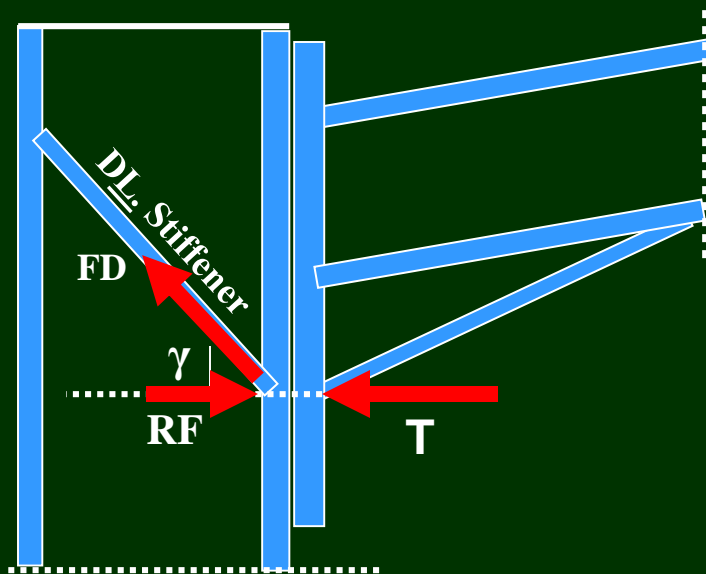
$$t_{fc} \geq 0.4\sqrt{b_b \cdot t_b} \quad (\text{Eq.6-32 Code pp119})$$

$$0.4\sqrt{14.3 \cdot 1.95} = 2.11 \text{ cm} > t_{fc} = 1.9 \quad \text{Unsafe}$$

If Equation 6.32 is not satisfied, use a pair of horizontal Stiffeners fulfilling the condition of Equation (6.30).

$$t_{st} \geq [(b_b \cdot t_b - (t_b + 2t_p + 5k) \cdot t_{wc}) / 2 \cdot b_{st}] \quad [\text{Eq. (6.30 Code p.119)}]$$

$$t_{st} \geq [(14.3 \cdot 2.0) - (25.4) \cdot 1.1 / 14.45] = 0.03 \text{ cm take } t_{st} = t_{\min.} = 4 \text{ mm}$$



### (iii) (Stability Check of the Corner Web)

Distorsion of the Column Web is Prevented if :

Applied Force  $T = (M / (d)) = 27.47t$

Resistance Force =  $RF = (hI_c * t_{wc} * q_{all.sh.}) = (hI_c * t_{wc} * 0.35F_y) = 27.72t$

For Safe Against Distorsion of the Column Web  $[RF \geq T]$

Then,  $t_{wc} \geq (M/d) / [(0.35F_y)h_c] = 1.09 = 1.1 \text{ cm} = t_{wc \text{ act}}$

(Eq.6.33 Code pp.120)

➔ If Eq.(6.33) is not satisfied use either (a) or (b):

(a) - A Pair of Diagonal Stiffeners in the Direction of the Diagonal Compression as Given in Eq.(6.34 Code pp.120)

Remaining Force “Rem.F” = Applied Force “T” – Resistance Force “RF”

$Rem.F = (M/d_b) - (0.35F_y) * h_c * t_{wc}$

Force in Diagonal Stiffener =  $F_D = Rem.F / \cos \gamma$

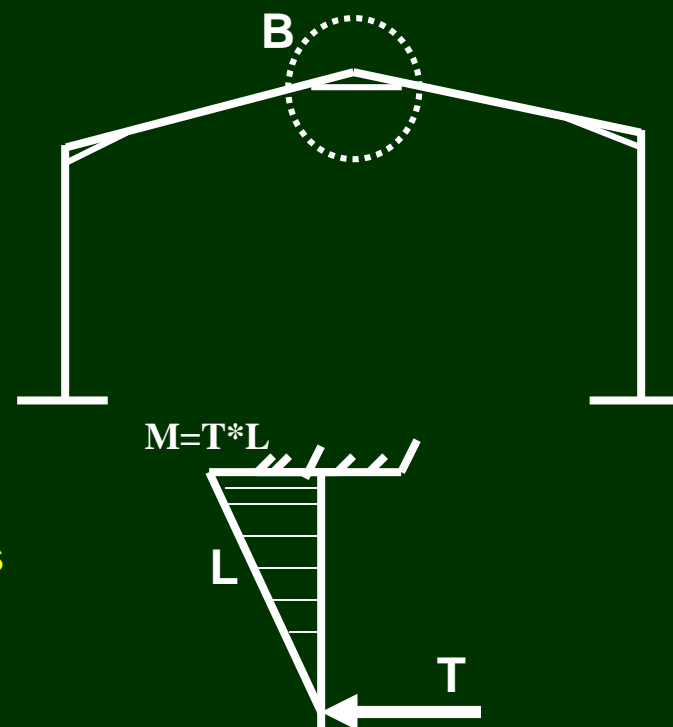
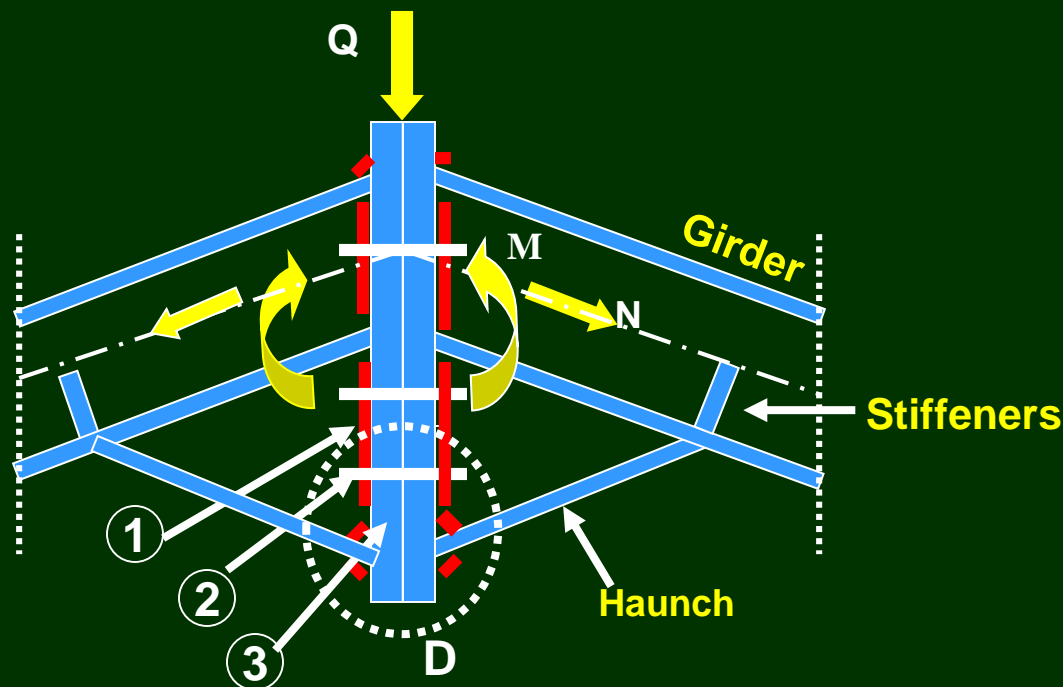
$F_D = \text{Area of Stiffeners} * \text{Allowable Stresses} = 2 * (b_{st} * t_{st}) * F_{all.t}$

$t_{st} = (F_D / 2b_{st}) * F_{all.t}$

(b) – A double Plate to Lap Over the Web to Obtain the Total Required Thickness.

# Apex Connections (Rigid Connections):

Apex Rigid Connections are Those Transmitting the B.M., S.F. and N.F from One Structure Element to the Other.



End Plate (Detail D)

Elements of Connection

①

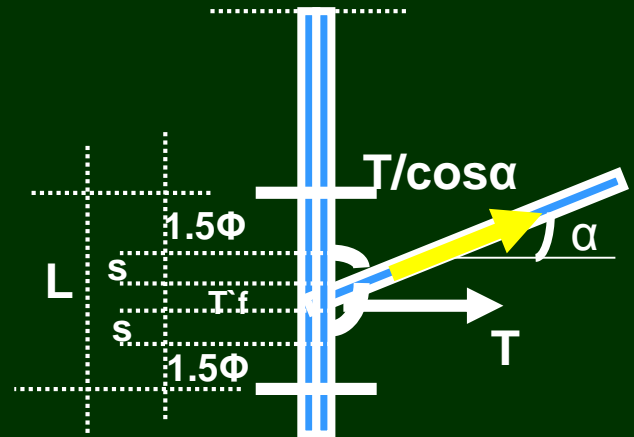
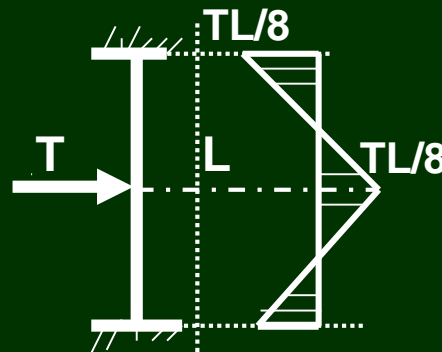
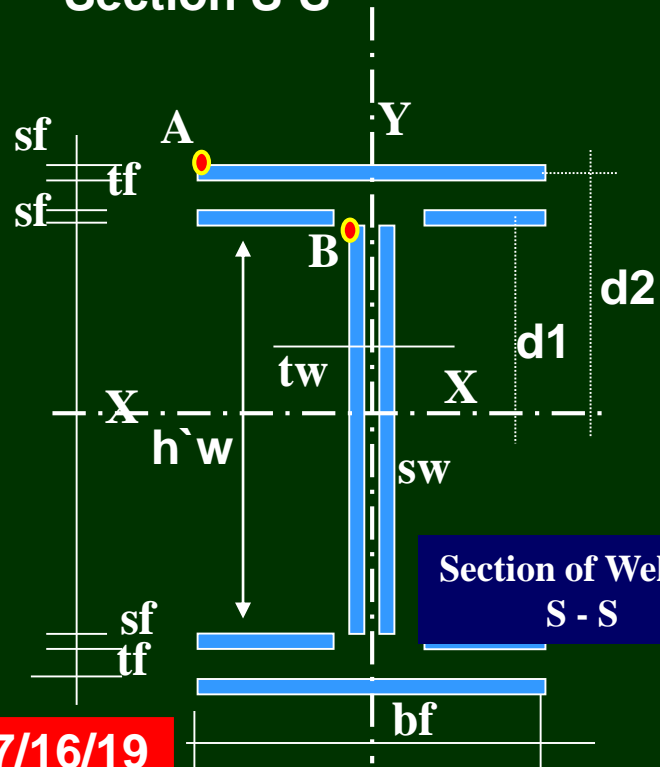
Weld

②

Bolts

③

End Plate



## Detail A

### End Plate (Detail D)

# Design Steps of Apex Connections:

## (1) Data Given:

B.M., S.F., N.F., Bolts, Column and Girder Cross Sections.

## (2) Design of Weld:

- (i) Check For weld thickness (Use Haunch or not).
- (ii) Flange Weld.
- (iii) Web Weld .
- (iv) Check of Stresses.

## (3) Design of High Strength Bolts:

- (i) Approximate Method.
- (ii) Exact Analysis.

## (4) Check of Shear on Bolts:

## (5) Check of Prying Force on Bolts:

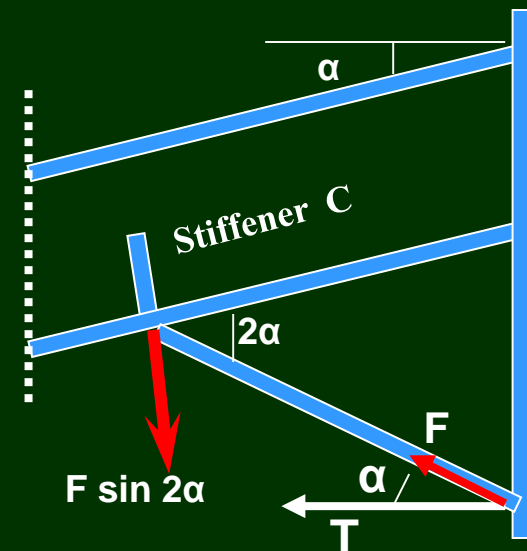
## (6) Design of End Plate : (i) Approximate Method (ii) Exact Method.

## Design of the Stiffener “C”:

- Determine the HL. Force “T”.
- Find The Force “F” =  $T / \cos \alpha$
- Force in Stiffener “C” =  $FC = F \sin 2\alpha$
- $FC = 0.5 * [(bst * tst) * Fall.t] = 0.5[(bst * tst) * 1.4]$

get tst

Where :  $bst = 0.5 * (bb - twb)$



Force in Stiffener

# End Lec.700

7/19/19